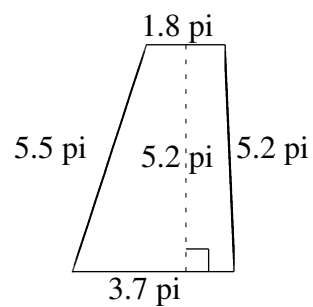
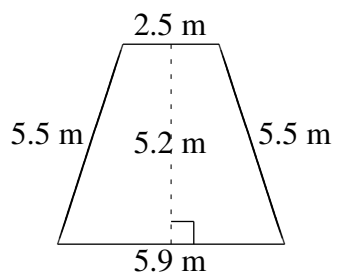
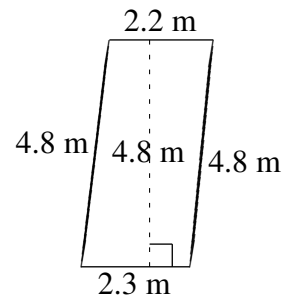
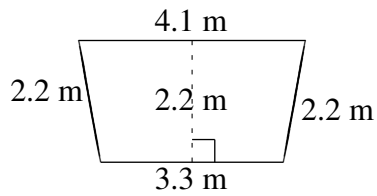
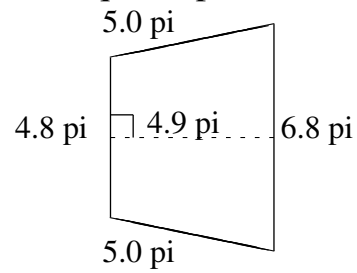
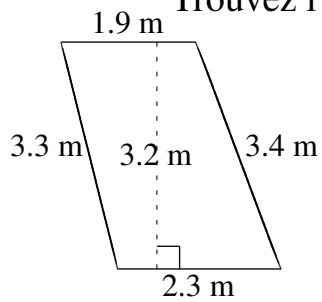


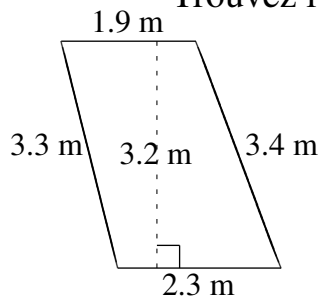
## Aire et Périmètre de Trapèzes (A)

Trouvez l'aire et le périmètre de chaque trapèze.



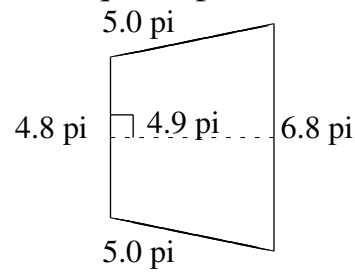
# Aire et Périmètre de Trapèzes (A) Solutions

Trouvez l'aire et le périmètre de chaque trapèze.



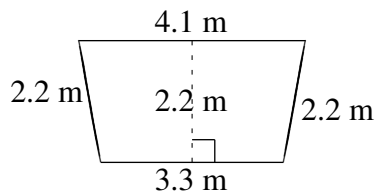
$$A = 6.72 \text{ m}^2$$

$$P = 10.9 \text{ m}$$



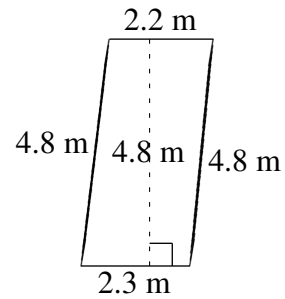
$$A = 28.42 \text{ pi}^2$$

$$P = 21.6 \text{ pi}$$



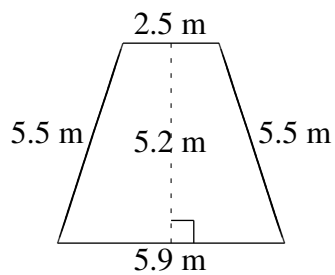
$$A = 8.14 \text{ m}^2$$

$$P = 11.8 \text{ m}$$



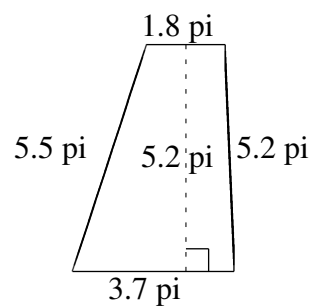
$$A = 10.80 \text{ m}^2$$

$$P = 14.1 \text{ m}$$



$$A = 21.84 \text{ m}^2$$

$$P = 19.4 \text{ m}$$



$$A = 14.30 \text{ pi}^2$$

$$P = 16.2 \text{ pi}$$