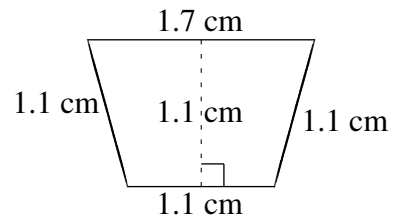
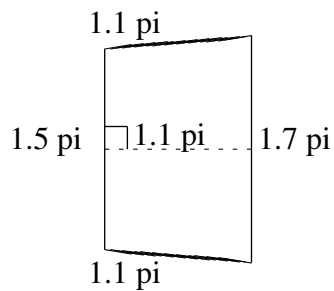
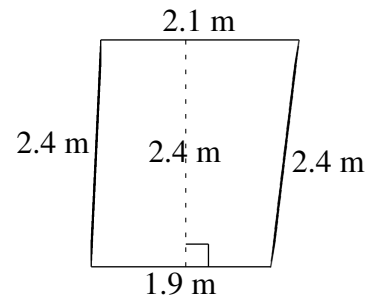
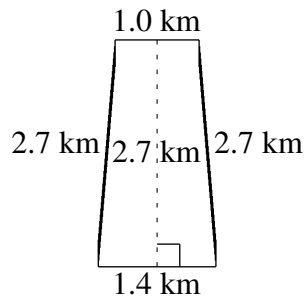
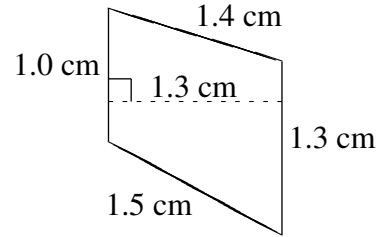
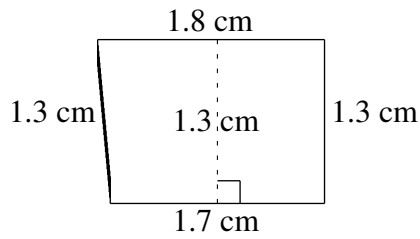


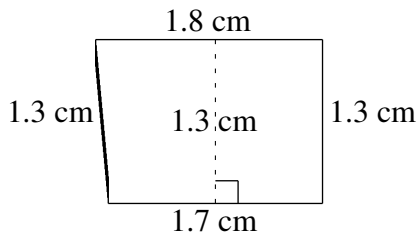
Aire et Périmètre de Trapèzes (J)

Trouvez l'aire et le périmètre de chaque trapèze.



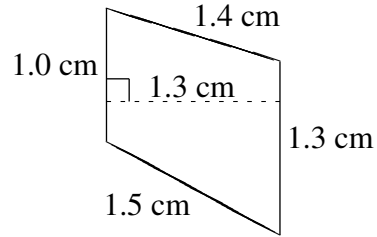
Aire et Périmètre de Trapèzes (J) Solutions

Trouvez l'aire et le périmètre de chaque trapèze.



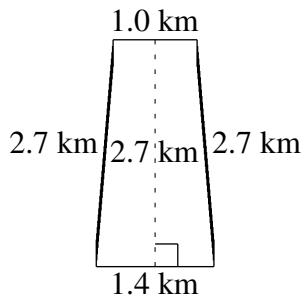
$$A = 2.275 \text{ cm}^2$$

$$P = 6.1 \text{ cm}$$



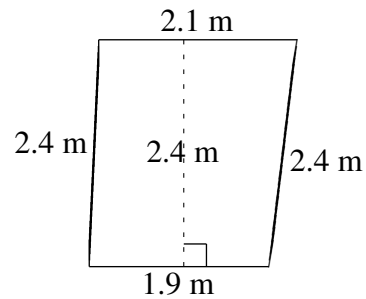
$$A = 1.495 \text{ cm}^2$$

$$P = 5.2 \text{ cm}$$



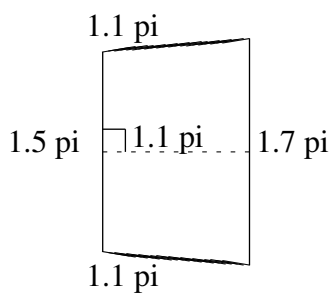
$$A = 3.24 \text{ km}^2$$

$$P = 7.8 \text{ km}$$



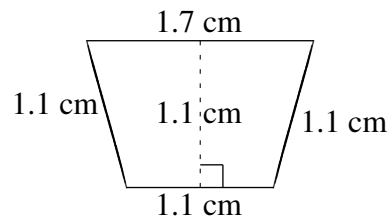
$$A = 4.80 \text{ m}^2$$

$$P = 8.8 \text{ m}$$



$$A = 1.76 \text{ pi}^2$$

$$P = 5.4 \text{ pi}$$



$$A = 1.54 \text{ cm}^2$$

$$P = 5.0 \text{ cm}$$