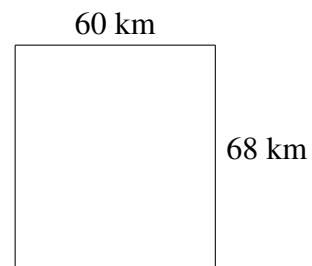
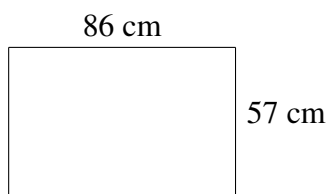
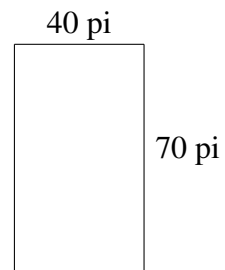
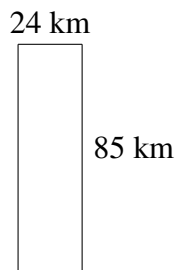
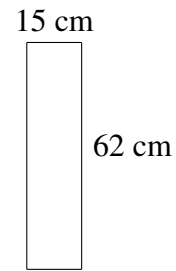




Aire et Périmètre de Rectangles (J)

Trouvez l'aire et le périmètre de chaque rectangle.

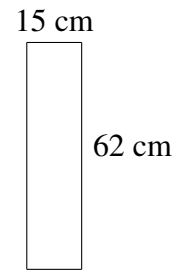


Aire et Périmètre de Rectangles (J) Solutions


Trouvez l'aire et le périmètre de chaque rectangle.



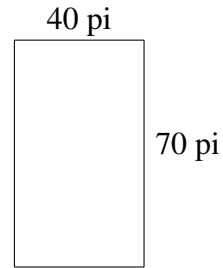
$$A = 1290 \text{ km}^2$$
$$P = 202 \text{ km}$$



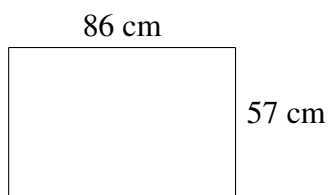
$$A = 930 \text{ cm}^2$$
$$P = 154 \text{ cm}$$



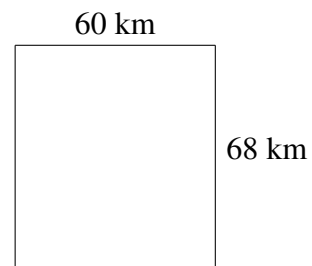
$$A = 2040 \text{ km}^2$$
$$P = 218 \text{ km}$$



$$A = 2800 \text{ pi}^2$$
$$P = 220 \text{ pi}$$



$$A = 4902 \text{ cm}^2$$
$$P = 286 \text{ cm}$$



$$A = 4080 \text{ km}^2$$
$$P = 256 \text{ km}$$