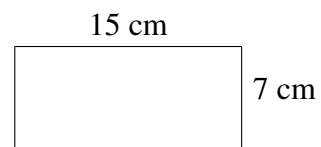
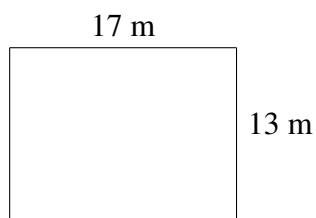
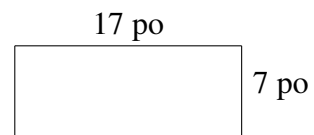
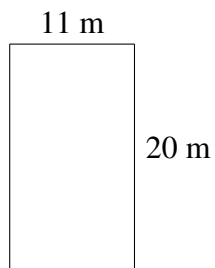
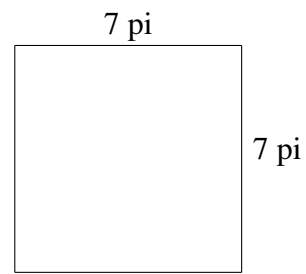
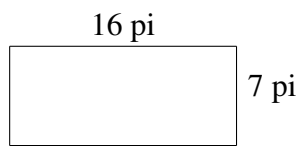


Aire et Périmètre de Rectangles (I)

Trouvez l'aire et le périmètre de chaque rectangle.



Aire et Périmètre de Rectangles (I) Solutions

Trouvez l'aire et le périmètre de chaque rectangle.

