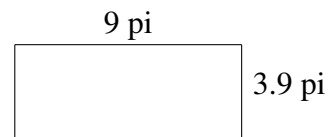
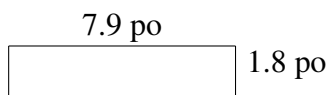
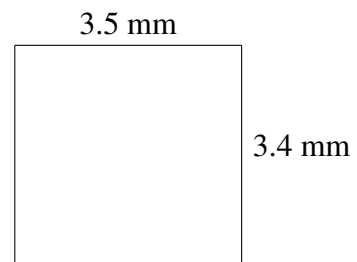
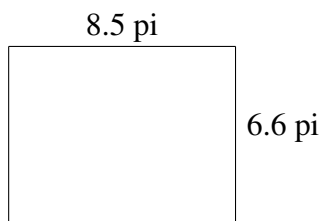
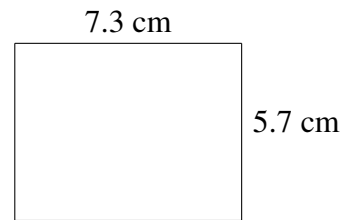




## Aire et Périmètre de Rectangles (J)

Trouvez l'aire et le périmètre de chaque rectangle.




# Aire et Périmètre de Rectangles (J) Solutions


Trouvez l'aire et le périmètre de chaque rectangle.




$1 \text{ pi}$   
 $4 \text{ pi}$   
 $A = 4 \text{ pi}^2$   
 $P = 10 \text{ pi}$




$7.3 \text{ cm}$   
 $5.7 \text{ cm}$   
 $A = 41.61 \text{ cm}^2$   
 $P = 26.0 \text{ cm}$




$8.5 \text{ pi}$   
 $6.6 \text{ pi}$   
 $A = 56.10 \text{ pi}^2$   
 $P = 30.2 \text{ pi}$



$3.5 \text{ mm}$   
 $3.4 \text{ mm}$   
 $A = 11.90 \text{ mm}^2$   
 $P = 13.8 \text{ mm}$



$7.9 \text{ po}$   
 $1.8 \text{ po}$   
 $A = 14.22 \text{ po}^2$   
 $P = 19.4 \text{ po}$



$9 \text{ pi}$   
 $3.9 \text{ pi}$   
 $A = 35.1 \text{ pi}^2$   
 $P = 25.8 \text{ pi}$