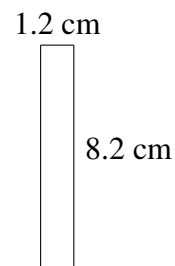
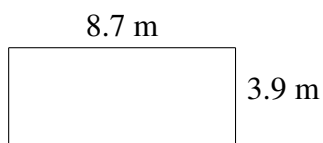
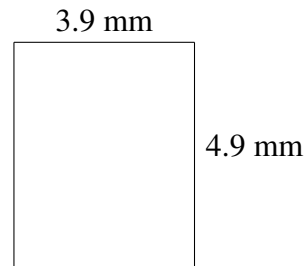
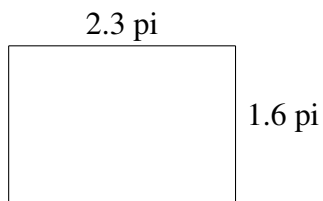
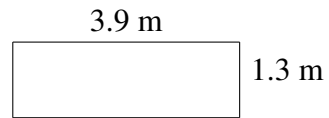
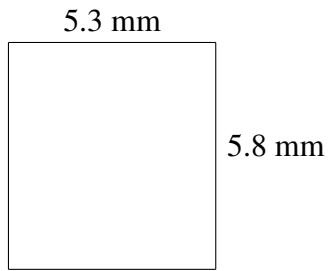


Aire et Périmètre de Rectangles (H)

Trouvez l'aire et le périmètre de chaque rectangle.



Aire et Périmètre de Rectangles (H) Solutions

Trouvez l'aire et le périmètre de chaque rectangle.

