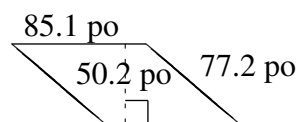
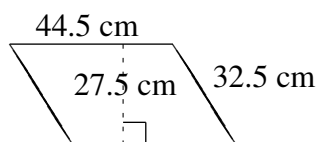
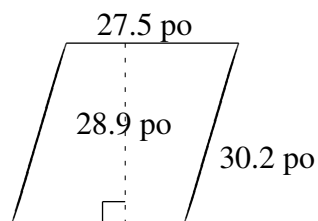
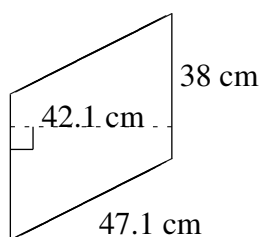
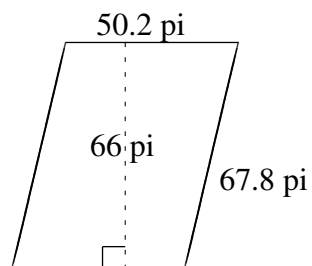
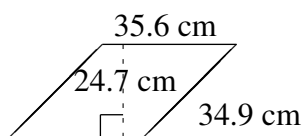


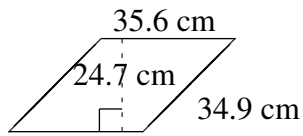
Aire et Périmètre de Parallélogrammes (D)

Trouvez l'aire et le périmètre de chaque parallélogramme.

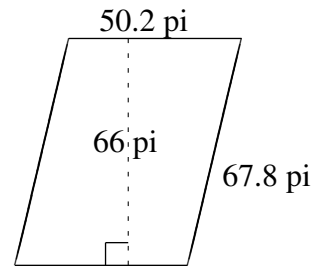


Aire et Périmètre de Parallélogrammes (D) Solutions

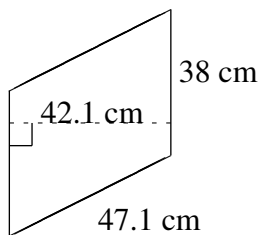
Trouvez l'aire et le périmètre de chaque parallélogramme.



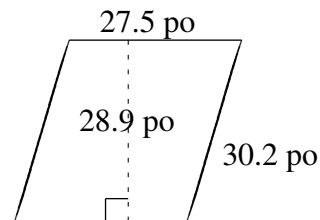
$$A = 879.32 \text{ cm}^2$$
$$P = 141.0 \text{ cm}$$



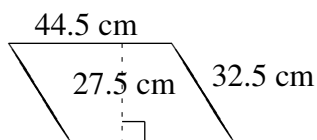
$$A = 3313.2 \text{ pi}^2$$
$$P = 236.0 \text{ pi}$$



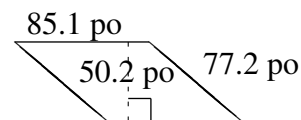
$$A = 1599.8 \text{ cm}^2$$
$$P = 170.2 \text{ cm}$$



$$A = 794.75 \text{ po}^2$$
$$P = 115.4 \text{ po}$$



$$A = 1223.75 \text{ cm}^2$$
$$P = 154.0 \text{ cm}$$



$$A = 4272.02 \text{ po}^2$$
$$P = 324.6 \text{ po}$$