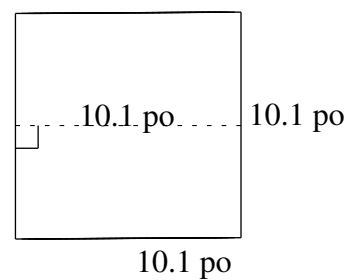
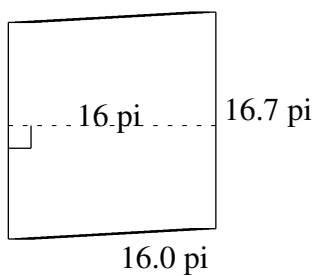
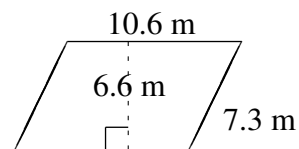
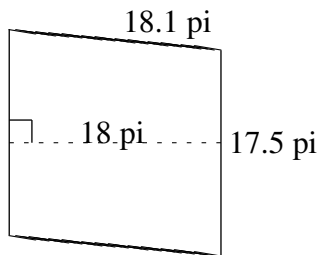
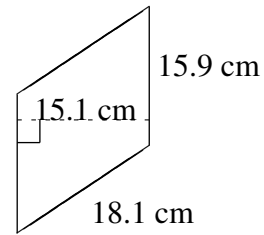
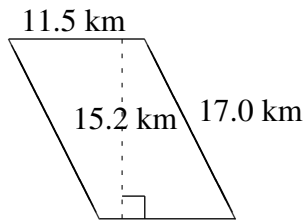


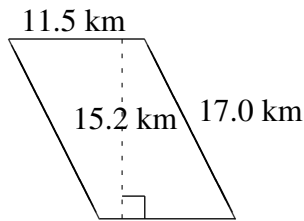
Aire et Périmètre de Parallélogrammes (I)

Trouvez l'aire et le périmètre de chaque parallélogramme.



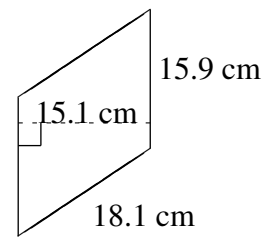
Aire et Périmètre de Parallélogrammes (I) Solutions

Trouvez l'aire et le périmètre de chaque parallélogramme.



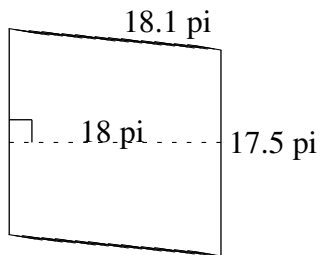
$$A = 174.80 \text{ km}^2$$

$$P = 57.0 \text{ km}$$



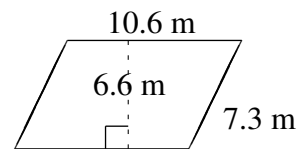
$$A = 240.09 \text{ cm}^2$$

$$P = 68.0 \text{ cm}$$



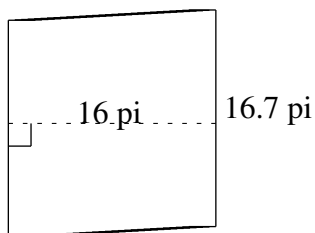
$$A = 315.0 \text{ pi}^2$$

$$P = 71.2 \text{ pi}$$



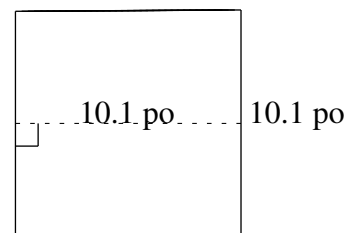
$$A = 69.96 \text{ m}^2$$

$$P = 35.8 \text{ m}$$



$$A = 267.2 \text{ pi}^2$$

$$P = 65.4 \text{ pi}$$



$$A = 102.101 \text{ po}^2$$

$$P = 40.4 \text{ po}$$