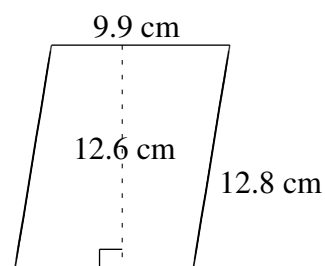
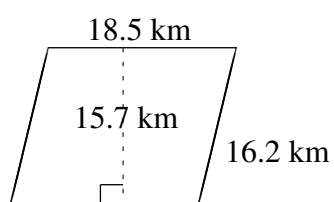
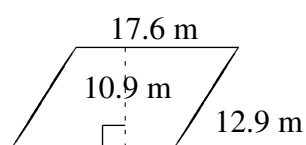
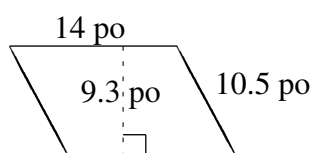
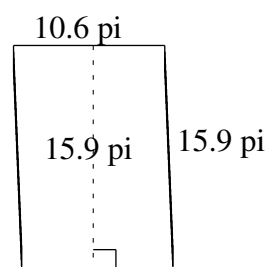
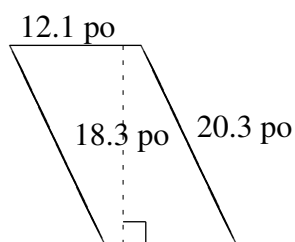


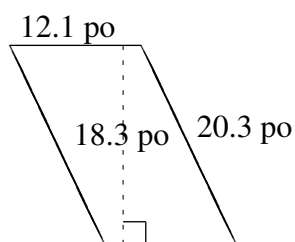
## Aire et Périmètre de Parallélogrammes (H)

Trouvez l'aire et le périmètre de chaque parallélogramme.

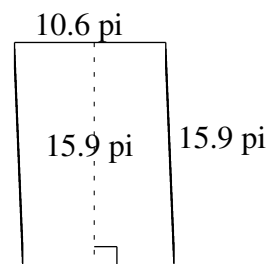


# Aire et Périmètre de Parallélogrammes (H) Solutions

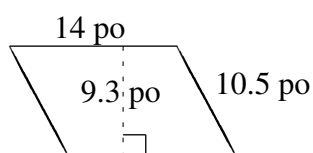
Trouvez l'aire et le périmètre de chaque parallélogramme.



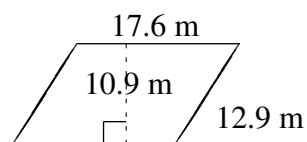
$$A = 221.43 \text{ po}^2$$
$$P = 64.8 \text{ po}$$



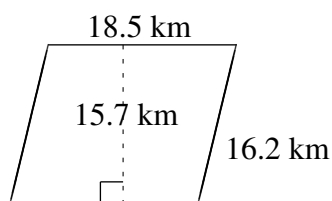
$$A = 168.54 \text{ pi}^2$$
$$P = 53.0 \text{ pi}$$



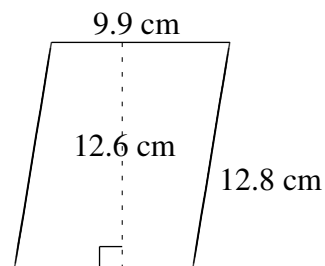
$$A = 130.2 \text{ po}^2$$
$$P = 49.0 \text{ po}$$



$$A = 191.84 \text{ m}^2$$
$$P = 61.0 \text{ m}$$



$$A = 290.45 \text{ km}^2$$
$$P = 69.4 \text{ km}$$



$$A = 124.74 \text{ cm}^2$$
$$P = 45.4 \text{ cm}$$