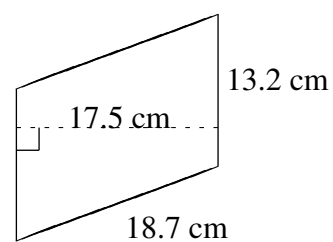
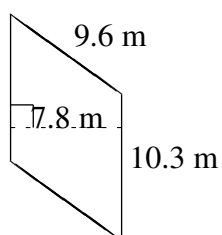
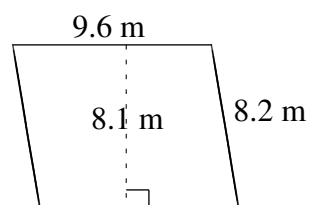
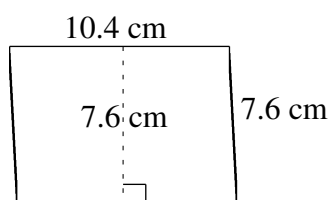
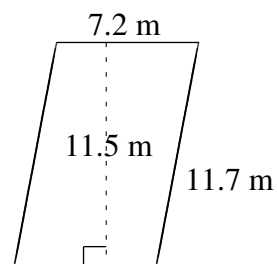
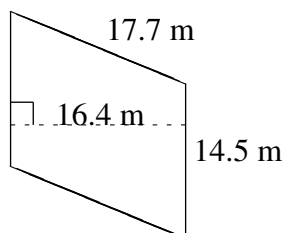


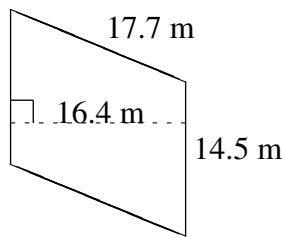
Aire et Périmètre de Parallélogrammes (B)

Trouvez l'aire et le périmètre de chaque parallélogramme.

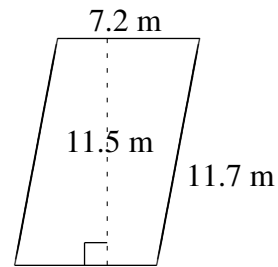


Aire et Périmètre de Parallélogrammes (B) Solutions

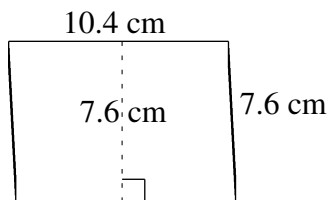
Trouvez l'aire et le périmètre de chaque parallélogramme.



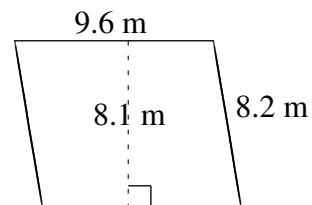
$$A = 237.80 \text{ m}^2$$
$$P = 64.4 \text{ m}$$



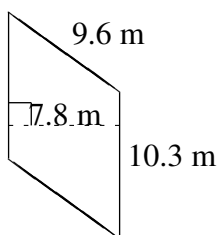
$$A = 82.80 \text{ m}^2$$
$$P = 37.8 \text{ m}$$



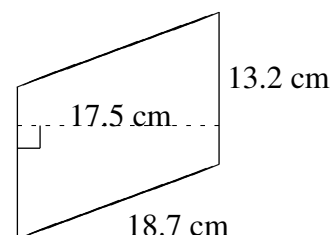
$$A = 79.04 \text{ cm}^2$$
$$P = 36.0 \text{ cm}$$



$$A = 77.76 \text{ m}^2$$
$$P = 35.6 \text{ m}$$



$$A = 80.34 \text{ m}^2$$
$$P = 39.8 \text{ m}$$



$$A = 231.00 \text{ cm}^2$$
$$P = 63.8 \text{ cm}$$