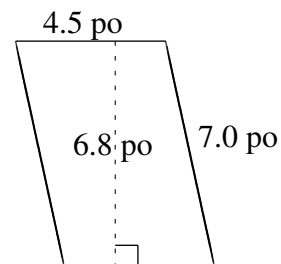
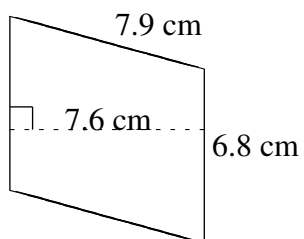
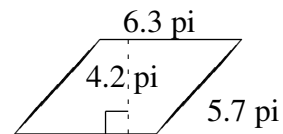
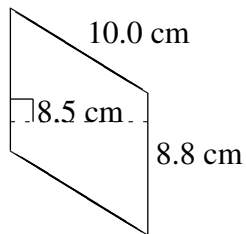
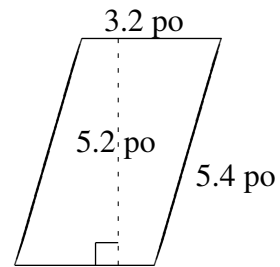
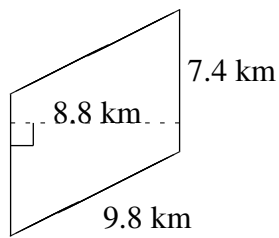


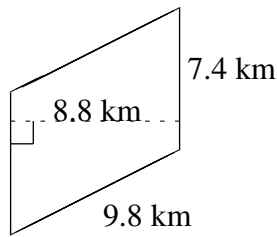
# Aire et Périmètre de Parallélogrammes (I)

Trouvez l'aire et le périmètre de chaque parallélogramme.

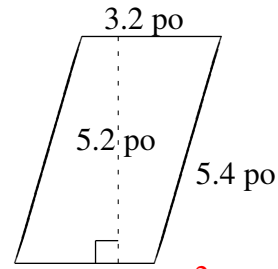


# Aire et Périmètre de Parallélogrammes (I) Solutions

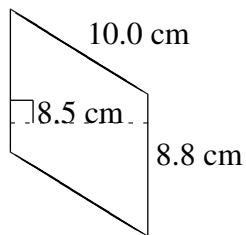
Trouvez l'aire et le périmètre de chaque parallélogramme.



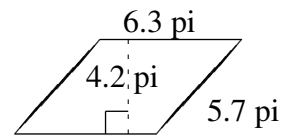
$$A = 65.12 \text{ km}^2$$
$$P = 34.4 \text{ km}$$



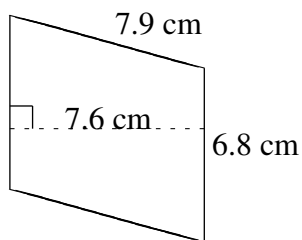
$$A = 16.64 \text{ po}^2$$
$$P = 17.2 \text{ po}$$



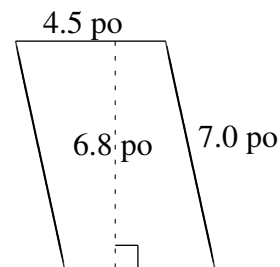
$$A = 74.80 \text{ cm}^2$$
$$P = 37.6 \text{ cm}$$



$$A = 26.46 \text{ pi}^2$$
$$P = 24.0 \text{ pi}$$



$$A = 51.68 \text{ cm}^2$$
$$P = 29.4 \text{ cm}$$



$$A = 30.60 \text{ po}^2$$
$$P = 23.0 \text{ po}$$