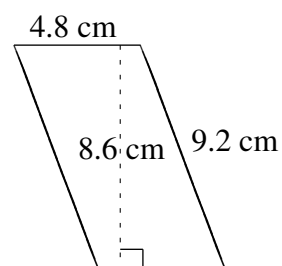
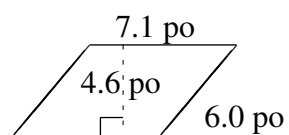
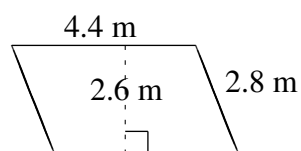
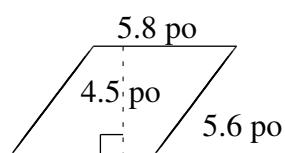
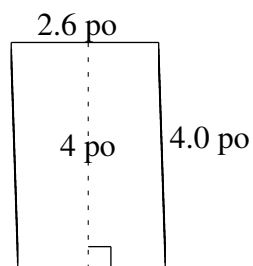
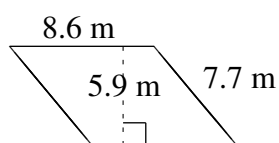


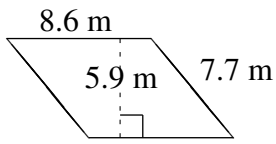
Aire et Périmètre de Parallélogrammes (F)

Trouvez l'aire et le périmètre de chaque parallélogramme.

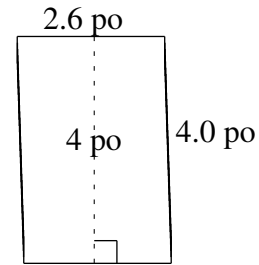


Aire et Périmètre de Parallélogrammes (F) Solutions

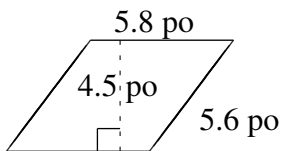
Trouvez l'aire et le périmètre de chaque parallélogramme.



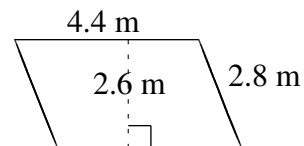
$$A = 50.74 \text{ m}^2$$
$$P = 32.6 \text{ m}$$



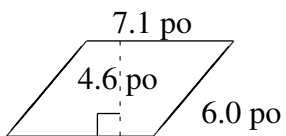
$$A = 10.4 \text{ po}^2$$
$$P = 13.2 \text{ po}$$



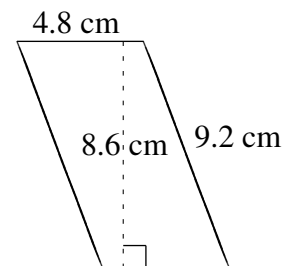
$$A = 26.10 \text{ po}^2$$
$$P = 22.8 \text{ po}$$



$$A = 11.44 \text{ m}^2$$
$$P = 14.4 \text{ m}$$



$$A = 32.66 \text{ po}^2$$
$$P = 26.2 \text{ po}$$



$$A = 41.28 \text{ cm}^2$$
$$P = 28.0 \text{ cm}$$