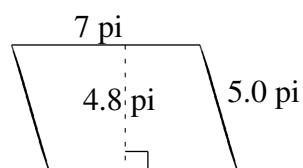
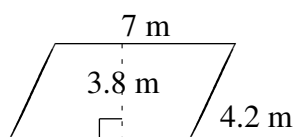
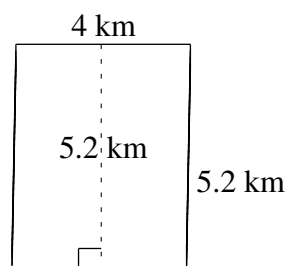
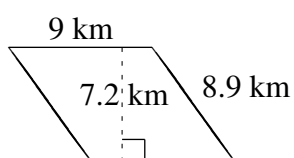
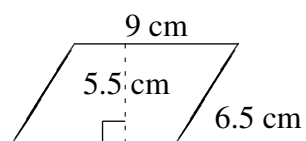
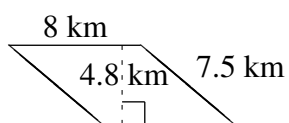


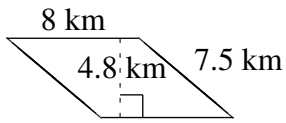
## Aire et Périmètre de Parallélogrammes (D)

Trouvez l'aire et le périmètre de chaque parallélogramme.

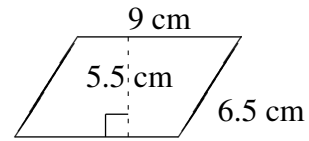


# Aire et Périmètre de Parallélogrammes (D) Solutions

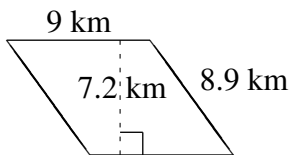
Trouvez l'aire et le périmètre de chaque parallélogramme.



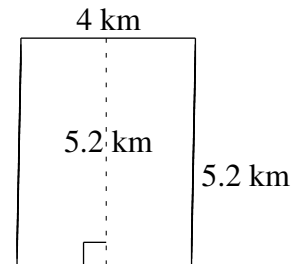
$$A = 38.4 \text{ km}^2$$
$$P = 31.0 \text{ km}$$



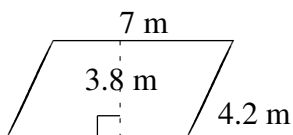
$$A = 49.5 \text{ cm}^2$$
$$P = 31.0 \text{ cm}$$



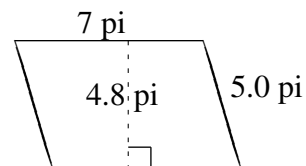
$$A = 64.8 \text{ km}^2$$
$$P = 35.8 \text{ km}$$



$$A = 20.8 \text{ km}^2$$
$$P = 18.4 \text{ km}$$



$$A = 26.6 \text{ m}^2$$
$$P = 22.4 \text{ m}$$



$$A = 33.6 \text{ pi}^2$$
$$P = 24.0 \text{ pi}$$