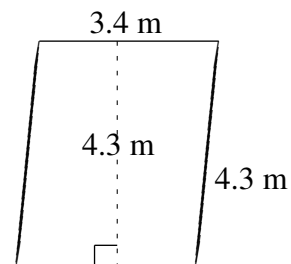
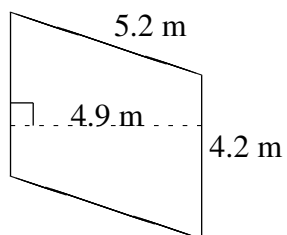
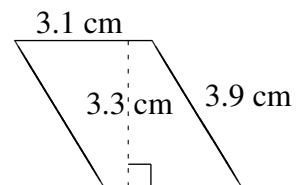
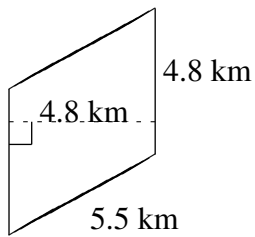
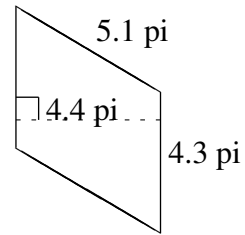
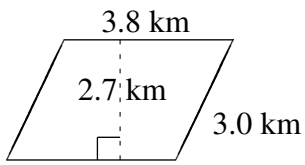


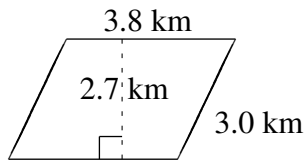
Aire et Périmètre de Parallélogrammes (J)

Trouvez l'aire et le périmètre de chaque parallélogramme.

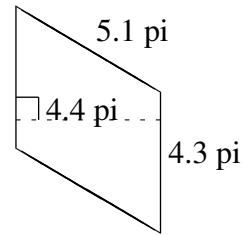


Aire et Périmètre de Parallélogrammes (J) Solutions

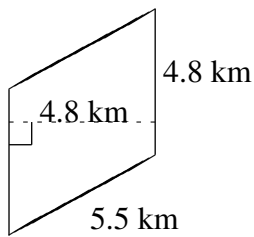
Trouvez l'aire et le périmètre de chaque parallélogramme.



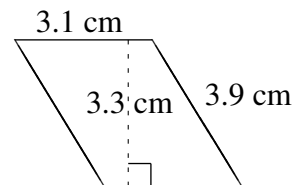
$$A = 10.26 \text{ km}^2$$
$$P = 13.6 \text{ km}$$



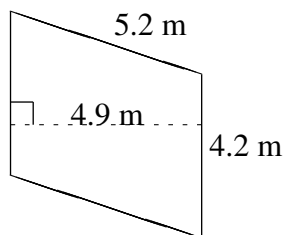
$$A = 18.92 \text{ pi}^2$$
$$P = 18.8 \text{ pi}$$



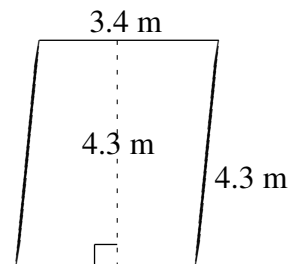
$$A = 23.04 \text{ km}^2$$
$$P = 20.6 \text{ km}$$



$$A = 10.23 \text{ cm}^2$$
$$P = 14.0 \text{ cm}$$



$$A = 20.58 \text{ m}^2$$
$$P = 18.8 \text{ m}$$



$$A = 14.62 \text{ m}^2$$
$$P = 15.4 \text{ m}$$