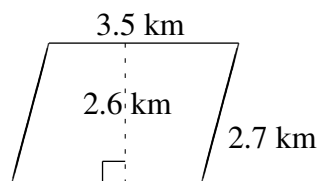
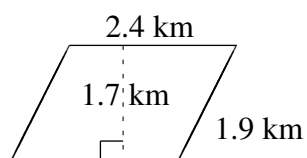
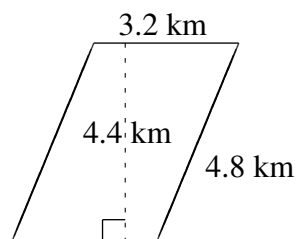
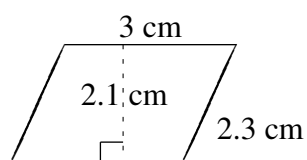
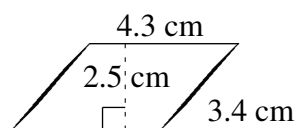
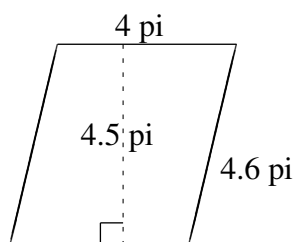


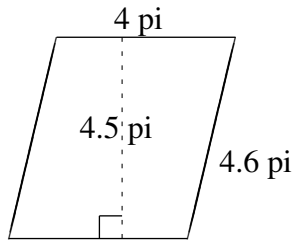
Aire et Périmètre de Parallélogrammes (H)

Trouvez l'aire et le périmètre de chaque parallélogramme.

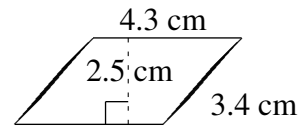


Aire et Périmètre de Parallélogrammes (H) Solutions

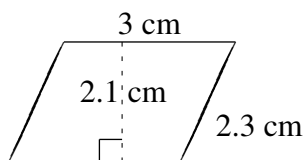
Trouvez l'aire et le périmètre de chaque parallélogramme.



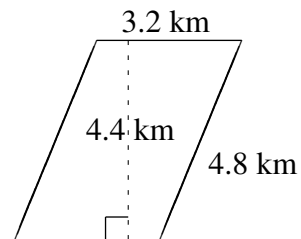
$$A = 18.0\pi^2$$
$$P = 17.2\pi$$



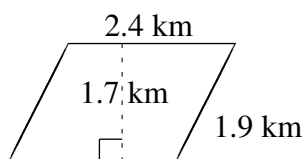
$$A = 10.75\text{ cm}^2$$
$$P = 15.4\text{ cm}$$



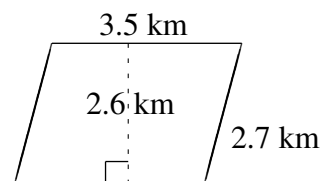
$$A = 6.3\text{ cm}^2$$
$$P = 10.6\text{ cm}$$



$$A = 14.08\text{ km}^2$$
$$P = 16.0\text{ km}$$



$$A = 4.08\text{ km}^2$$
$$P = 8.6\text{ km}$$



$$A = 9.10\text{ km}^2$$
$$P = 12.4\text{ km}$$