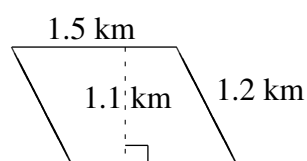
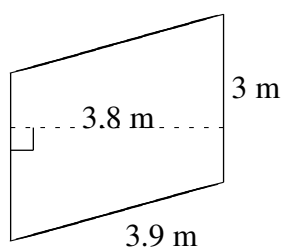
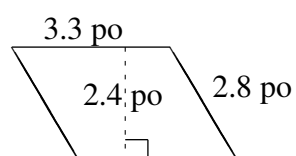
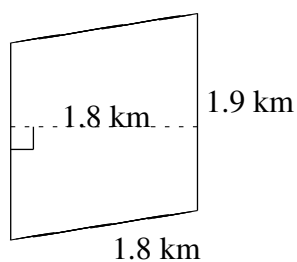
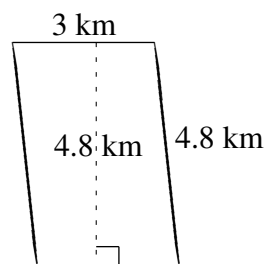
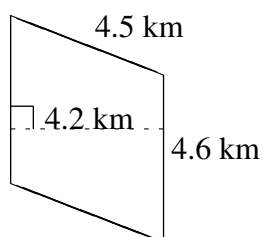


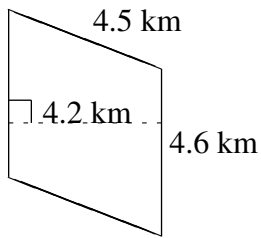
## Aire et Périmètre de Parallélogrammes (D)

Trouvez l'aire et le périmètre de chaque parallélogramme.

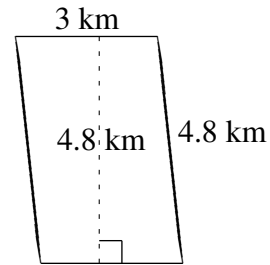


# Aire et Périmètre de Parallélogrammes (D) Solutions

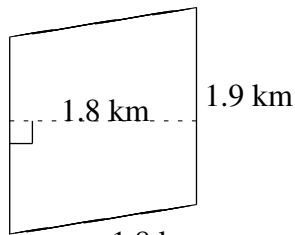
Trouvez l'aire et le périmètre de chaque parallélogramme.



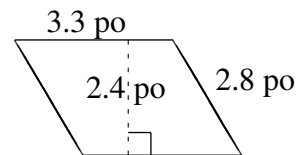
$$A = 19.32 \text{ km}^2$$
$$P = 18.2 \text{ km}$$



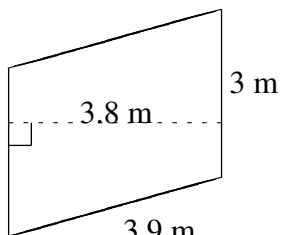
$$A = 14.4 \text{ km}^2$$
$$P = 15.6 \text{ km}$$



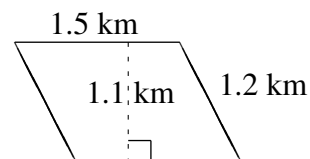
$$A = 3.42 \text{ km}^2$$
$$P = 7.4 \text{ km}$$



$$A = 7.92 \text{ po}^2$$
$$P = 12.2 \text{ po}$$



$$A = 11.4 \text{ m}^2$$
$$P = 13.8 \text{ m}$$



$$A = 1.65 \text{ km}^2$$
$$P = 5.4 \text{ km}$$