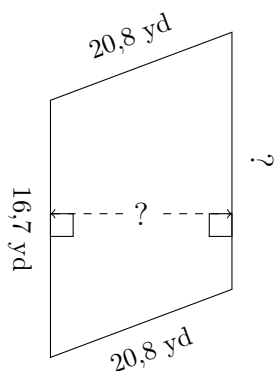


Mesures de Trapèze (B)

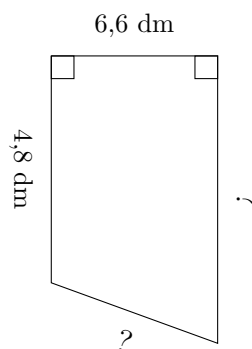
Calculez les mesures manquantes pour chaque trapèze.

1.



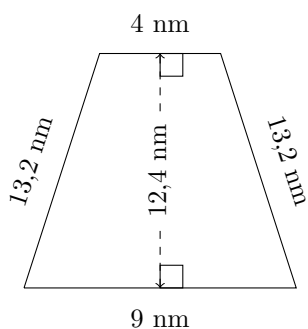
$P = 78,5 \text{ yd}$
 $A = 354,24 \text{ yd}^2$

2.



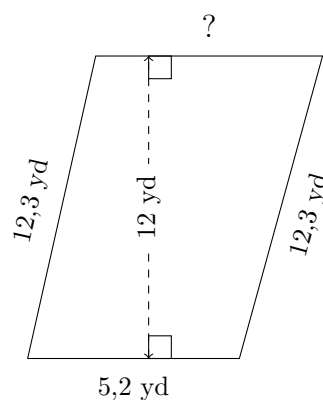
$P = 26,3 \text{ dm}$
 $A = 42,24 \text{ dm}^2$

3.



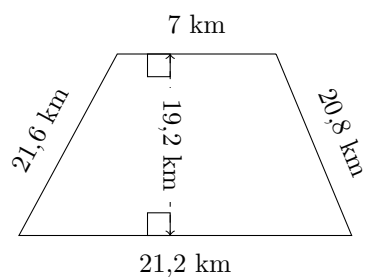
$P = ?$
 $A = ?$

4.



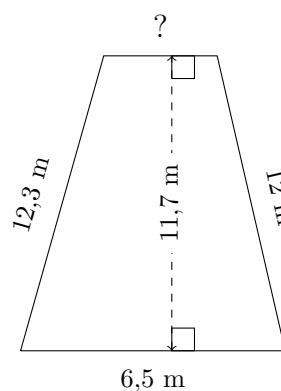
$P = 34,2 \text{ yd}$
 $A = ?$

5.



$P = ?$
 $A = ?$

6.

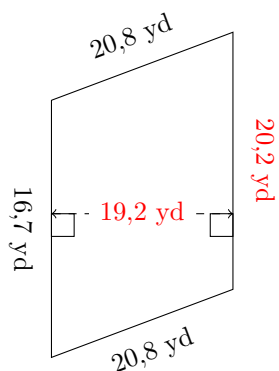


$P = ?$
 $A = 57,33 \text{ m}^2$

Mesures de Trapèze (B) Réponses

Calculez les mesures manquantes pour chaque trapèze.

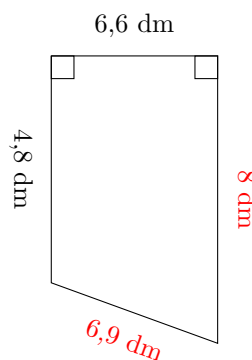
1.



$$P = 78,5 \text{ yd}$$

$$A = 354,24 \text{ yd}^2$$

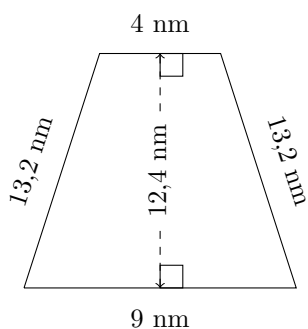
2.



$$P = 26,3 \text{ dm}$$

$$A = 42,24 \text{ dm}^2$$

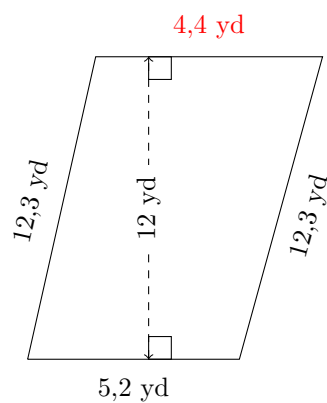
3.



$$P = 39,4 \text{ nm}$$

$$A = 80,6 \text{ nm}^2$$

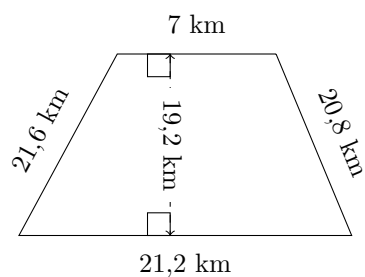
4.



$$P = 34,2 \text{ yd}$$

$$A = 57,6 \text{ yd}^2$$

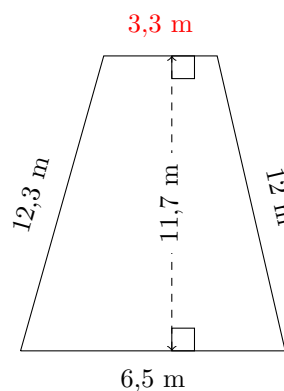
5.



$$P = 70,6 \text{ km}$$

$$A = 270,72 \text{ km}^2$$

6.



$$P = 34,1 \text{ m}$$

$$A = 57,33 \text{ m}^2$$