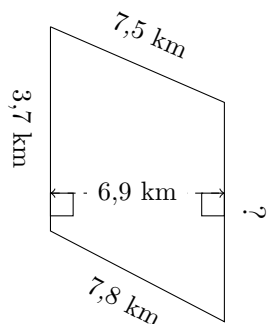


Mesures de Trapèze (H)

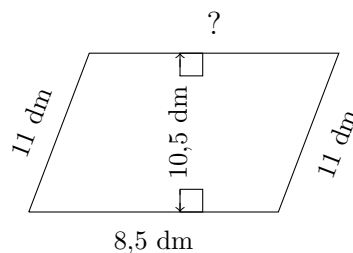
Calculez les mesures manquantes pour chaque trapèze.

1.



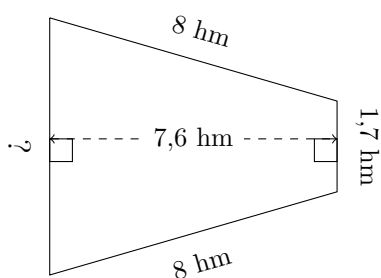
$P = ?$
 $A = 31,05 \text{ km}^2$

2.



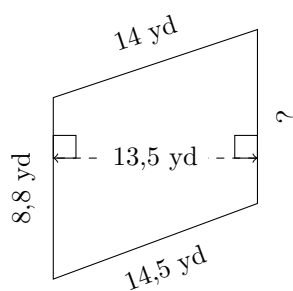
$P = ?$
 $A = 87,15 \text{ dm}^2$

3.



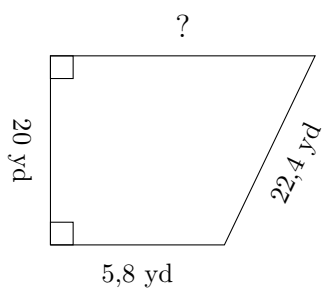
$P = ?$
 $A = 26,22 \text{ hm}^2$

4.



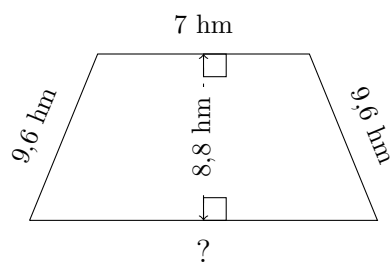
$P = ?$
 $A = 120,825 \text{ yd}^2$

5.



$P = ?$
 $A = 219 \text{ yd}^2$

6.

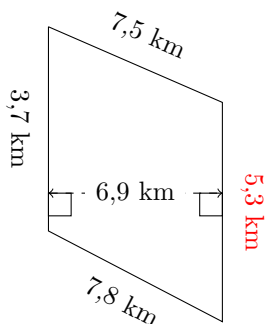


$P = ?$
 $A = 81,4 \text{ hm}^2$

Mesures de Trapèze (H) Réponses

Calculez les mesures manquantes pour chaque trapèze.

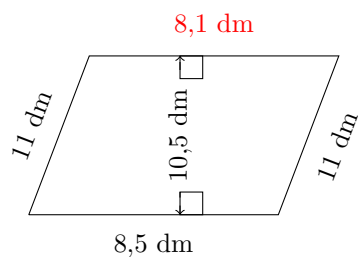
1.



$$P = 24,3 \text{ km}$$

$$A = 31,05 \text{ km}^2$$

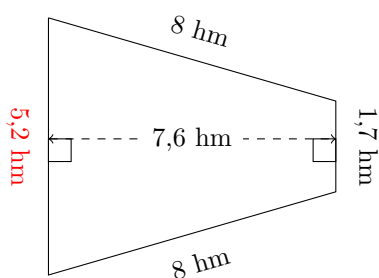
2.



$$P = 38,6 \text{ dm}$$

$$A = 87,15 \text{ dm}^2$$

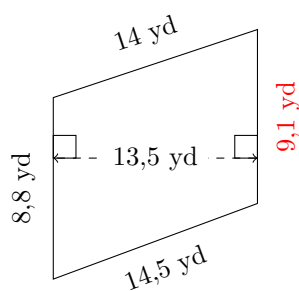
3.



$$P = 22,9 \text{ hm}$$

$$A = 26,22 \text{ hm}^2$$

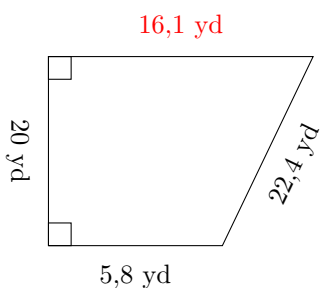
4.



$$P = 46,4 \text{ yd}$$

$$A = 120,825 \text{ yd}^2$$

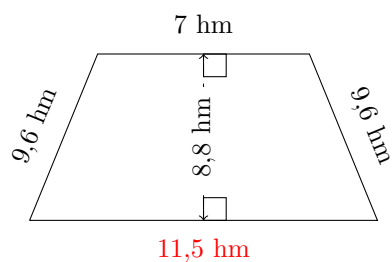
5.



$$P = 64,3 \text{ yd}$$

$$A = 219 \text{ yd}^2$$

6.



$$P = 37,7 \text{ hm}$$

$$A = 81,4 \text{ hm}^2$$