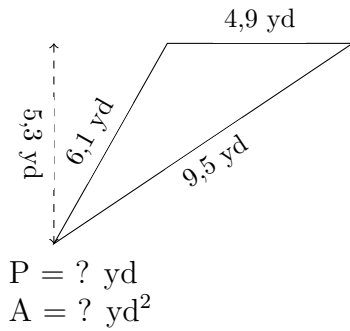


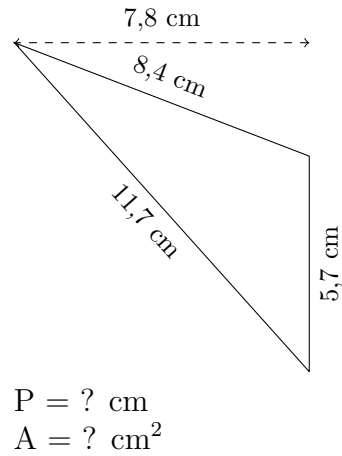
Perimètre et Aire d'un Triangle (G)

Calculez le périmètre et l'aire de chaque triangle.

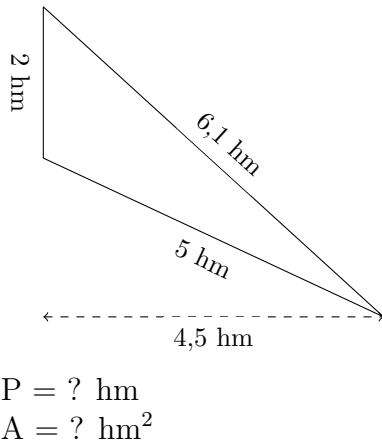
1.



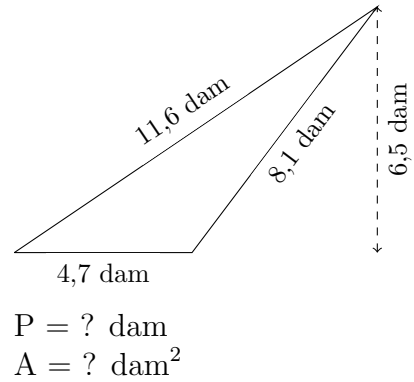
2.



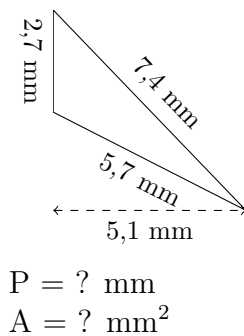
3.



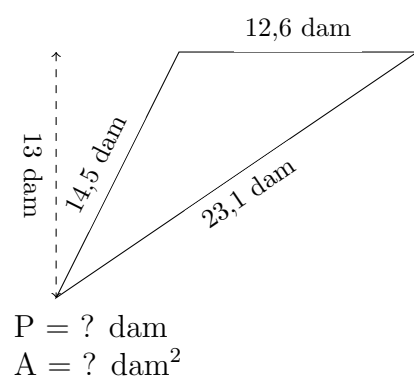
4.



5.



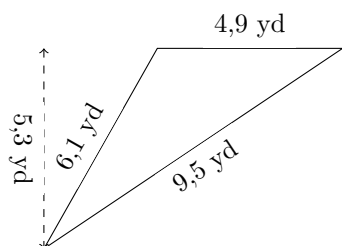
6.



Perimètre et Aire d'un Triangle (G) Réponses

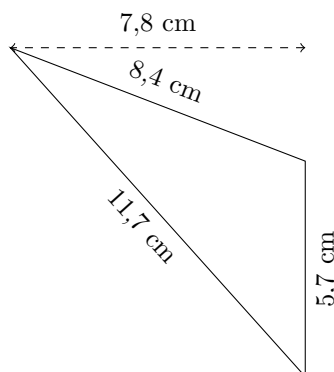
Calculez le périmètre et l'aire de chaque triangle.

1.



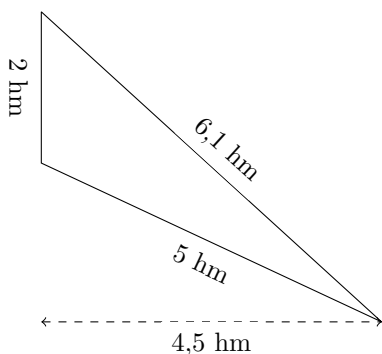
$P = 20,5 \text{ yd}$
 $A = 12,985 \text{ yd}^2$

2.



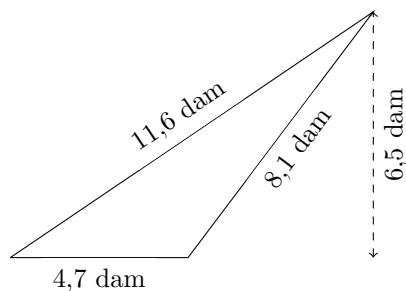
$P = 25,8 \text{ cm}$
 $A = 22,23 \text{ cm}^2$

3.



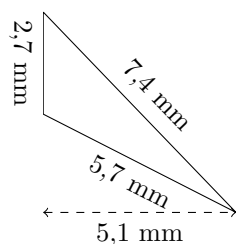
$P = 13,1 \text{ hm}$
 $A = 4,5 \text{ hm}^2$

4.



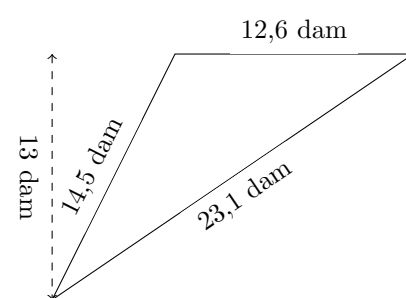
$P = 24,4 \text{ dam}$
 $A = 15,275 \text{ dam}^2$

5.



$P = 15,8 \text{ mm}$
 $A = 6,885 \text{ mm}^2$

6.



$P = 50,2 \text{ dam}$
 $A = 81,9 \text{ dam}^2$