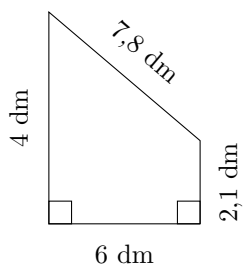


Aire et Périmètre des Trapèzes (J)

Calculez le périmètre et l'aire de chaque trapèze.

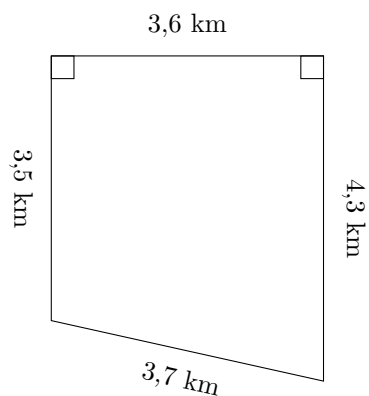
1.



$$P = ?$$

$$A = ?$$

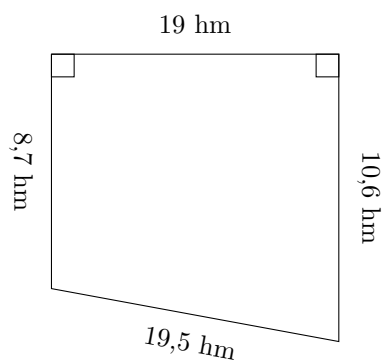
2.



$$P = ?$$

$$A = ?$$

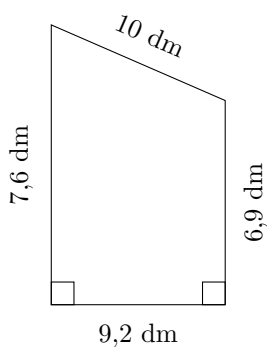
3.



$$P = ?$$

$$A = ?$$

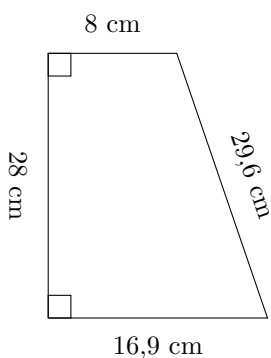
4.



$$P = ?$$

$$A = ?$$

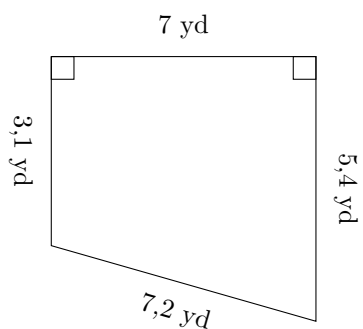
5.



$$P = ?$$

$$A = ?$$

6.



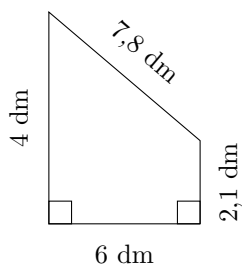
$$P = ?$$

$$A = ?$$

Aire et Périmètre des Trapèzes (J) Réponses

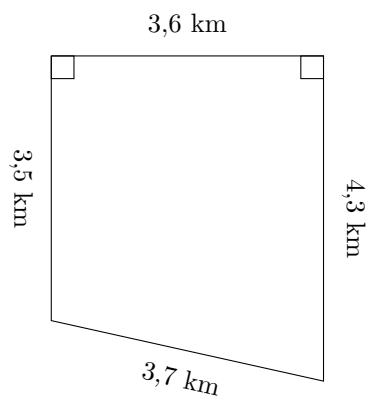
Calculez le périmètre et l'aire de chaque trapèze.

1.



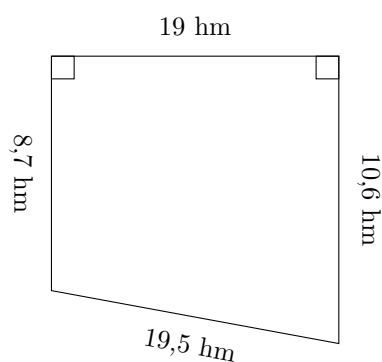
$$P = 19,9 \text{ dm}$$
$$A = 18,3 \text{ dm}^2$$

2.



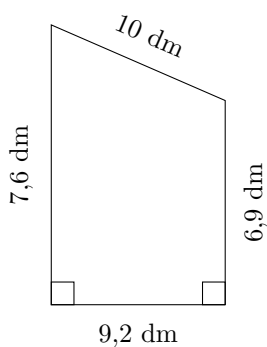
$$P = 15,1 \text{ km}$$
$$A = 14,04 \text{ km}^2$$

3.



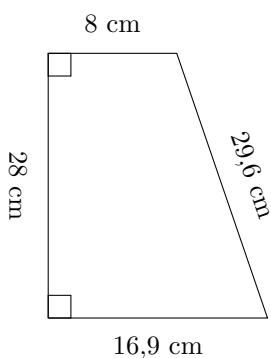
$$P = 57,8 \text{ hm}$$
$$A = 183,35 \text{ hm}^2$$

4.



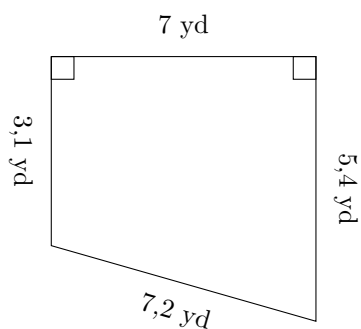
$$P = 33,7 \text{ dm}$$
$$A = 66,7 \text{ dm}^2$$

5.



$$P = 82,5 \text{ cm}$$
$$A = 348,6 \text{ cm}^2$$

6.



$$P = 22,7 \text{ yd}$$
$$A = 29,75 \text{ yd}^2$$