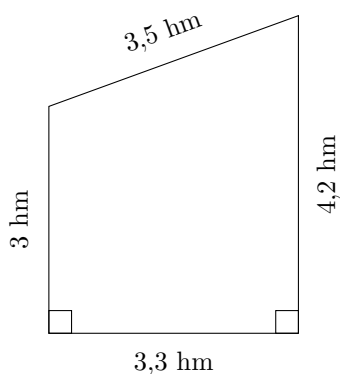


Aire et Périmètre des Trapèzes (F)

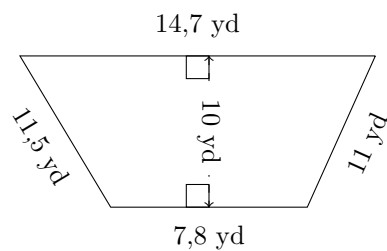
Calculez le périmètre et l'aire de chaque trapèze.

1.



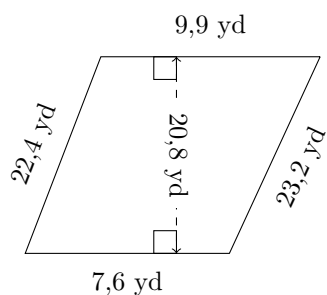
P = ?
A = ?

2.



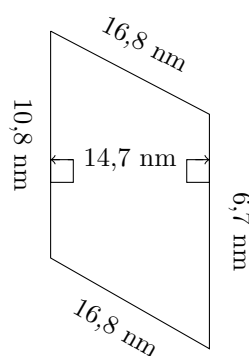
P = ?
A = ?

3.



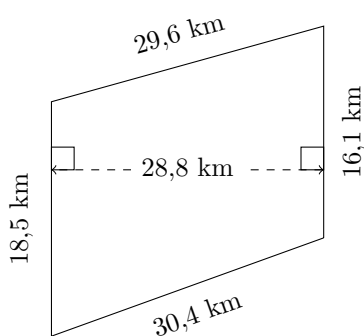
P = ?
A = ?

4.



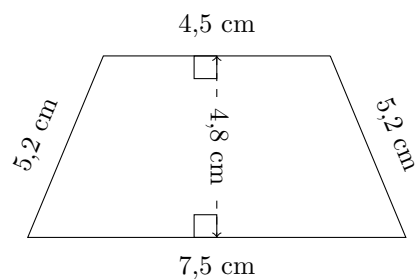
P = ?
A = ?

5.



P = ?
A = ?

6.

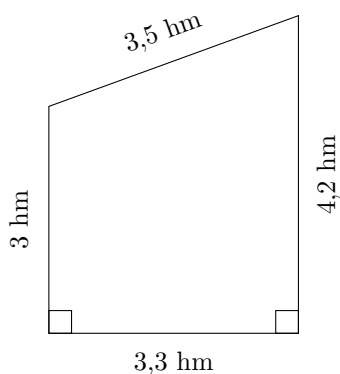


P = ?
A = ?

Aire et Périmètre des Trapèzes (F) Réponses

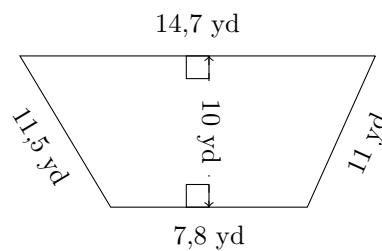
Calculez le périmètre et l'aire de chaque trapèze.

1.



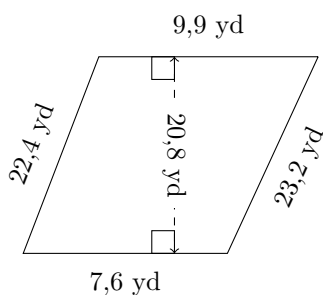
$P = 14 \text{ hm}$
 $A = 11,88 \text{ hm}^2$

2.



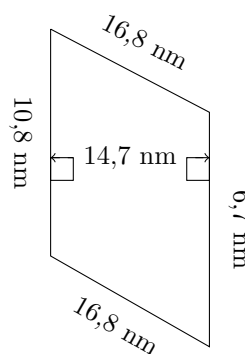
$P = 45 \text{ yd}$
 $A = 112,5 \text{ yd}^2$

3.



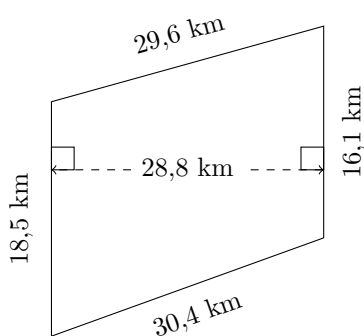
$P = 63,1 \text{ yd}$
 $A = 182 \text{ yd}^2$

4.



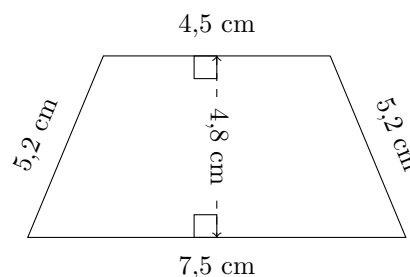
$P = 51,1 \text{ nm}$
 $A = 128,625 \text{ nm}^2$

5.



$P = 94,6 \text{ km}$
 $A = 498,24 \text{ km}^2$

6.



$P = 22,4 \text{ cm}$
 $A = 28,8 \text{ cm}^2$