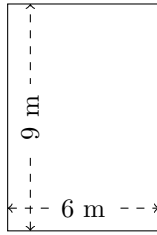


# Perimètre et Aire des Rectangles (J)

Calculez le périmètre et l'aire de chaque rectangle.

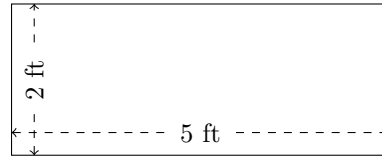
1.



$$P = ?$$

$$A = ?$$

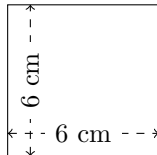
2.



$$P = ?$$

$$A = ?$$

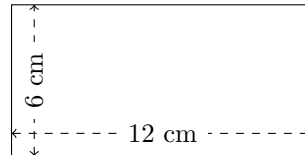
3.



$$P = ?$$

$$A = ?$$

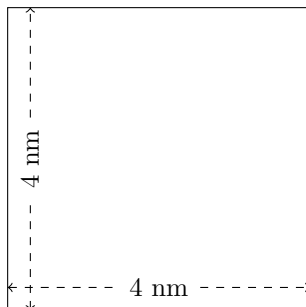
4.



$$P = ?$$

$$A = ?$$

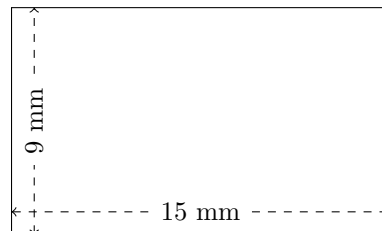
5.



$$P = ?$$

$$A = ?$$

6.



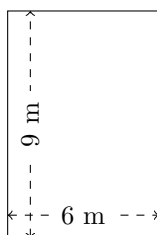
$$P = ?$$

$$A = ?$$

# Perimètre et Aire des Rectangles (J) Réponses

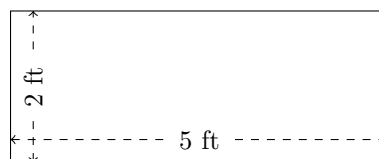
Calculez le périmètre et l'aire de chaque rectangle.

1.



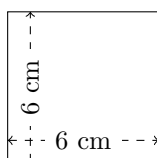
$$P = 30 \text{ m}$$
$$A = 54 \text{ m}^2$$

2.



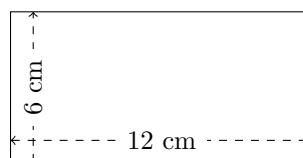
$$P = 14 \text{ ft}$$
$$A = 10 \text{ ft}^2$$

3.



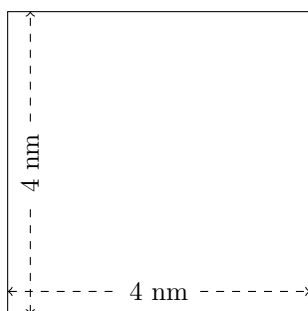
$$P = 24 \text{ cm}$$
$$A = 36 \text{ cm}^2$$

4.



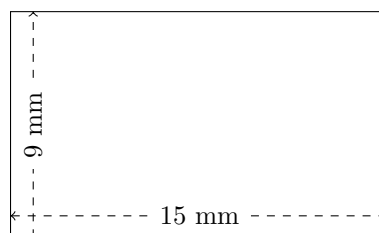
$$P = 36 \text{ cm}$$
$$A = 72 \text{ cm}^2$$

5.



$$P = 16 \text{ mm}$$
$$A = 16 \text{ mm}^2$$

6.



$$P = 48 \text{ mm}$$
$$A = 135 \text{ mm}^2$$