


# Perimètre et Aire des Rectangles (E)

Calculez le périmètre et l'aire de chaque rectangle.


1.



$$P = ?$$

$$A = ?$$

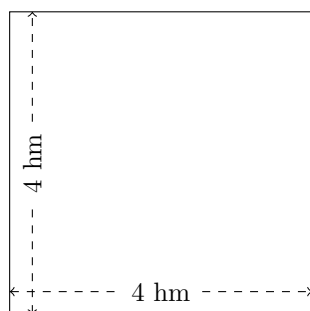
2.



$$P = ?$$

$$A = ?$$

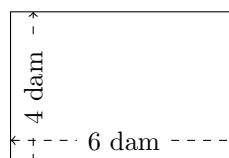
3.



$$P = ?$$

$$A = ?$$

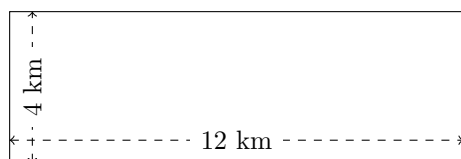
4.



$$P = ?$$

$$A = ?$$

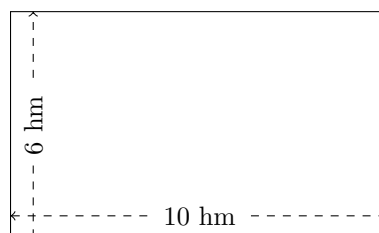
5.



$$P = ?$$

$$A = ?$$

6.



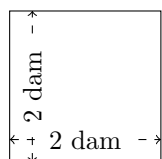
$$P = ?$$

$$A = ?$$

# Perimètre et Aire des Rectangles (E) Réponses


Calculez le périmètre et l'aire de chaque rectangle.

1.



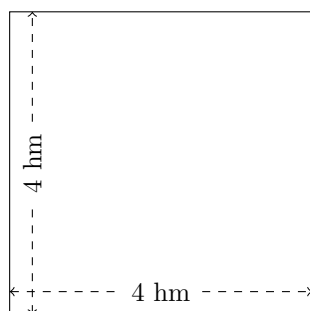
$$P = 8 \text{ dam}$$
$$A = 4 \text{ dam}^2$$

2.



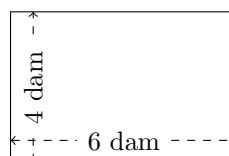
$$P = 28 \text{ cm}$$
$$A = 40 \text{ cm}^2$$

3.



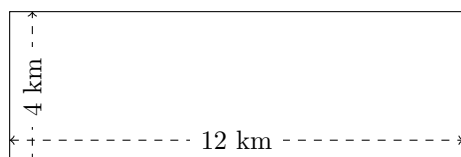
$$P = 16 \text{ hm}$$
$$A = 16 \text{ hm}^2$$

4.



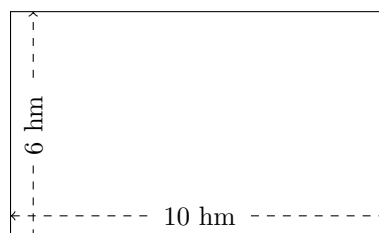
$$P = 20 \text{ dam}$$
$$A = 24 \text{ dam}^2$$

5.



$$P = 32 \text{ km}$$
$$A = 48 \text{ km}^2$$

6.



$$P = 32 \text{ hm}$$
$$A = 60 \text{ hm}^2$$