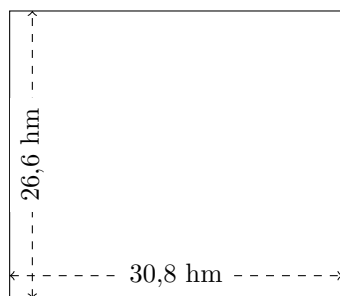


Perimètre et Aire des Rectangles (F)

Calculez le périmètre et l'aire de chaque rectangle.

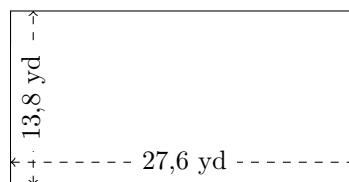
1.



$$P = ?$$

$$A = ?$$

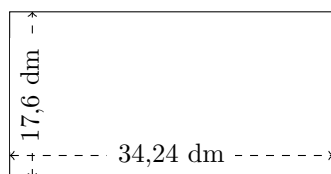
2.



$$P = ?$$

$$A = ?$$

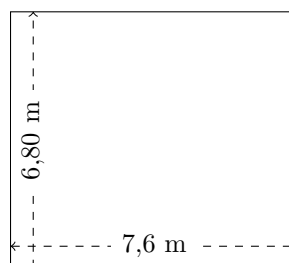
3.



$$P = ?$$

$$A = ?$$

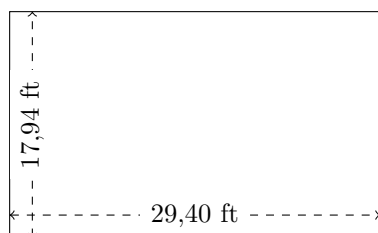
4.



$$P = ?$$

$$A = ?$$

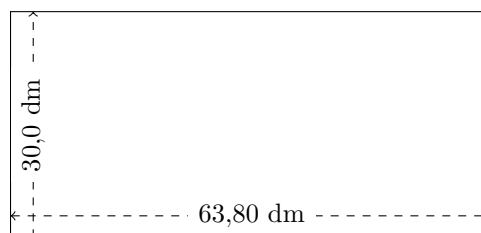
5.



$$P = ?$$

$$A = ?$$

6.



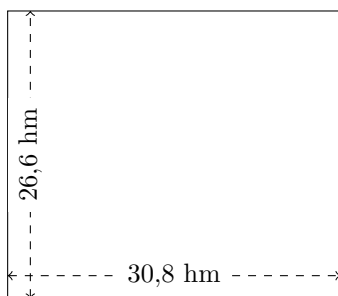
$$P = ?$$

$$A = ?$$

Perimètre et Aire des Rectangles (F) Réponses

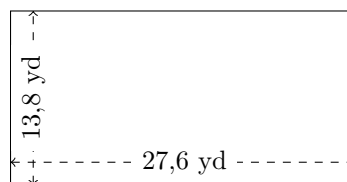
Calculez le périmètre et l'aire de chaque rectangle.

1.




$$P = 114,8 \text{ hm}$$
$$A = 819,28 \text{ hm}^2$$

2.



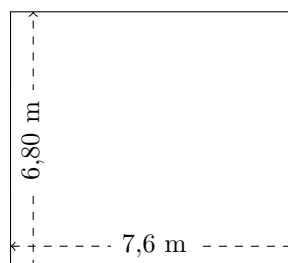
$$P = 82,8 \text{ yd}$$
$$A = 380,88 \text{ yd}^2$$

3.



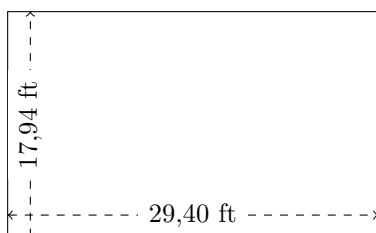
$$P = 103,68 \text{ dm}$$
$$A = 602,624 \text{ dm}^2$$

4.



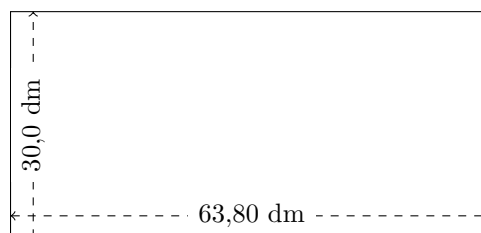
$$P = 28,8 \text{ m}$$
$$A = 51,68 \text{ m}^2$$

5.



$$P = 94,68 \text{ ft}$$
$$A = 527,436 \text{ ft}^2$$

6.



$$P = 187,6 \text{ dm}$$
$$A = 1914 \text{ dm}^2$$