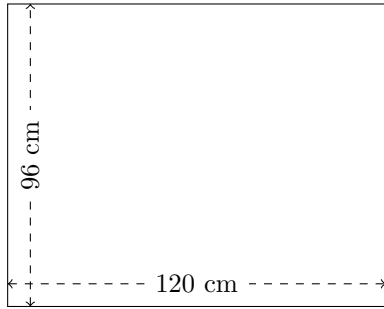


# Perimètre et Aire des Rectangles (J)

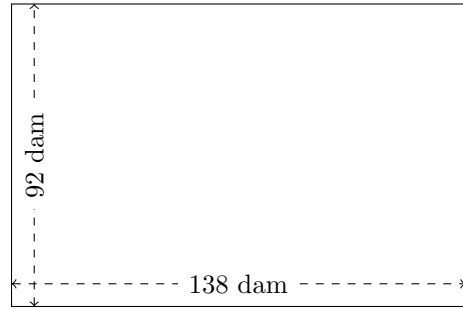
Calculez le périmètre et l'aire de chaque rectangle.

1.




$$P = ?$$
$$A = ?$$

2.



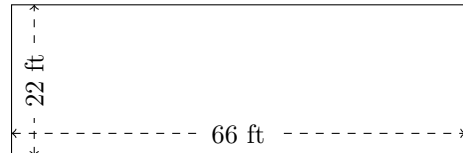
$$P = ?$$
$$A = ?$$

3.



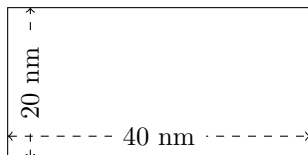
$$P = ?$$
$$A = ?$$

4.



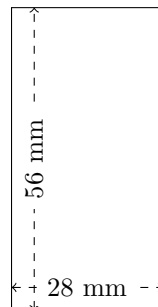
$$P = ?$$
$$A = ?$$

5.



$$P = ?$$
$$A = ?$$

6.

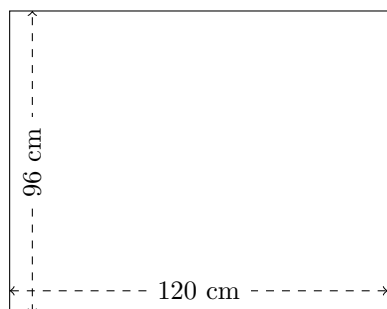


$$P = ?$$
$$A = ?$$

# Perimètre et Aire des Rectangles (J) Réponses

Calculez le périmètre et l'aire de chaque rectangle.

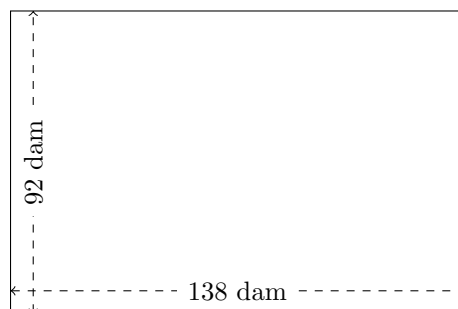
1.



$$P = 432 \text{ cm}$$

$$A = 11.520 \text{ cm}^2$$


2.



$$P = 460 \text{ dam}$$

$$A = 12.696 \text{ dam}^2$$

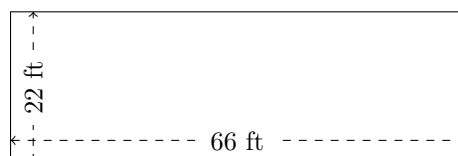
3.



$$P = 266 \text{ km}$$

$$A = 3610 \text{ km}^2$$

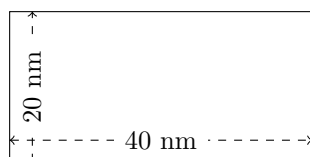
4.



$$P = 176 \text{ ft}$$

$$A = 1452 \text{ ft}^2$$

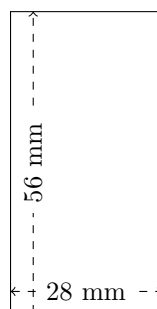
5.



$$P = 120 \text{ mm}$$

$$A = 800 \text{ mm}^2$$

6.



$$P = 168 \text{ mm}$$

$$A = 1568 \text{ mm}^2$$