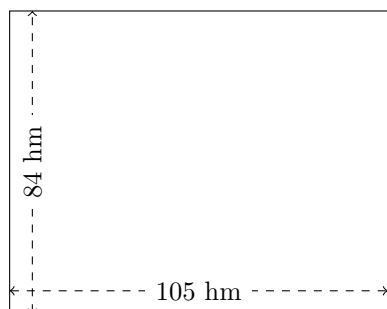


Perimètre et Aire des Rectangles (I)

Calculez le périmètre et l'aire de chaque rectangle.

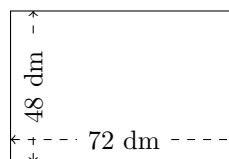
1.



$$P = ?$$

$$A = ?$$

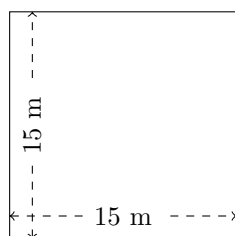
2.



$$P = ?$$

$$A = ?$$

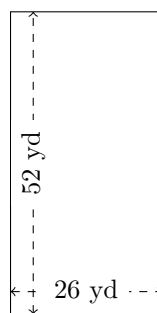
3.



$$P = ?$$

$$A = ?$$

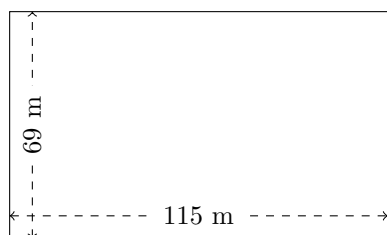
4.



$$P = ?$$

$$A = ?$$

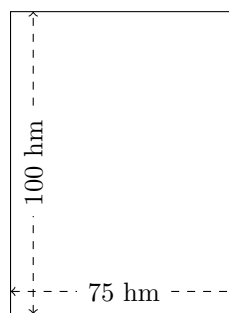
5.



$$P = ?$$

$$A = ?$$

6.



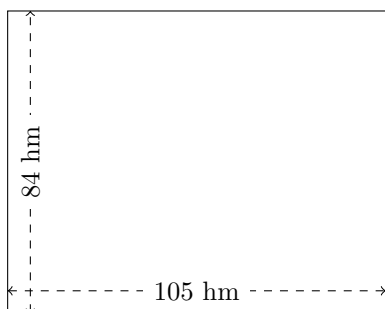
$$P = ?$$

$$A = ?$$

Perimètre et Aire des Rectangles (I) Réponses

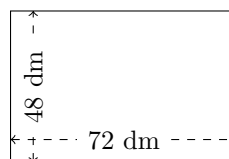
Calculez le périmètre et l'aire de chaque rectangle.

1.



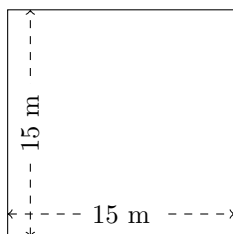
$$P = 378 \text{ hm}$$
$$A = 8820 \text{ hm}^2$$

2.



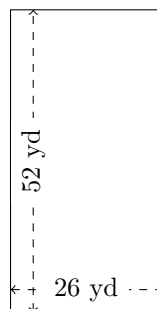
$$P = 240 \text{ dm}$$
$$A = 3456 \text{ dm}^2$$

3.



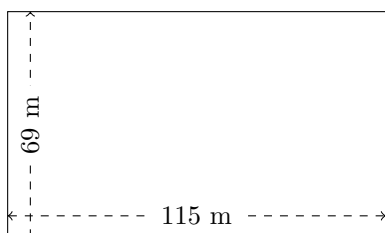
$$P = 60 \text{ m}$$
$$A = 225 \text{ m}^2$$

4.



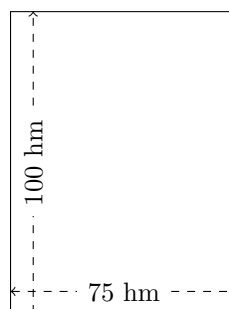
$$P = 156 \text{ yd}$$
$$A = 1352 \text{ yd}^2$$

5.



$$P = 368 \text{ m}$$
$$A = 7935 \text{ m}^2$$

6.



$$P = 350 \text{ hm}$$
$$A = 7500 \text{ hm}^2$$