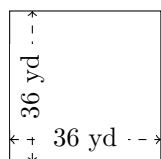


Perimètre et Aire des Rectangles (F)

Calculez le périmètre et l'aire de chaque rectangle.

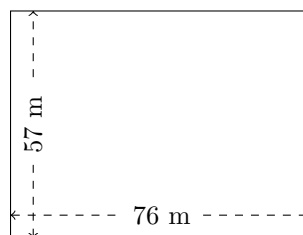
1.



$$P = ?$$

$$A = ?$$

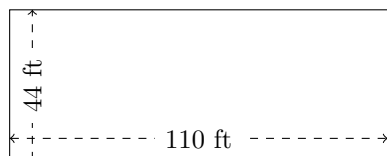
2.



$$P = ?$$

$$A = ?$$

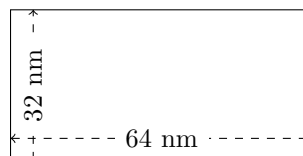
3.



$$P = ?$$

$$A = ?$$

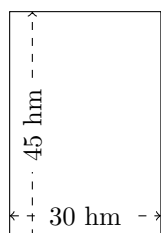
4.



$$P = ?$$

$$A = ?$$

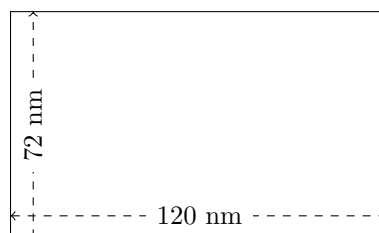
5.



$$P = ?$$

$$A = ?$$

6.



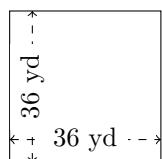
$$P = ?$$

$$A = ?$$

Perimètre et Aire des Rectangles (F) Réponses

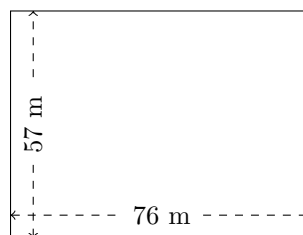
Calculez le périmètre et l'aire de chaque rectangle.

1.



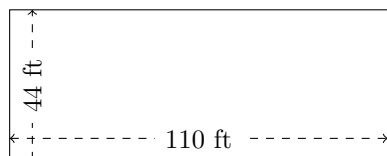
$$P = 144 \text{ yd}$$
$$A = 1296 \text{ yd}^2$$

2.



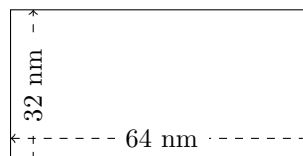
$$P = 266 \text{ m}$$
$$A = 4332 \text{ m}^2$$

3.



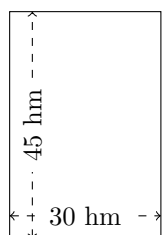
$$P = 308 \text{ ft}$$
$$A = 4840 \text{ ft}^2$$

4.



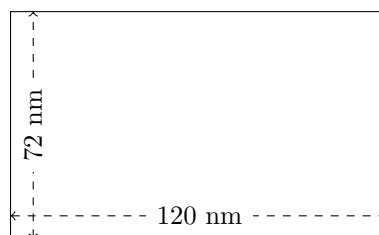
$$P = 192 \text{ nm}$$
$$A = 2048 \text{ nm}^2$$

5.



$$P = 150 \text{ hm}$$
$$A = 1350 \text{ hm}^2$$

6.



$$P = 384 \text{ nm}$$
$$A = 8640 \text{ nm}^2$$