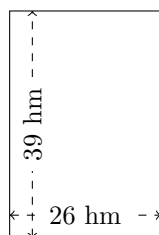


Perimètre et Aire des Rectangles (E)

Calculez le périmètre et l'aire de chaque rectangle.

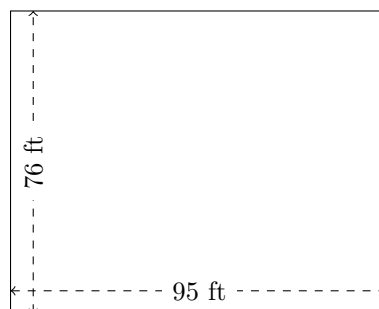
1.



$$P = ?$$

$$A = ?$$

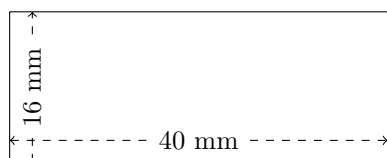
2.



$$P = ?$$

$$A = ?$$

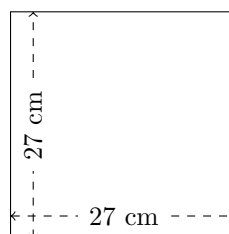
3.



$$P = ?$$

$$A = ?$$

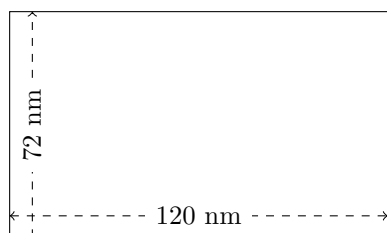
4.



$$P = ?$$

$$A = ?$$

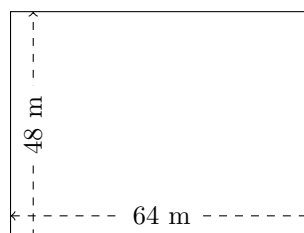
5.



$$P = ?$$

$$A = ?$$

6.



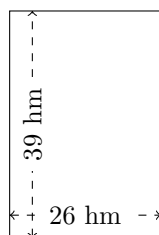
$$P = ?$$

$$A = ?$$

Perimètre et Aire des Rectangles (E) Réponses

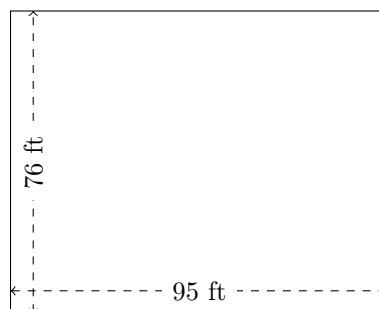
Calculez le périmètre et l'aire de chaque rectangle.

1.



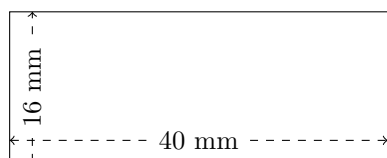
$$P = 130 \text{ hm}$$
$$A = 1014 \text{ hm}^2$$

2.



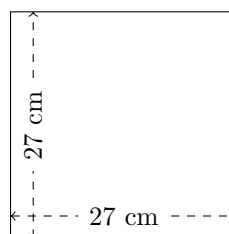
$$P = 342 \text{ ft}$$
$$A = 7220 \text{ ft}^2$$

3.



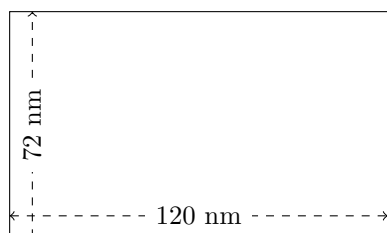
$$P = 112 \text{ mm}$$
$$A = 640 \text{ mm}^2$$

4.



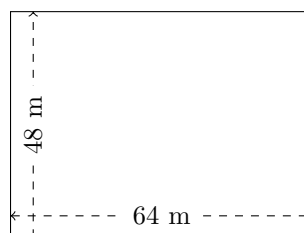
$$P = 108 \text{ cm}$$
$$A = 729 \text{ cm}^2$$

5.



$$P = 384 \text{ nm}$$
$$A = 8640 \text{ nm}^2$$

6.



$$P = 224 \text{ m}$$
$$A = 3072 \text{ m}^2$$