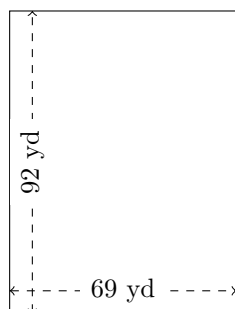


# Perimètre et Aire des Rectangles (D)

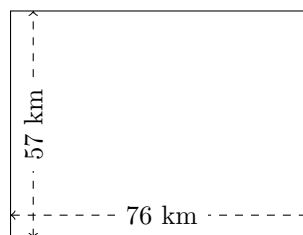
Calculez le périmètre et l'aire de chaque rectangle.

1.



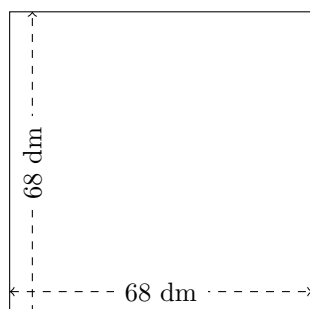
$$P = ?$$
$$A = ?$$

2.



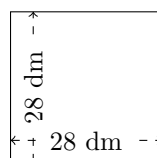
$$P = ?$$
$$A = ?$$

3.



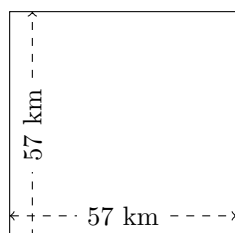
$$P = ?$$
$$A = ?$$

4.



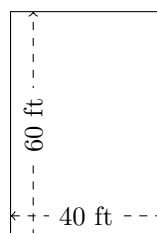
$$P = ?$$
$$A = ?$$

5.



$$P = ?$$
$$A = ?$$

6.

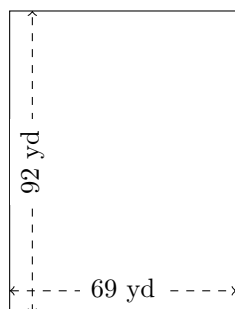


$$P = ?$$
$$A = ?$$

# Perimètre et Aire des Rectangles (D) Réponses

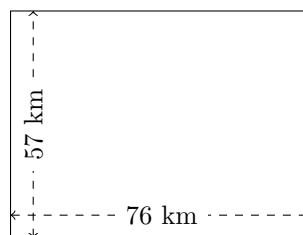
Calculez le périmètre et l'aire de chaque rectangle.

1.



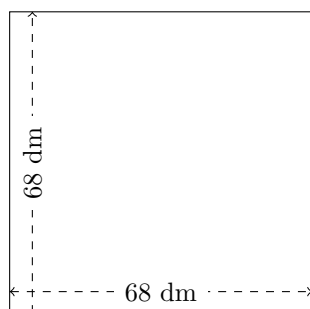
$$P = 322 \text{ yd}$$
$$A = 6348 \text{ yd}^2$$

2.



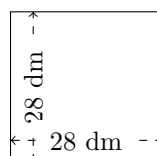
$$P = 266 \text{ km}$$
$$A = 4332 \text{ km}^2$$

3.



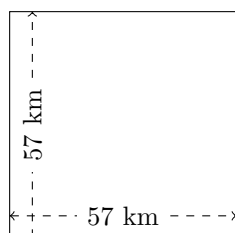
$$P = 272 \text{ dm}$$
$$A = 4624 \text{ dm}^2$$

4.



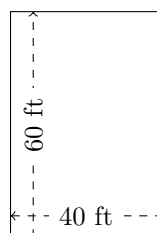
$$P = 112 \text{ dm}$$
$$A = 784 \text{ dm}^2$$

5.



$$P = 228 \text{ km}$$
$$A = 3249 \text{ km}^2$$

6.



$$P = 200 \text{ ft}$$
$$A = 2400 \text{ ft}^2$$