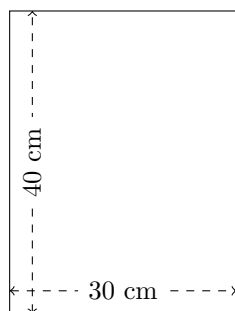


# Perimètre et Aire des Rectangles (C)

Calculez le périmètre et l'aire de chaque rectangle.

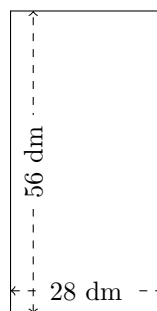
1.



$$P = ?$$

$$A = ?$$

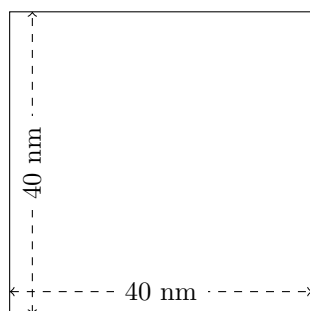
2.



$$P = ?$$

$$A = ?$$

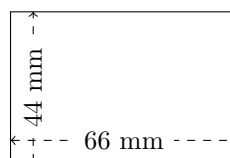
3.



$$P = ?$$

$$A = ?$$

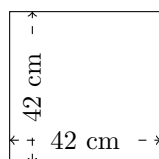
4.



$$P = ?$$

$$A = ?$$

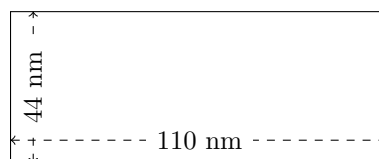
5.



$$P = ?$$

$$A = ?$$

6.



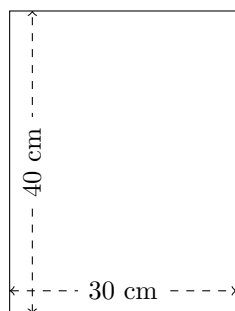
$$P = ?$$

$$A = ?$$

# Perimètre et Aire des Rectangles (C) Réponses

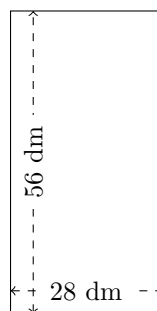
Calculez le périmètre et l'aire de chaque rectangle.

1.



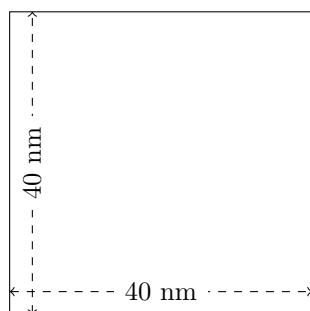
$$P = 140 \text{ cm}$$
$$A = 1200 \text{ cm}^2$$

2.



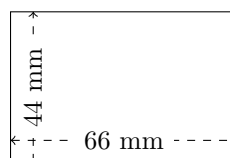
$$P = 168 \text{ dm}$$
$$A = 1568 \text{ dm}^2$$

3.



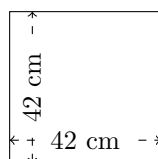
$$P = 160 \text{ mm}$$
$$A = 1600 \text{ mm}^2$$

4.



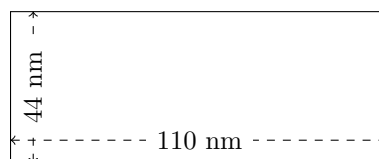
$$P = 220 \text{ mm}$$
$$A = 2904 \text{ mm}^2$$

5.



$$P = 168 \text{ cm}$$
$$A = 1764 \text{ cm}^2$$

6.



$$P = 308 \text{ mm}$$
$$A = 4840 \text{ mm}^2$$