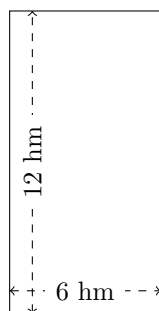


Mesure d'un Rectangle (A)


Calculez les mesures manquantes pour chaque rectangle.

1.



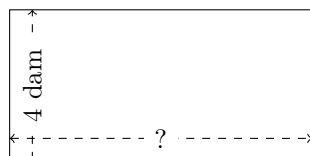
$$P = ?$$
$$A = ?$$

2.



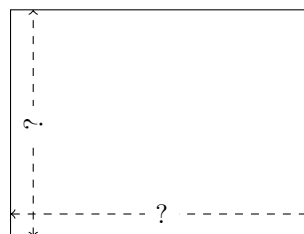
$$P = 32 \text{ yd}$$
$$A = ?$$

3.



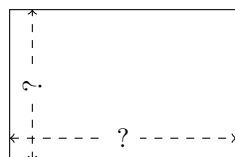
$$P = ?$$
$$A = 32 \text{ dam}^2$$

4.



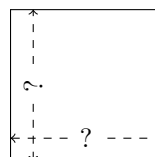
$$P = 28 \text{ cm}$$
$$A = 48 \text{ cm}^2$$

5.



$$P = 30 \text{ cm}$$
$$A = 54 \text{ cm}^2$$

6.

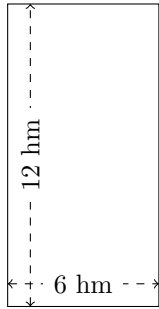


$$P = 8 \text{ ft}$$
$$A = 4 \text{ ft}^2$$

Mesure d'un Rectangle (A) Réponses

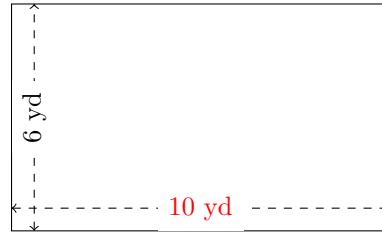
Calculez les mesures manquantes pour chaque rectangle.

1.



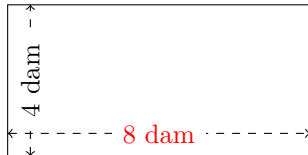
$$P = 36 \text{ hm}$$
$$A = 72 \text{ hm}^2$$

2.



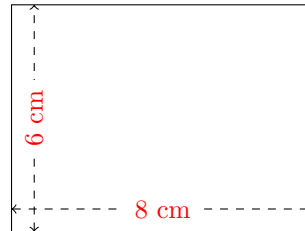
$$P = 32 \text{ yd}$$
$$A = 60 \text{ yd}^2$$

3.



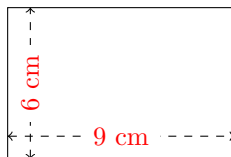
$$P = 24 \text{ dam}$$
$$A = 32 \text{ dam}^2$$

4.



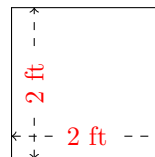
$$P = 28 \text{ cm}$$
$$A = 48 \text{ cm}^2$$

5.



$$P = 30 \text{ cm}$$
$$A = 54 \text{ cm}^2$$

6.

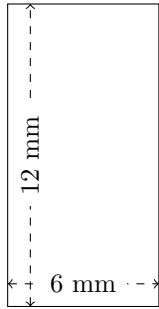


$$P = 8 \text{ ft}$$
$$A = 4 \text{ ft}^2$$

Mesure d'un Rectangle (B)

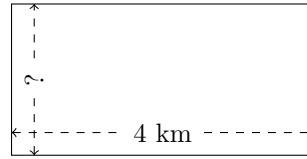
Calculez les mesures manquantes pour chaque rectangle.

1.



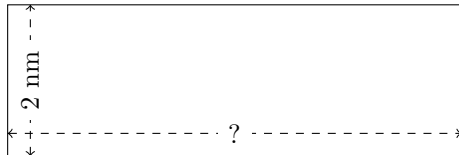
$$P = ?$$
$$A = ?$$

2.



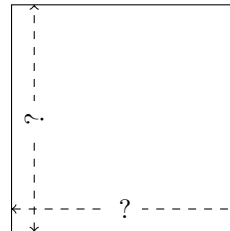
$$P = 12 \text{ km}$$
$$A = ?$$

3.



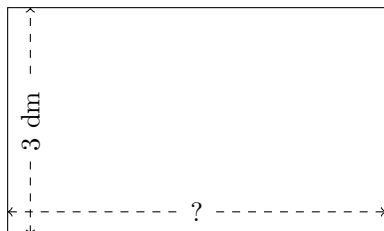
$$P = ?$$
$$A = 12 \text{ nm}^2$$

4.



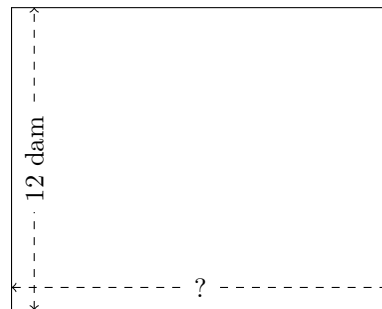
$$P = 36 \text{ hm}$$
$$A = 81 \text{ hm}^2$$

5.



$$P = 16 \text{ dm}$$
$$A = ?$$

6.

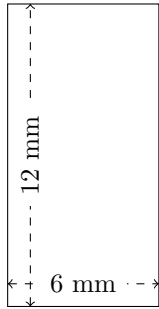


$$P = 54 \text{ dam}$$
$$A = ?$$

Mesure d'un Rectangle (B) Réponses

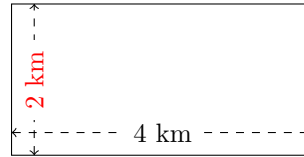
Calculez les mesures manquantes pour chaque rectangle.

1.



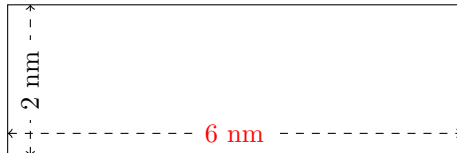
$$P = 36 \text{ mm}$$
$$A = 72 \text{ mm}^2$$

2.



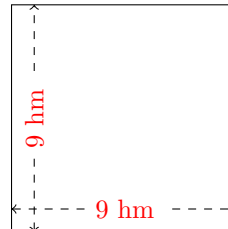
$$P = 12 \text{ km}$$
$$A = 8 \text{ km}^2$$

3.



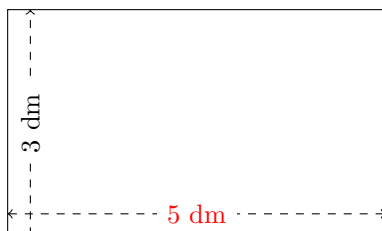
$$P = 16 \text{ mm}$$
$$A = 12 \text{ mm}^2$$

4.



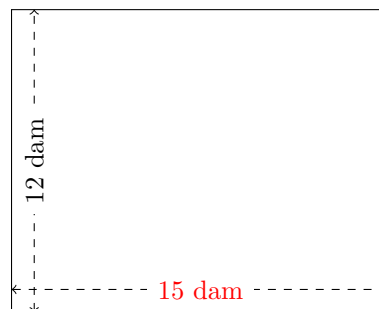
$$P = 36 \text{ hm}$$
$$A = 81 \text{ hm}^2$$

5.



$$P = 16 \text{ dm}$$
$$A = 15 \text{ dm}^2$$

6.

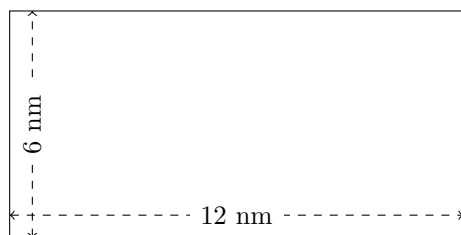


$$P = 54 \text{ dam}$$
$$A = 180 \text{ dam}^2$$

Mesure d'un Rectangle (C)

Calculez les mesures manquantes pour chaque rectangle.

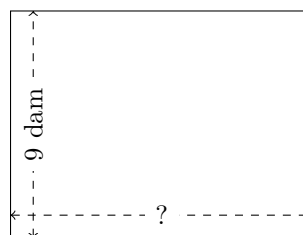
1.



$$P = ?$$

$$A = ?$$

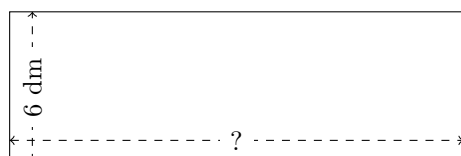
2.



$$P = 42 \text{ dam}$$

$$A = ?$$


3.



$$P = ?$$

$$A = 108 \text{ dm}^2$$

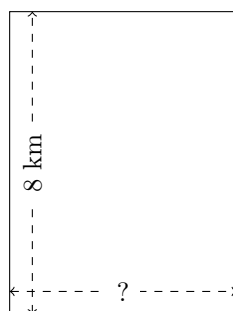
4.



$$P = 60 \text{ cm}$$

$$A = 216 \text{ cm}^2$$

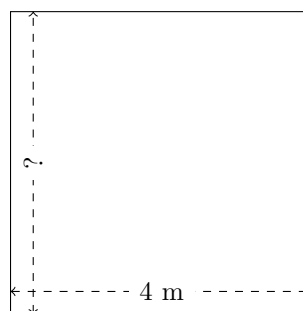
5.



$$P = ?$$

$$A = 48 \text{ km}^2$$

6.



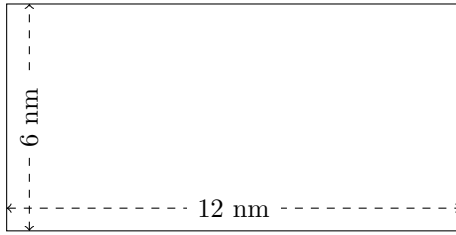
$$P = 16 \text{ m}$$

$$A = ?$$

Mesure d'un Rectangle (C) Réponses

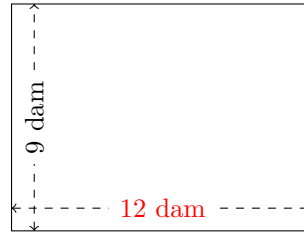
Calculez les mesures manquantes pour chaque rectangle.

1.



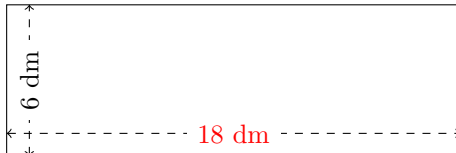
$$P = 36 \text{ nm}$$
$$A = 72 \text{ nm}^2$$

2.



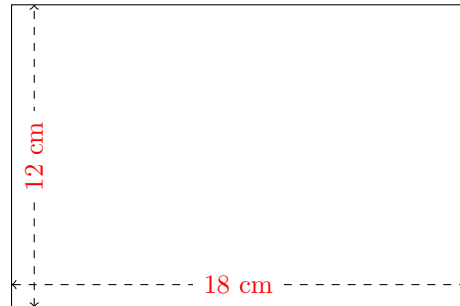
$$P = 42 \text{ dam}$$
$$A = 108 \text{ dam}^2$$

3.



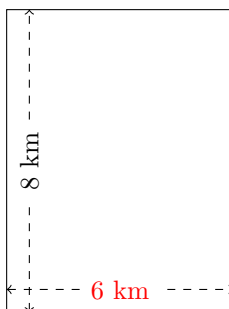
$$P = 48 \text{ dm}$$
$$A = 108 \text{ dm}^2$$

4.



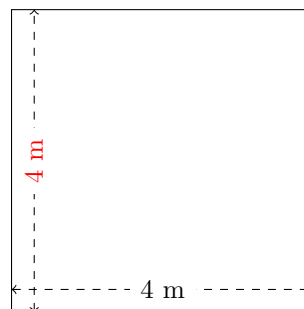
$$P = 60 \text{ cm}$$
$$A = 216 \text{ cm}^2$$

5.



$$P = 28 \text{ km}$$
$$A = 48 \text{ km}^2$$

6.




$$P = 16 \text{ m}$$
$$A = 16 \text{ m}^2$$

Mesure d'un Rectangle (D)

Calculez les mesures manquantes pour chaque rectangle.

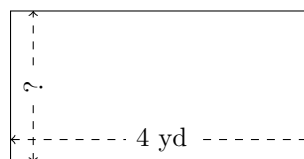
1.



$$P = ?$$

$$A = ?$$

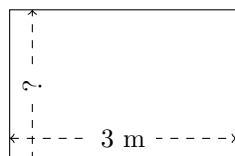
2.



$$P = 12 \text{ yd}$$

$$A = ?$$

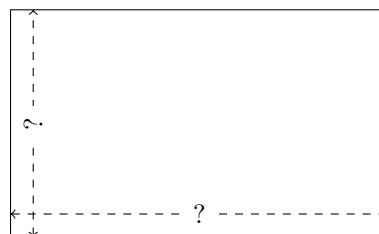
3.



$$P = ?$$

$$A = 6 \text{ m}^2$$

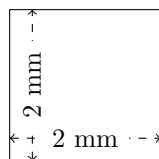
4.



$$P = 32 \text{ mm}$$

$$A = 60 \text{ mm}^2$$

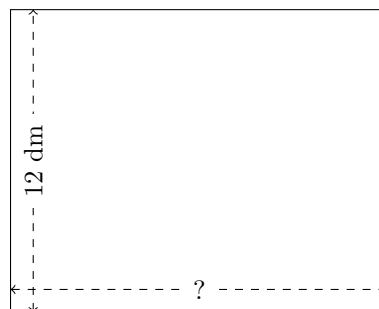
5.



$$P = ?$$

$$A = ?$$

6.




$$P = 54 \text{ dm}$$

$$A = ?$$

Mesure d'un Rectangle (D) Réponses

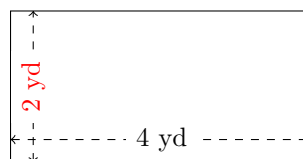
Calculez les mesures manquantes pour chaque rectangle.

1.



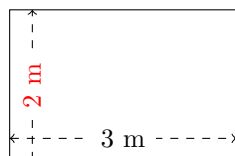
$$P = 48 \text{ mm}$$
$$A = 108 \text{ mm}^2$$

2.



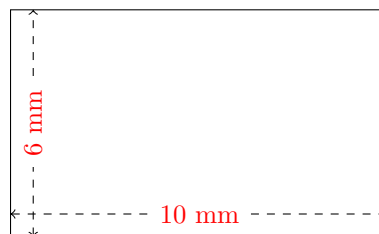
$$P = 12 \text{ yd}$$
$$A = 8 \text{ yd}^2$$

3.



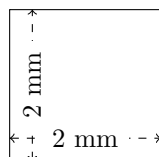
$$P = 10 \text{ m}$$
$$A = 6 \text{ m}^2$$

4.



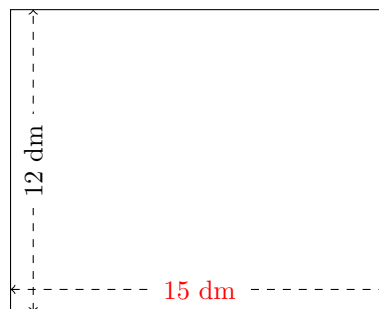
$$P = 32 \text{ mm}$$
$$A = 60 \text{ mm}^2$$

5.



$$P = 8 \text{ mm}$$
$$A = 4 \text{ mm}^2$$

6.

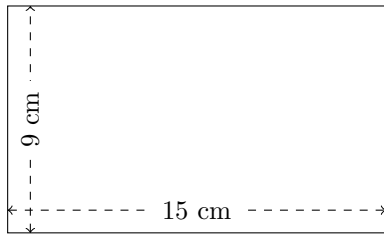


$$P = 54 \text{ dm}$$
$$A = 180 \text{ dm}^2$$

Mesure d'un Rectangle (E)

Calculez les mesures manquantes pour chaque rectangle.

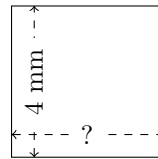
1.



$$P = ?$$

$$A = ?$$

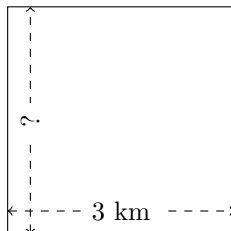
2.



$$P = 16 \text{ mm}$$

$$A = ?$$

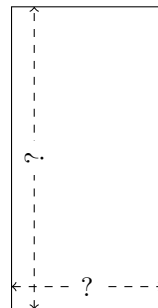
3.



$$P = ?$$

$$A = 9 \text{ km}^2$$


4.



$$P = 24 \text{ nm}$$

$$A = 32 \text{ nm}^2$$

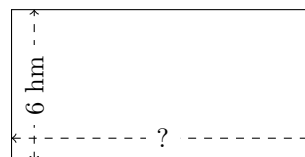
5.



$$P = 14 \text{ dam}$$

$$A = 12 \text{ dam}^2$$

6.



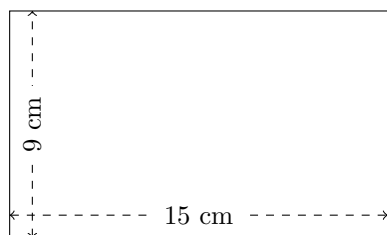
$$P = 36 \text{ hm}$$

$$A = ?$$

Mesure d'un Rectangle (E) Réponses

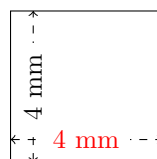
Calculez les mesures manquantes pour chaque rectangle.

1.



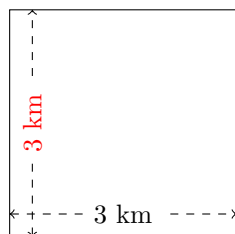
$$P = 48 \text{ cm}$$
$$A = 135 \text{ cm}^2$$

2.



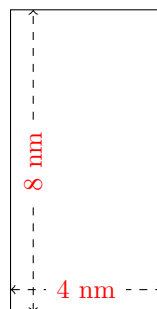
$$P = 16 \text{ mm}$$
$$A = 16 \text{ mm}^2$$

3.




$$P = 12 \text{ km}$$
$$A = 9 \text{ km}^2$$

4.



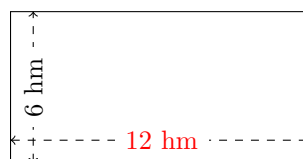
$$P = 24 \text{ nm}$$
$$A = 32 \text{ nm}^2$$

5.



$$P = 14 \text{ dam}$$
$$A = 12 \text{ dam}^2$$

6.

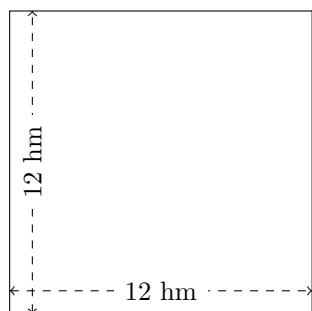


$$P = 36 \text{ hm}$$
$$A = 72 \text{ hm}^2$$

Mesure d'un Rectangle (F)

Calculez les mesures manquantes pour chaque rectangle.

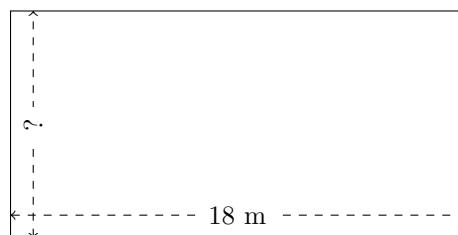
1.



$$P = ?$$

$$A = ?$$

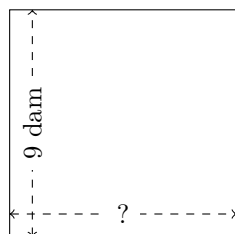
2.



$$P = 54 \text{ m}$$

$$A = ?$$

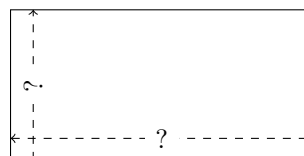
3.



$$P = ?$$

$$A = 81 \text{ dam}^2$$

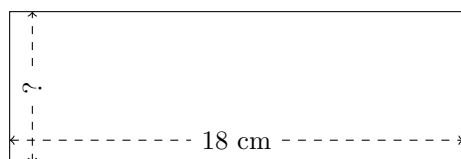
4.



$$P = 12 \text{ m}$$

$$A = 8 \text{ m}^2$$

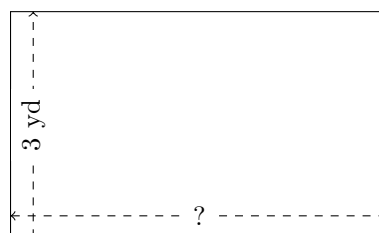
5.



$$P = 48 \text{ cm}$$

$$A = ?$$

6.



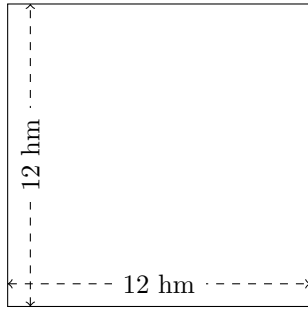
$$P = 16 \text{ yd}$$

$$A = ?$$

Mesure d'un Rectangle (F) Réponses

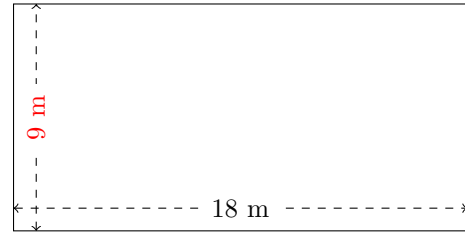
Calculez les mesures manquantes pour chaque rectangle.

1.



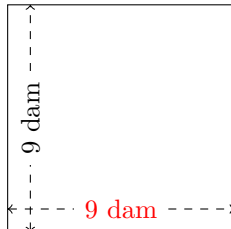
$$P = 48 \text{ hm}$$
$$A = 144 \text{ hm}^2$$

2.



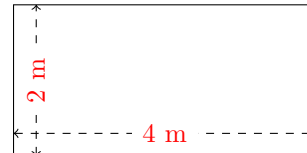
$$P = 54 \text{ m}$$
$$A = 162 \text{ m}^2$$

3.



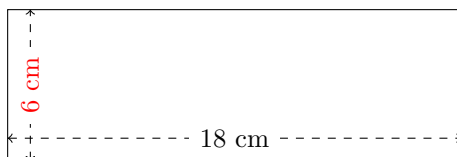
$$P = 36 \text{ dam}$$
$$A = 81 \text{ dam}^2$$

4.



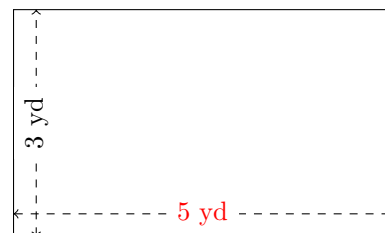
$$P = 12 \text{ m}$$
$$A = 8 \text{ m}^2$$

5.



$$P = 48 \text{ cm}$$
$$A = 108 \text{ cm}^2$$

6.

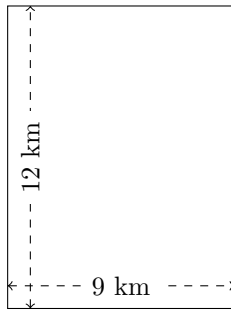


$$P = 16 \text{ yd}$$
$$A = 15 \text{ yd}^2$$

Mesure d'un Rectangle (G)


Calculez les mesures manquantes pour chaque rectangle.

1.



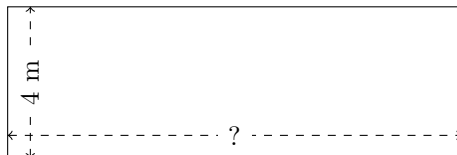
$$P = ?$$
$$A = ?$$

2.



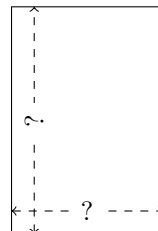
$$P = 36 \text{ yd}$$
$$A = ?$$

3.



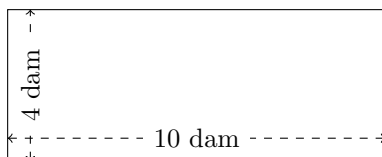
$$P = ?$$
$$A = 48 \text{ m}^2$$

4.



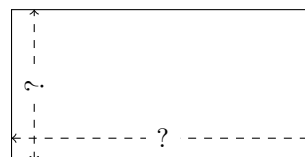
$$P = 10 \text{ m}$$
$$A = 6 \text{ m}^2$$

5.



$$P = ?$$
$$A = ?$$

6.

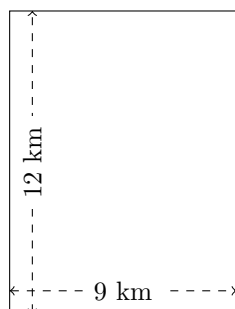


$$P = 36 \text{ nm}$$
$$A = 72 \text{ nm}^2$$

Mesure d'un Rectangle (G) Réponses

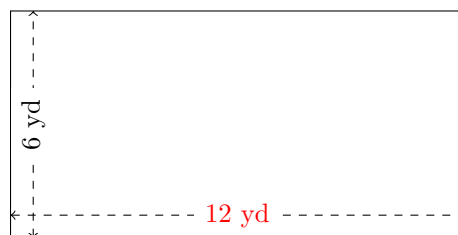
Calculez les mesures manquantes pour chaque rectangle.

1.



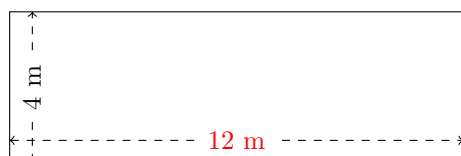
$$P = 42 \text{ km}$$
$$A = 108 \text{ km}^2$$

2.



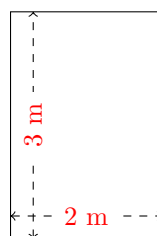
$$P = 36 \text{ yd}$$
$$A = 72 \text{ yd}^2$$

3.



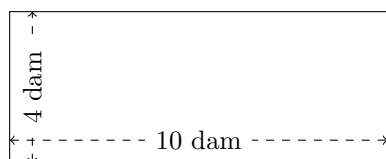
$$P = 32 \text{ m}$$
$$A = 48 \text{ m}^2$$

4.



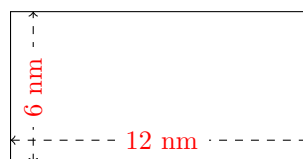
$$P = 10 \text{ m}$$
$$A = 6 \text{ m}^2$$

5.



$$P = 28 \text{ dam}$$
$$A = 40 \text{ dam}^2$$

6.

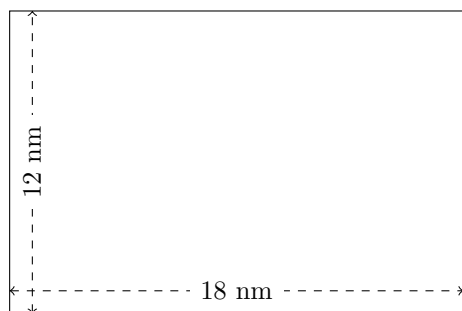


$$P = 36 \text{ nm}$$
$$A = 72 \text{ nm}^2$$

Mesure d'un Rectangle (H)

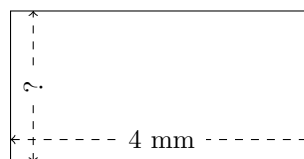
Calculez les mesures manquantes pour chaque rectangle.

1.




$$P = ?$$
$$A = ?$$

2.



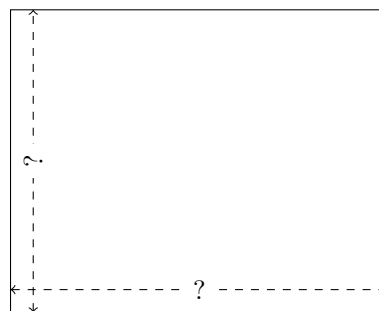
$$P = 12 \text{ mm}$$
$$A = ?$$

3.



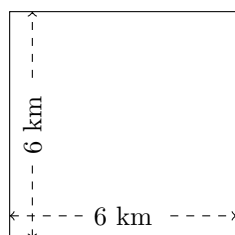
$$P = ?$$
$$A = 72 \text{ dam}^2$$

4.



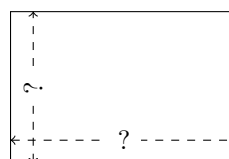
$$P = 18 \text{ nm}$$
$$A = 20 \text{ nm}^2$$

5.



$$P = ?$$
$$A = ?$$

6.

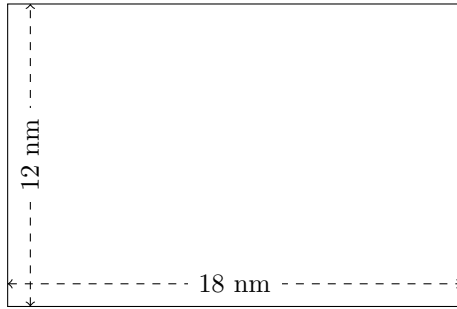


$$P = 30 \text{ yd}$$
$$A = 54 \text{ yd}^2$$

Mesure d'un Rectangle (H) Réponses

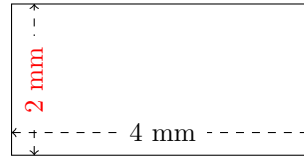
Calculez les mesures manquantes pour chaque rectangle.

1.



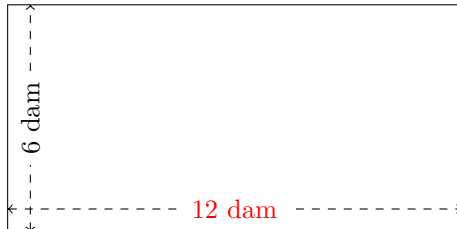
$$P = 60 \text{ nm}$$
$$A = 216 \text{ nm}^2$$

2.



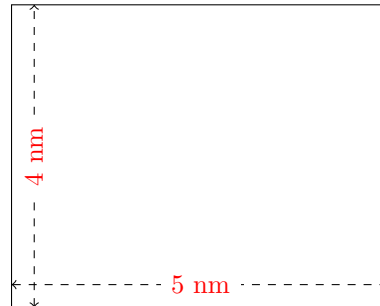
$$P = 12 \text{ mm}$$
$$A = 8 \text{ mm}^2$$

3.



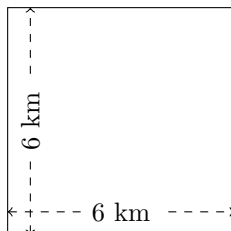
$$P = 36 \text{ dam}$$
$$A = 72 \text{ dam}^2$$

4.



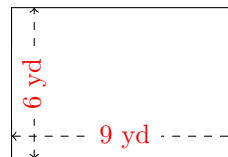
$$P = 18 \text{ mm}$$
$$A = 20 \text{ mm}^2$$

5.



$$P = 24 \text{ km}$$
$$A = 36 \text{ km}^2$$

6.

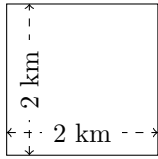


$$P = 30 \text{ yd}$$
$$A = 54 \text{ yd}^2$$

Mesure d'un Rectangle (I)

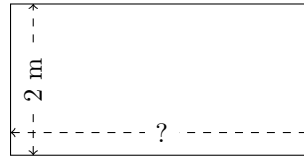
Calculez les mesures manquantes pour chaque rectangle.

1.



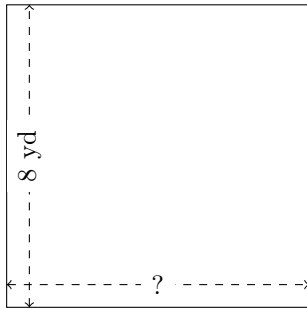
$$P = ?$$
$$A = ?$$

2.



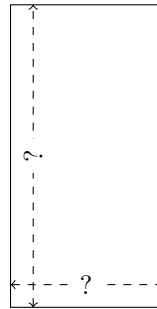
$$P = 12 \text{ m}$$
$$A = ?$$

3.



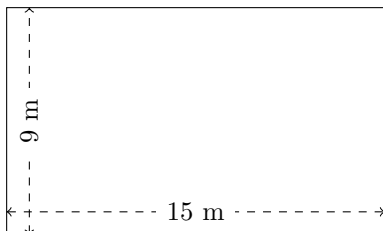
$$P = ?$$
$$A = 64 \text{ yd}^2$$

4.



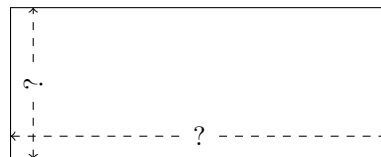
$$P = 24 \text{ dm}$$
$$A = 32 \text{ dm}^2$$

5.



$$P = ?$$
$$A = ?$$

6.

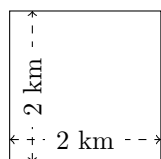


$$P = 14 \text{ cm}$$
$$A = 10 \text{ cm}^2$$

Mesure d'un Rectangle (I) Réponses

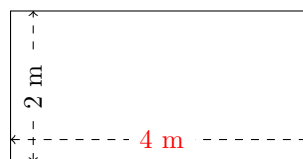
Calculez les mesures manquantes pour chaque rectangle.

1.



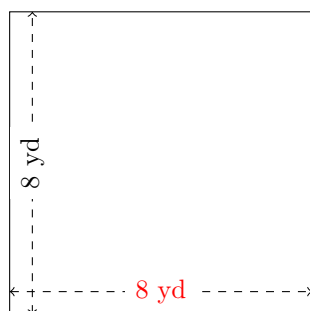
$$P = 8 \text{ km}$$
$$A = 4 \text{ km}^2$$

2.



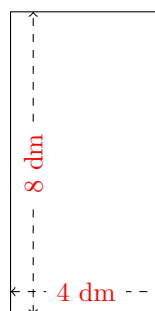
$$P = 12 \text{ m}$$
$$A = 8 \text{ m}^2$$

3.



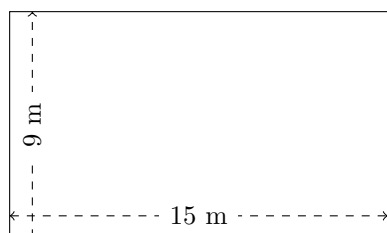
$$P = 32 \text{ yd}$$
$$A = 64 \text{ yd}^2$$

4.



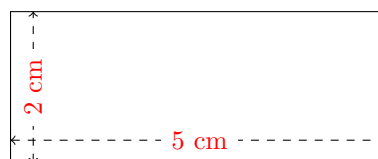
$$P = 24 \text{ dm}$$
$$A = 32 \text{ dm}^2$$

5.



$$P = 48 \text{ m}$$
$$A = 135 \text{ m}^2$$

6.

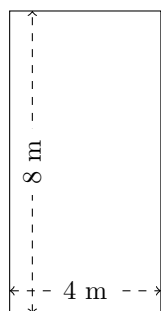


$$P = 14 \text{ cm}$$
$$A = 10 \text{ cm}^2$$

Mesure d'un Rectangle (J)

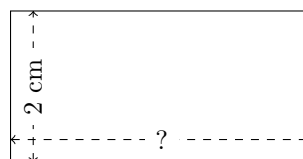
Calculez les mesures manquantes pour chaque rectangle.

1.




$$P = ?$$
$$A = ?$$

2.



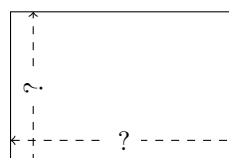
$$P = 12 \text{ cm}$$
$$A = ?$$

3.



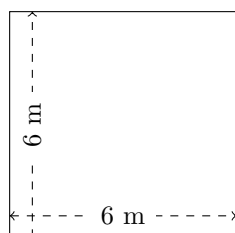
$$P = ?$$
$$A = 40 \text{ dam}^2$$

4.



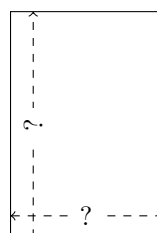
$$P = 10 \text{ m}$$
$$A = 6 \text{ m}^2$$

5.



$$P = ?$$
$$A = ?$$

6.

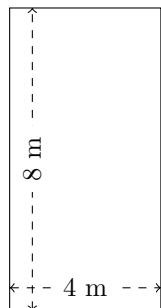


$$P = 20 \text{ dam}$$
$$A = 24 \text{ dam}^2$$

Mesure d'un Rectangle (J) Réponses

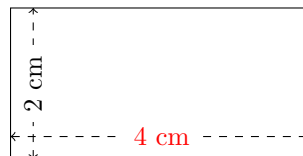
Calculez les mesures manquantes pour chaque rectangle.

1.




$$P = 24 \text{ m}$$
$$A = 32 \text{ m}^2$$

2.



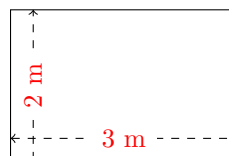
$$P = 12 \text{ cm}$$
$$A = 8 \text{ cm}^2$$

3.



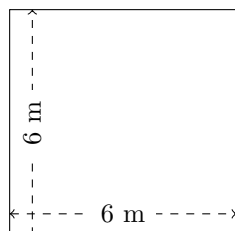
$$P = 28 \text{ dam}$$
$$A = 40 \text{ dam}^2$$

4.



$$P = 10 \text{ m}$$
$$A = 6 \text{ m}^2$$

5.



$$P = 24 \text{ m}$$
$$A = 36 \text{ m}^2$$

6.



$$P = 20 \text{ dam}$$
$$A = 24 \text{ dam}^2$$