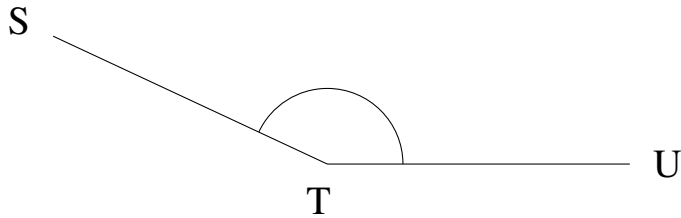


Mesure d'Angles (C)

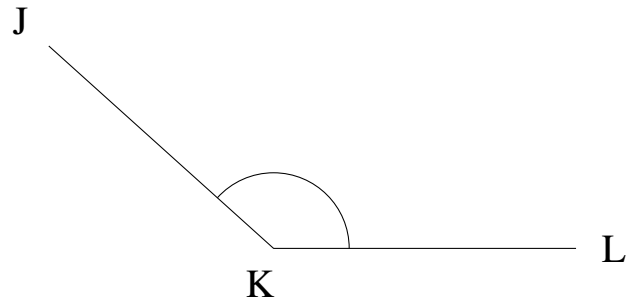
Estimez et ensuite mesurez à l'aide d'un rapporteur la valeur de chaque angle.

1.



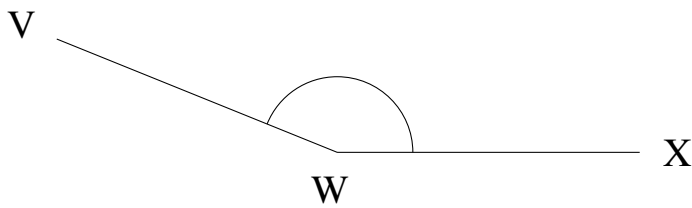
$$m\angle STU =$$

2.



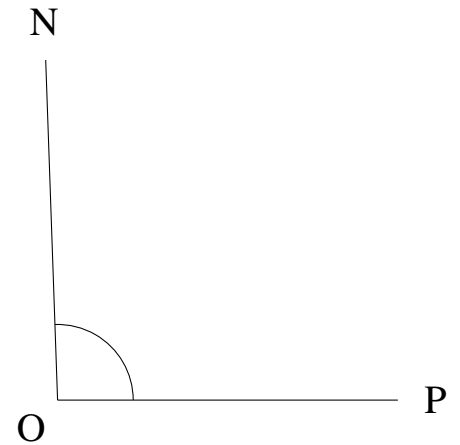
$$m\angle JKL =$$

3.



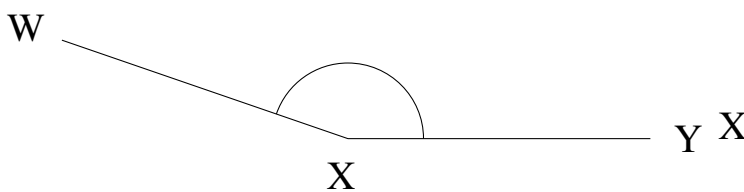
$$m\angle VWX =$$

4.



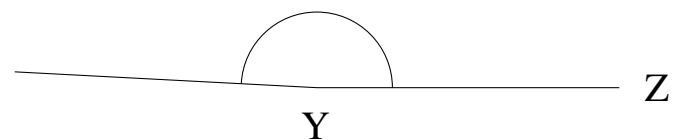
$$m\angle NOP =$$

5.



$$m\angle WXY =$$

6.

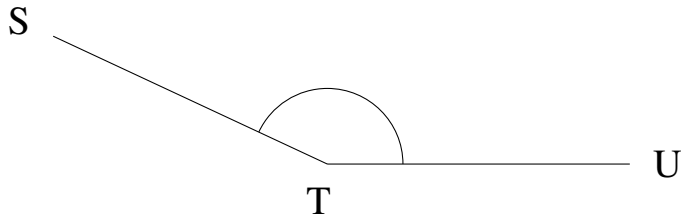


$$m\angle XYZ =$$

Mesure d'Angles (C) Solutions

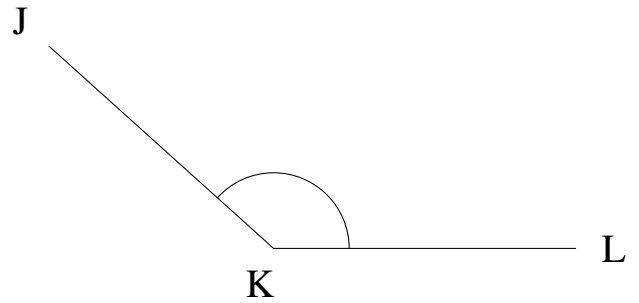
Estimez et ensuite mesurez à l'aide d'un rapporteur la valeur de chaque angle.

1.



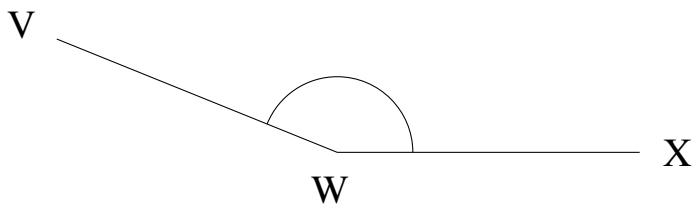
$$m\angle STU = 155^\circ$$

2.



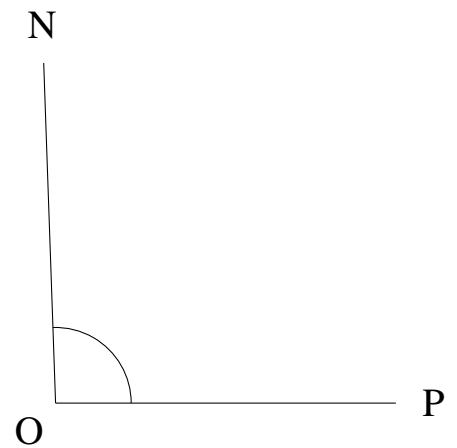
$$m\angle JKL = 138^\circ$$

3.



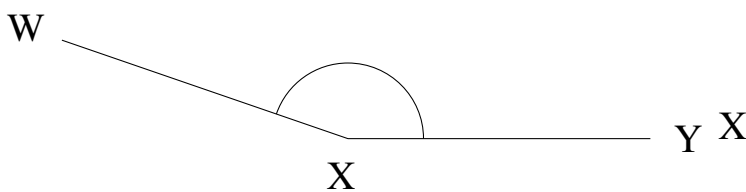
$$m\angle VWX = 158^\circ$$

4.



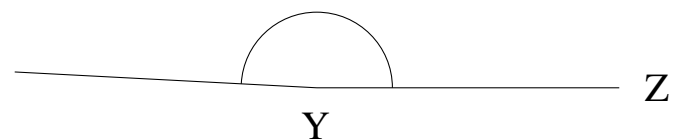
$$m\angle NOP = 92^\circ$$

5.



$$m\angle WXY = 161^\circ$$

6.



$$m\angle XYZ = 177^\circ$$