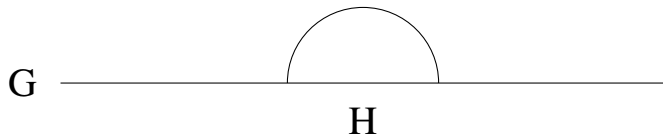


Mesure d'Angles (H)

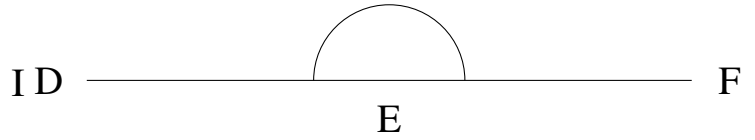
Estimez et ensuite mesurez à l'aide d'un rapporteur la valeur de chaque angle.

1.



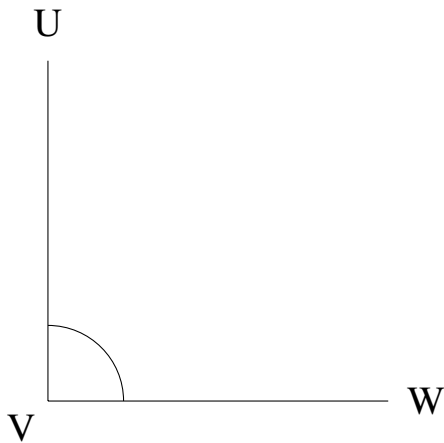
$$m\angle GHI =$$

2.



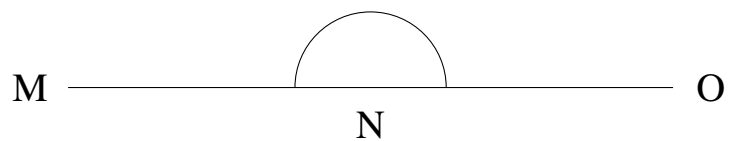
$$m\angle DEF =$$

3.



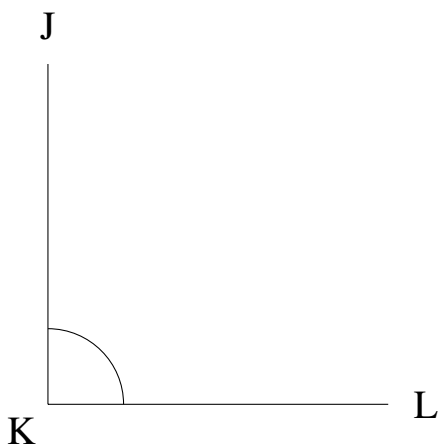
$$m\angle UVW =$$

4.



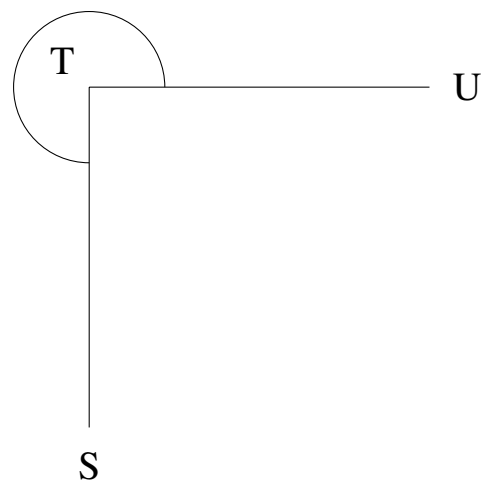
$$m\angle MNO =$$

5.



$$m\angle JKL =$$

6.

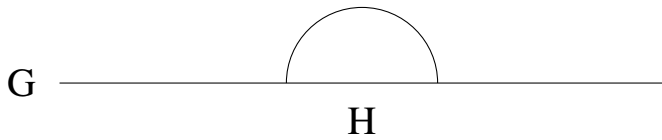


$$m\angle STU =$$

Mesure d'Angles (H) Solutions

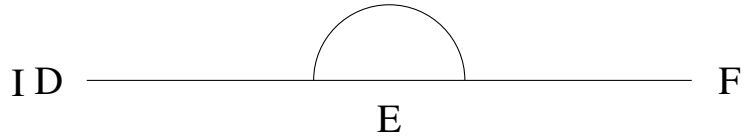
Estimez et ensuite mesurez à l'aide d'un rapporteur la valeur de chaque angle.

1.



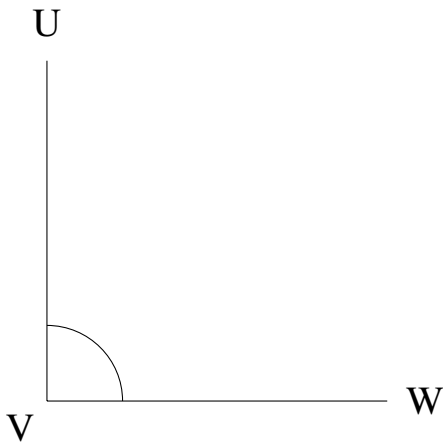
$$m\angle GHI = 180^\circ$$

2.



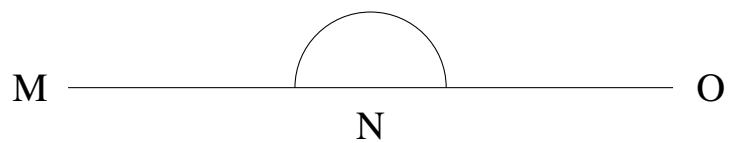
$$m\angle DEF = 180^\circ$$

3.



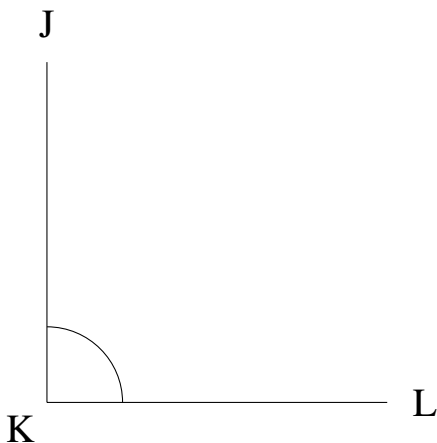
$$m\angle UVW = 90^\circ$$

4.



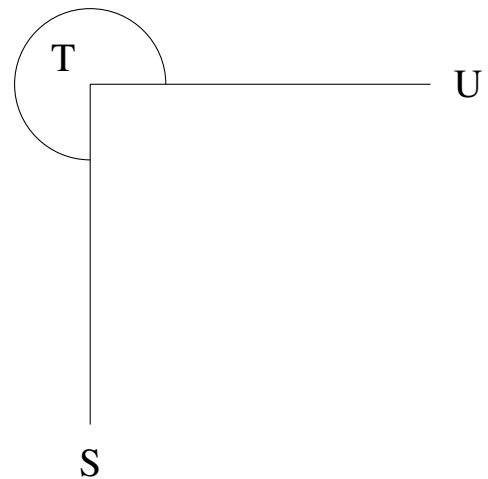
$$m\angle MNO = 180^\circ$$

5.



$$m\angle JKL = 90^\circ$$

6.



$$m\angle STU = 270^\circ$$