


Mesure d'Angles (G)

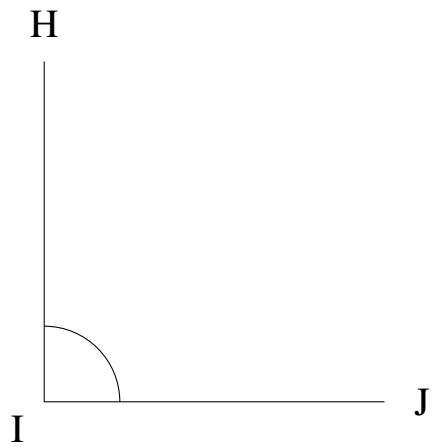
Estimez et ensuite mesurez à l'aide d'un rapporteur la valeur de chaque angle.

1.



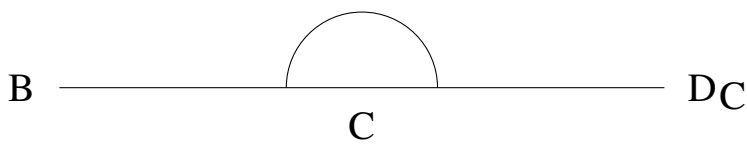
$$m\angle ABC =$$

2.



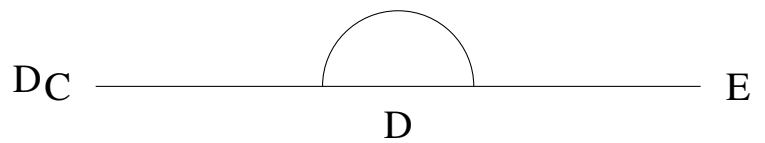
$$m\angle HIJ =$$

3.




$$m\angle BCD =$$

4.



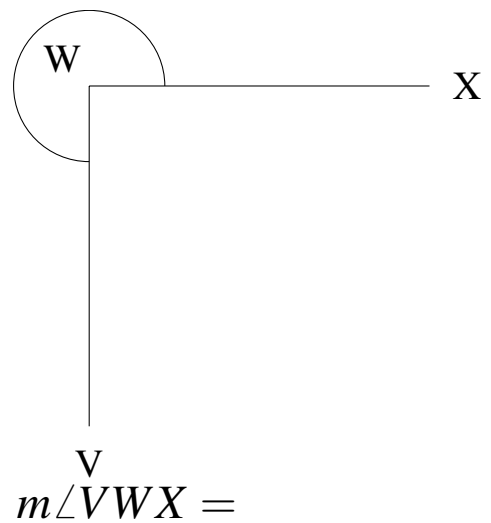
$$m\angle CDE =$$

5.



$$m\angle ABC =$$

6.



$$m\angle VWX =$$