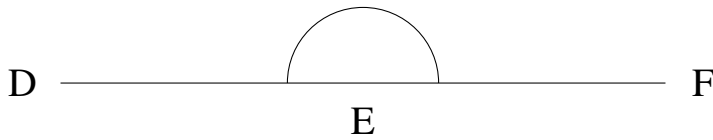


## Mesure d'Angles (C)

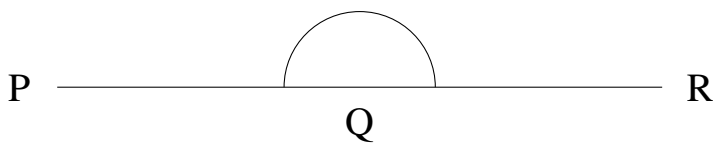
Estimez et ensuite mesurez à l'aide d'un rapporteur la valeur de chaque angle.

1.




$$m\angle DEF =$$

3.



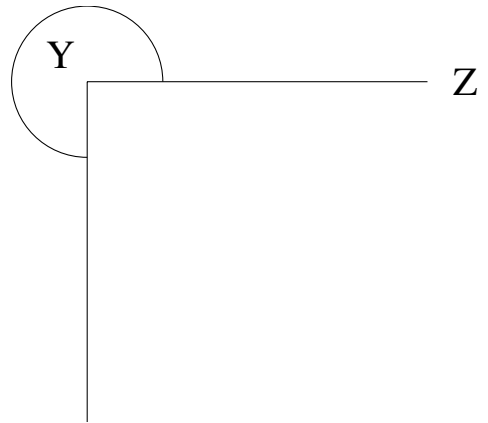
$$m\angle PQR =$$

5.



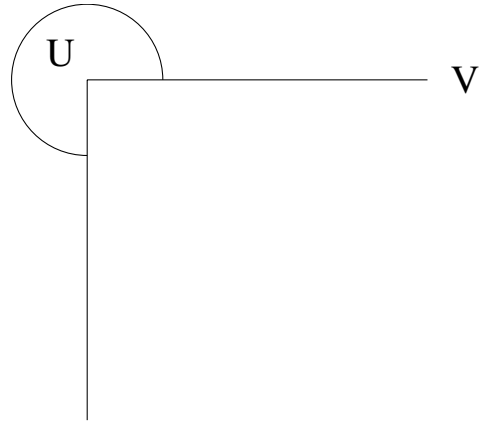
$$m\angle VWX =$$

2.




$$m\angle XYZ =$$

4.



$$m\angle TUV =$$

6.



$$m\angle BCD =$$