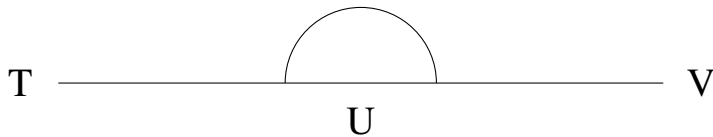


# Mesure d'Angles (A)

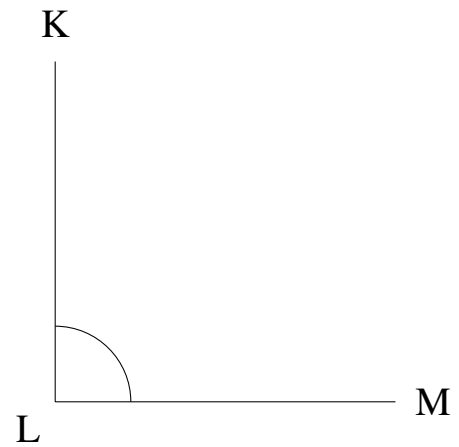
Estimez et ensuite mesurez à l'aide d'un rapporteur la valeur de chaque angle.

1.



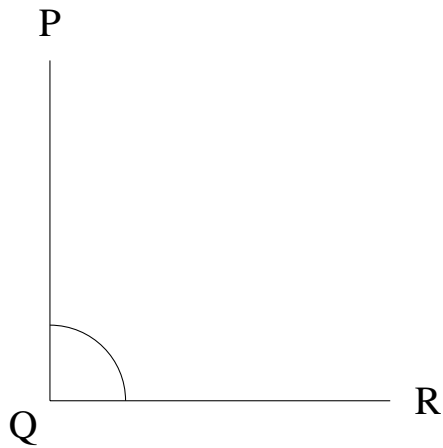
$$m\angle TUV =$$

2.




$$m\angle KLM =$$

3.



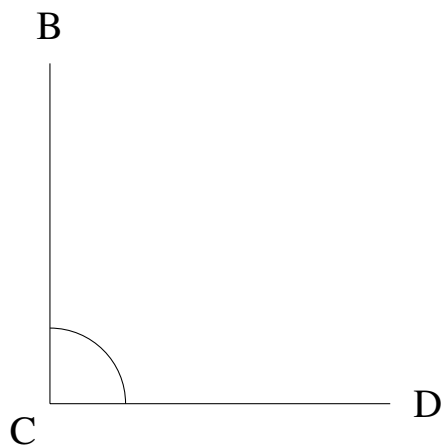
$$m\angle PQR =$$

4.




$$m\angle NOP =$$

5.



$$m\angle BCD =$$

6.



$$m\angle LMN =$$