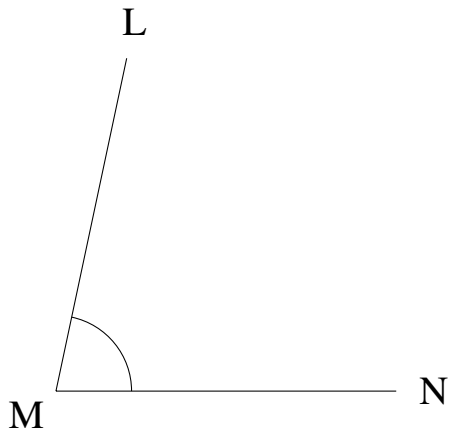


## Mesure d'Angles (F)

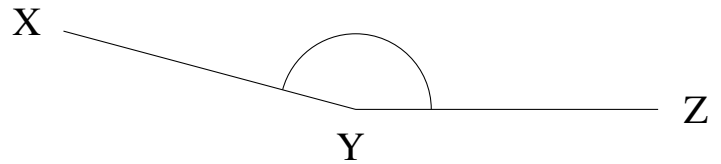
Estimez et ensuite mesurez à l'aide d'un rapporteur la valeur de chaque angle.

1.



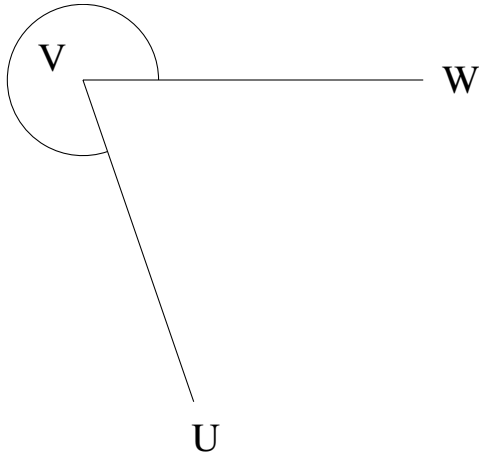
$$m\angle LMN =$$

2.



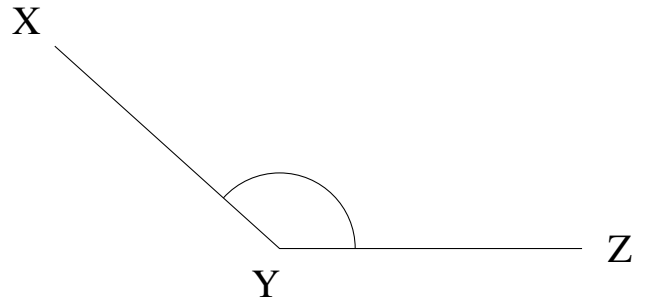
$$m\angle XYZ =$$

3.



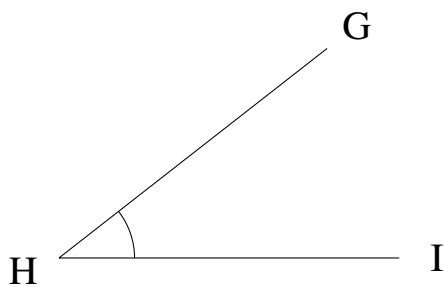
$$m\angle UVW =$$

4.



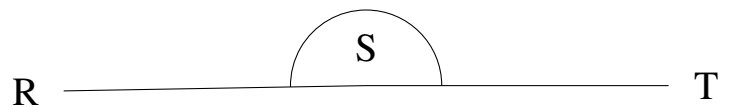
$$m\angle XYZ =$$

5.



$$m\angle GHI =$$

6.

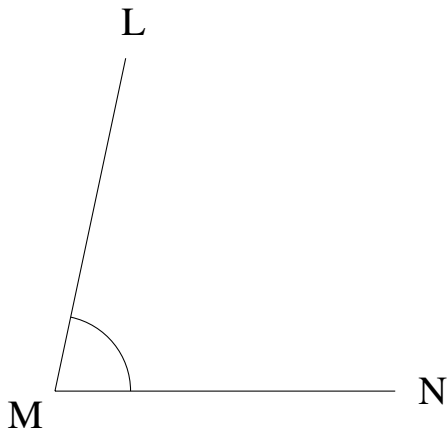


$$m\angle RST =$$

## Mesure d'Angles (F) Solutions

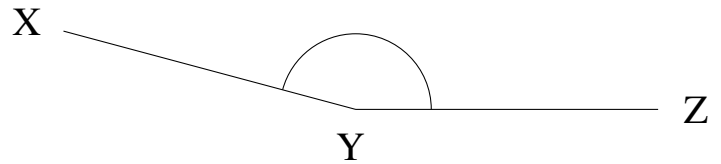
Estimez et ensuite mesurez à l'aide d'un rapporteur la valeur de chaque angle.

1.



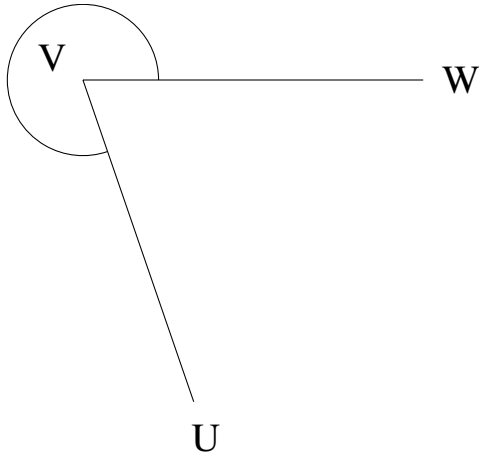
$$m\angle LMN = 78^\circ$$

2.



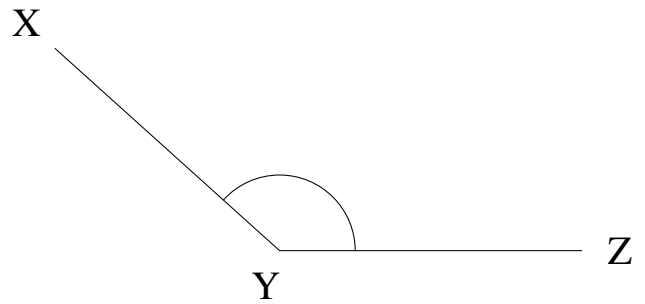
$$m\angle XYZ = 165^\circ$$

3.



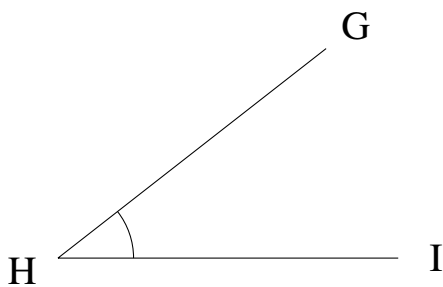
$$m\angle UVW = 289^\circ$$

4.



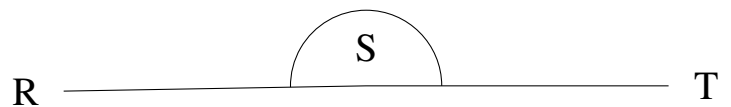
$$m\angle XYZ = 138^\circ$$

5.



$$m\angle GHI = 38^\circ$$

6.



$$m\angle RST = 181^\circ$$