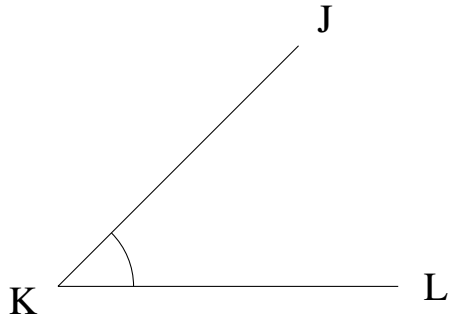


## Mesure d'Angles (H)


Estimez et ensuite mesurez à l'aide d'un rapporteur la valeur de chaque angle.

1.



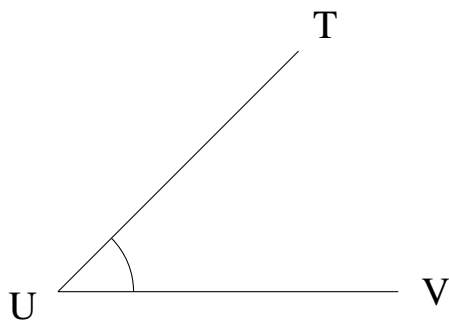
$$m\angle JKL =$$

2.



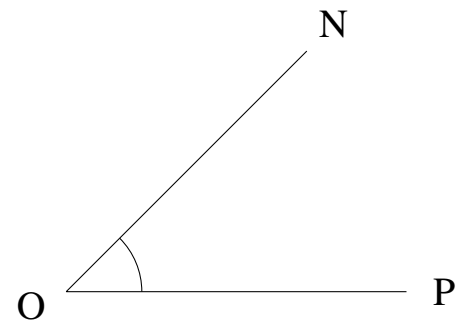
$$m\angle GHI =$$

3.



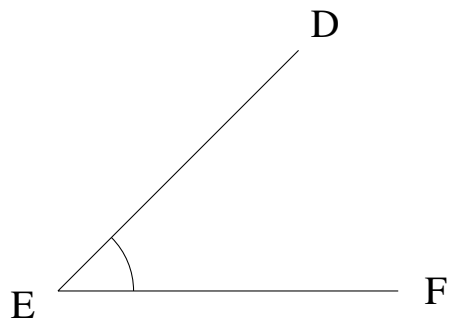
$$m\angle TUV =$$

4.



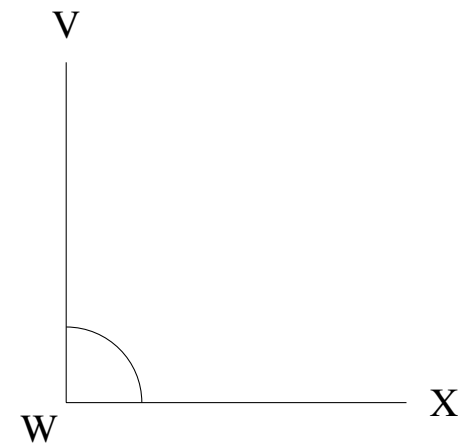
$$m\angle NOP =$$

5.



$$m\angle DEF =$$

6.



$$m\angle VWX =$$