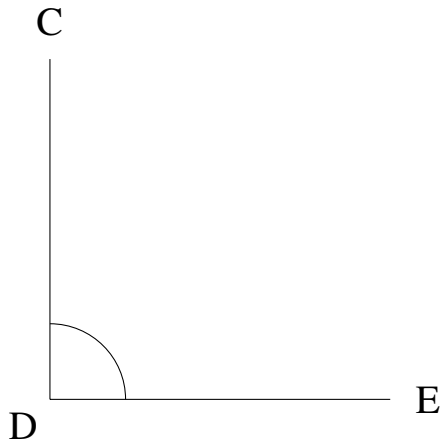


## Mesure d'Angles (D)


Estimez et ensuite mesurez à l'aide d'un rapporteur la valeur de chaque angle.

1.



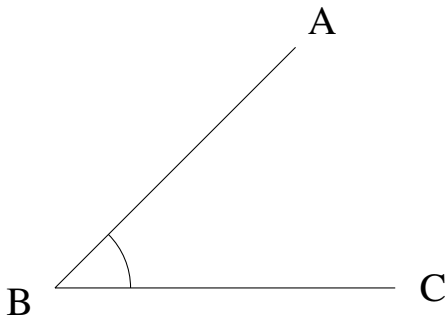
$$m\angle CDE =$$

2.



$$m\angle WXY =$$

3.



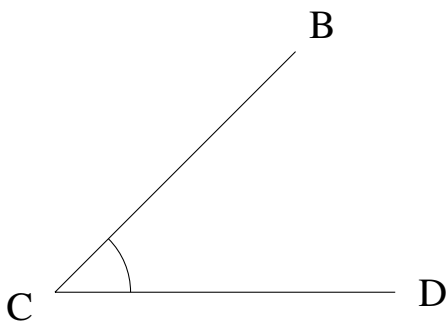
$$m\angle ABC =$$

4.



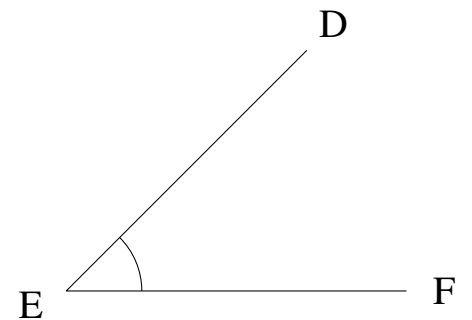
$$m\angle NOP =$$

5.



$$m\angle BCD =$$

6.



$$m\angle DEF =$$