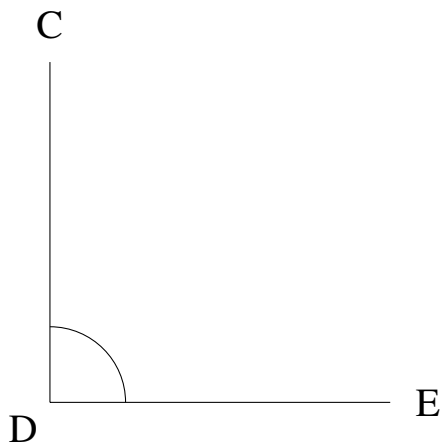


Mesure d'Angles (D)


Estimez et ensuite mesurez à l'aide d'un rapporteur la valeur de chaque angle.

1.



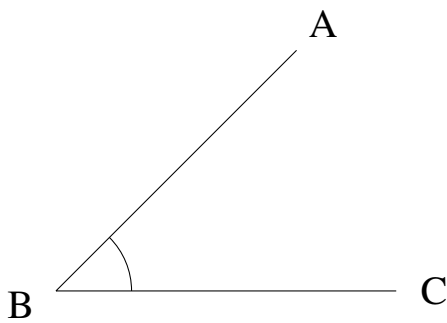
$$m\angle CDE =$$

2.




$$m\angle WXY =$$

3.



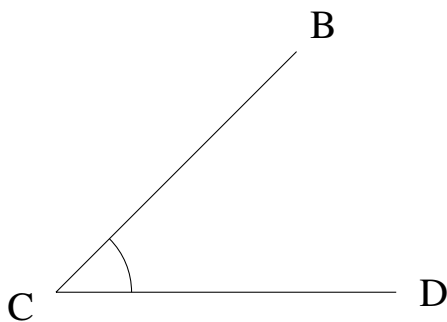
$$m\angle ABC =$$

4.



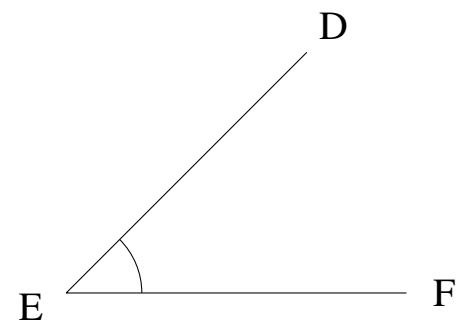
$$m\angle NOP =$$

5.



$$m\angle BCD =$$

6.

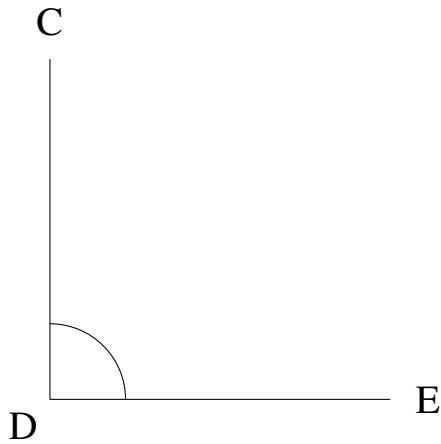


$$m\angle DEF =$$

Mesure d'Angles (D) Solutions


Estimez et ensuite mesurez à l'aide d'un rapporteur la valeur de chaque angle.

1.



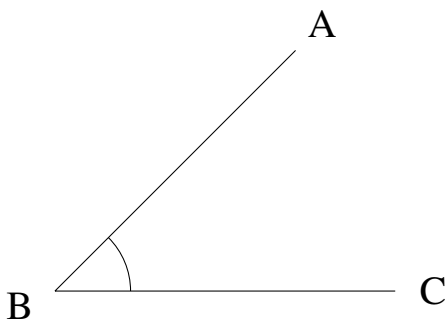
$$m\angle CDE = 90^\circ$$

2.




$$m\angle WXY = 0^\circ$$

3.



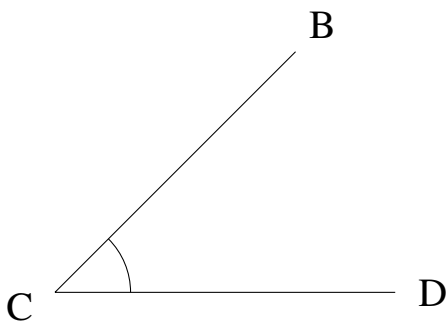
$$m\angle ABC = 45^\circ$$

4.



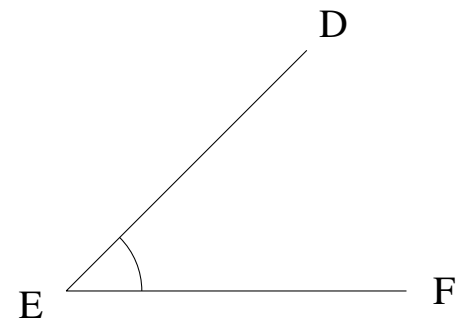
$$m\angle NOP = 0^\circ$$

5.



$$m\angle BCD = 45^\circ$$

6.



$$m\angle DEF = 45^\circ$$