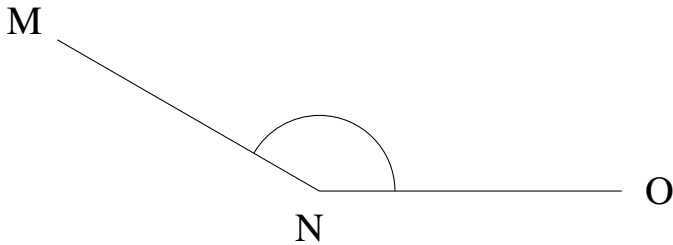


## Mesure d'Angles (F)

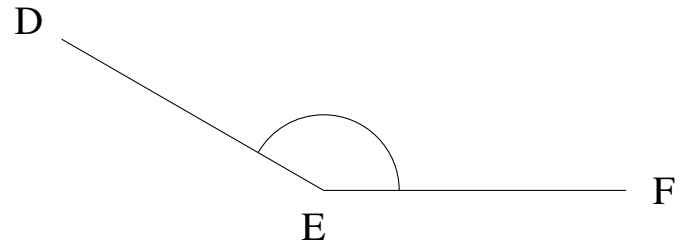
Estimez et ensuite mesurez à l'aide d'un rapporteur la valeur de chaque angle.

1.



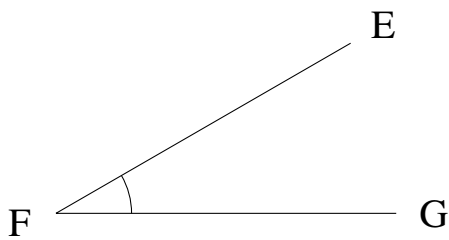
$$m\angle MNO =$$

2.




$$m\angle DEF =$$

3.



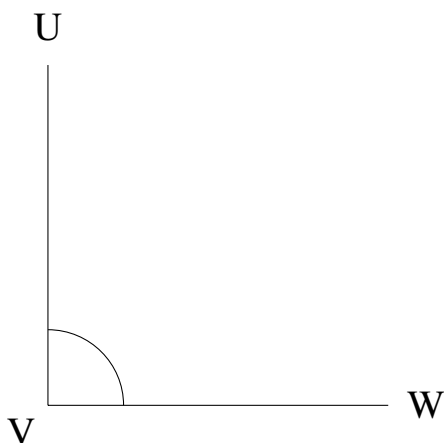
$$m\angle EFG =$$

4.




$$m\angle GHI =$$

5.



$$m\angle UVW =$$

6.



$$m\angle WXY =$$