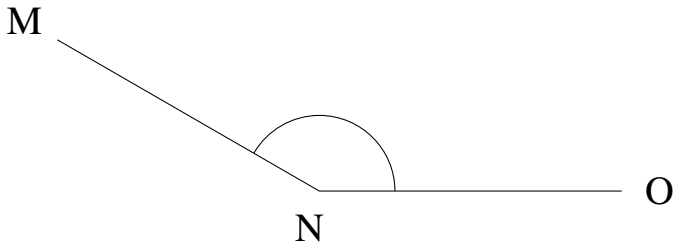


## Mesure d'Angles (F)

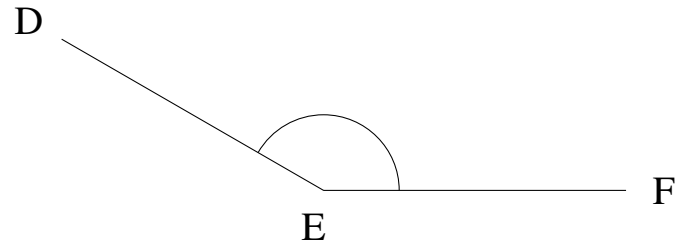
Estimez et ensuite mesurez à l'aide d'un rapporteur la valeur de chaque angle.

1.



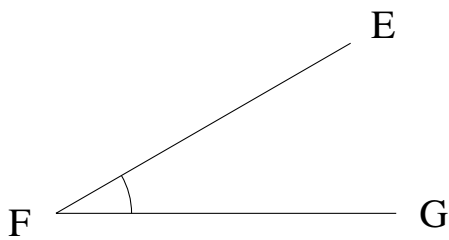
$$m\angle MNO =$$

2.




$$m\angle DEF =$$

3.



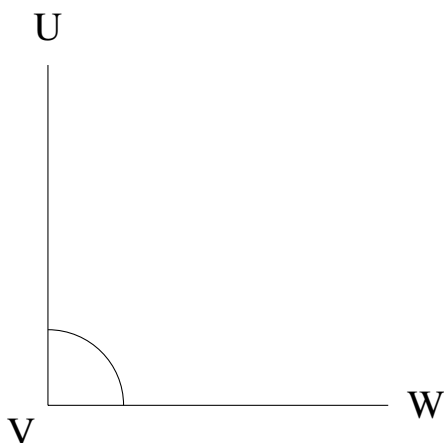
$$m\angle EFG =$$

4.




$$m\angle GHI =$$

5.



$$m\angle UVW =$$

6.

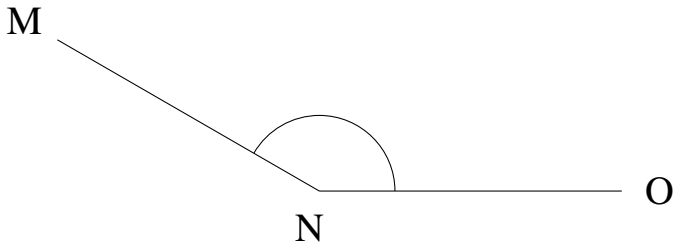


$$m\angle WXY =$$

## Mesure d'Angles (F) Solutions

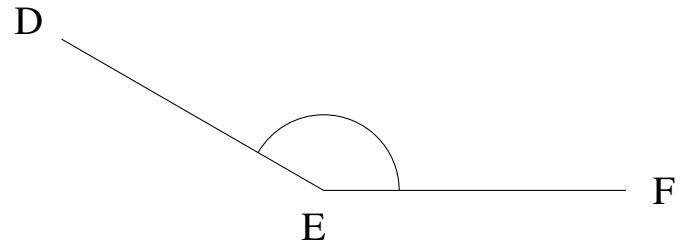
Estimez et ensuite mesurez à l'aide d'un rapporteur la valeur de chaque angle.

1.



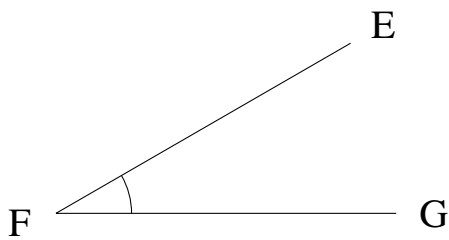
$$m\angle MNO = 150^\circ$$

2.




$$m\angle DEF = 150^\circ$$

3.



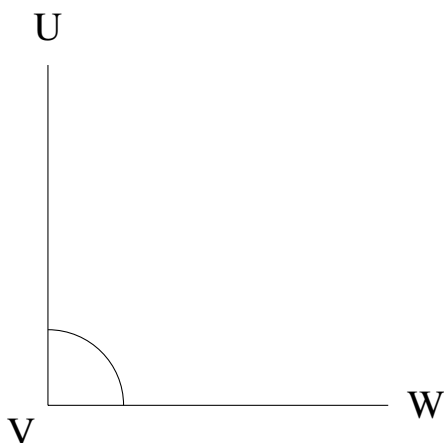
$$m\angle EFG = 30^\circ$$

4.




$$m\angle GHI = 0^\circ$$

5.



$$m\angle UVW = 90^\circ$$

6.



$$m\angle WXY = 0^\circ$$