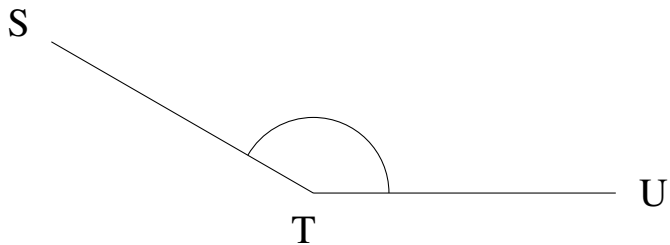


Mesure d'Angles (C)


Estimez et ensuite mesurez à l'aide d'un rapporteur la valeur de chaque angle.

1.




$$m\angle STU =$$

2.



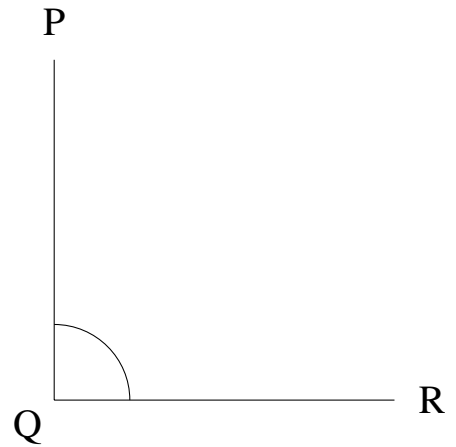
$$m\angle WXY =$$

3.



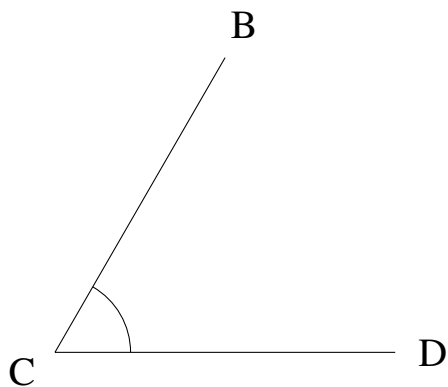
$$m\angle HIJ =$$

4.



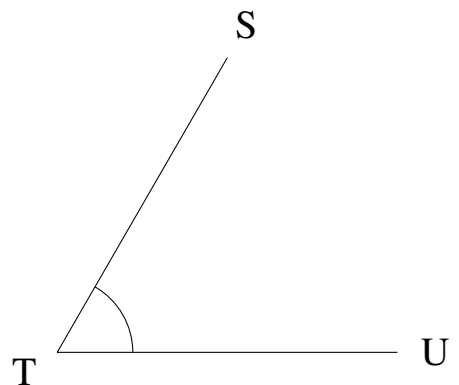
$$m\angle PQR =$$

5.



$$m\angle BCD =$$

6.

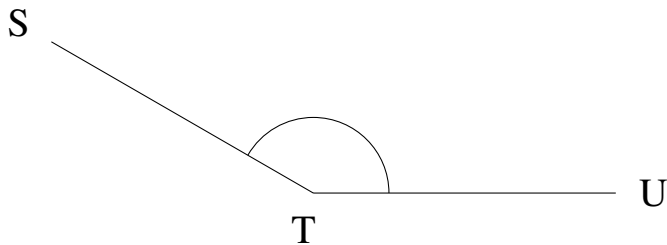


$$m\angle STU =$$

Mesure d'Angles (C) Solutions


Estimez et ensuite mesurez à l'aide d'un rapporteur la valeur de chaque angle.

1.




$$m\angle STU = 150^\circ$$

2.



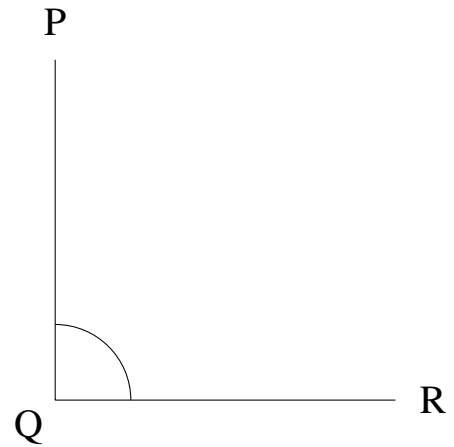
$$m\angle WXY = 0^\circ$$

3.



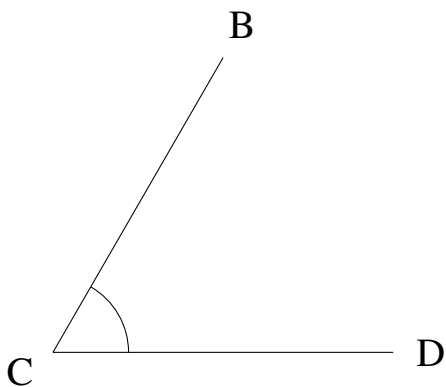
$$m\angle HIJ = 0^\circ$$

4.



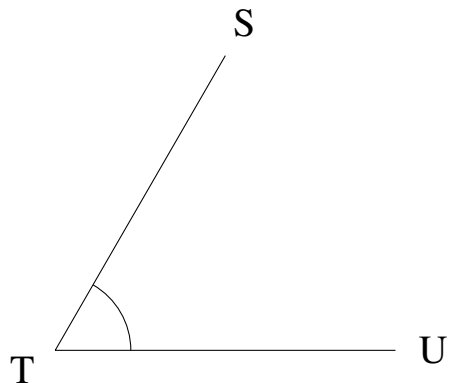
$$m\angle PQR = 90^\circ$$

5.



$$m\angle BCD = 60^\circ$$

6.



$$m\angle STU = 60^\circ$$