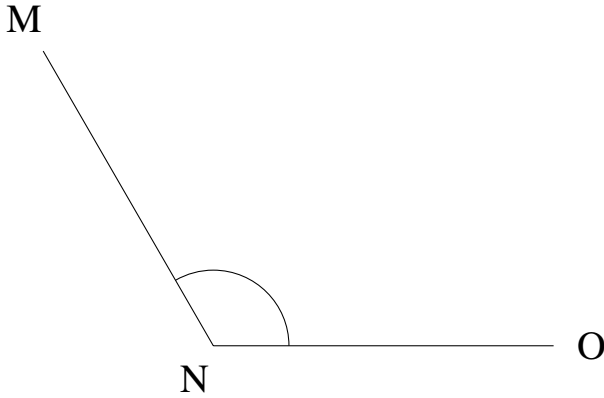


## Mesure d'Angles (B)

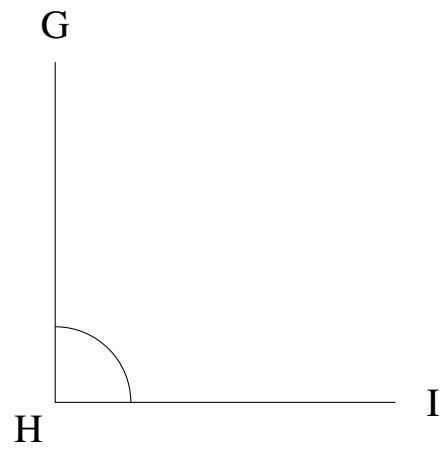
Estimez et ensuite mesurez à l'aide d'un rapporteur la valeur de chaque angle.

1.




$$m\angle MNO =$$

2.




$$m\angle GHI =$$

3.



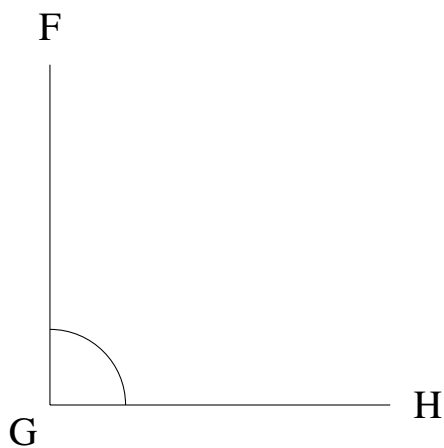
$$m\angle QRS =$$

4.



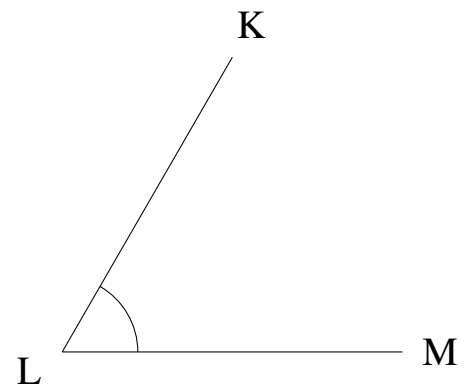
$$m\angle MNO =$$

5.



$$m\angle FGH =$$

6.



$$m\angle KLM =$$