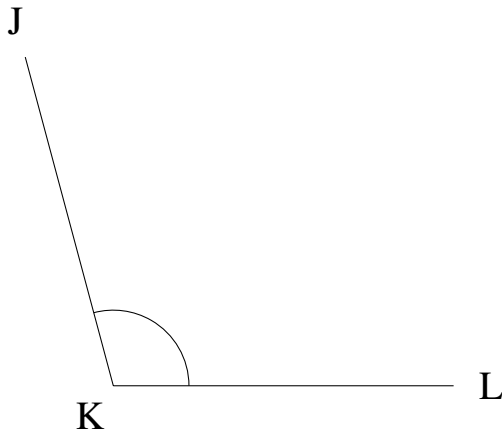


Mesure d'Angles (J)

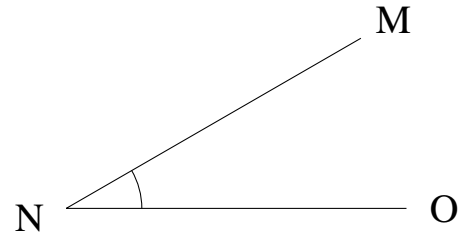
Estimez et ensuite mesurez à l'aide d'un rapporteur la valeur de chaque angle.

1.




$$m\angle JKL =$$

2.



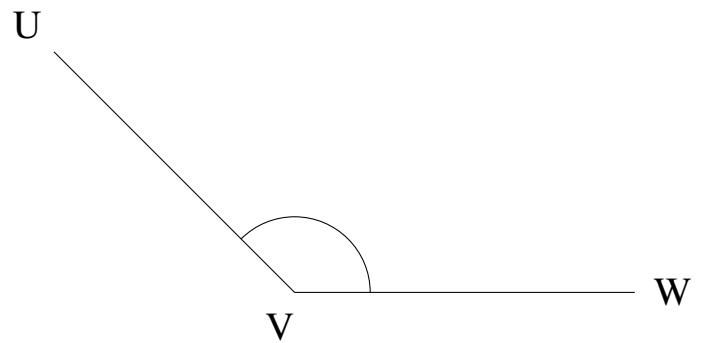
$$m\angle MNO =$$

3.




$$m\angle STU =$$

4.



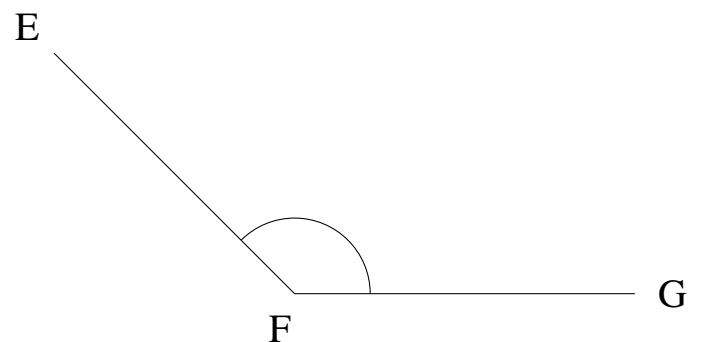
$$m\angle UVW =$$

5.



$$m\angle BCD =$$

6.

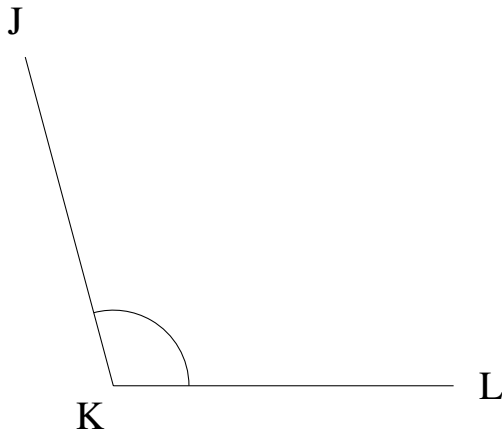


$$m\angle EFG =$$

Mesure d'Angles (J) Solutions

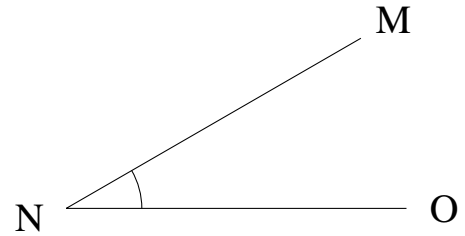
Estimez et ensuite mesurez à l'aide d'un rapporteur la valeur de chaque angle.

1.




$$m\angle JKL = 105^\circ$$

2.



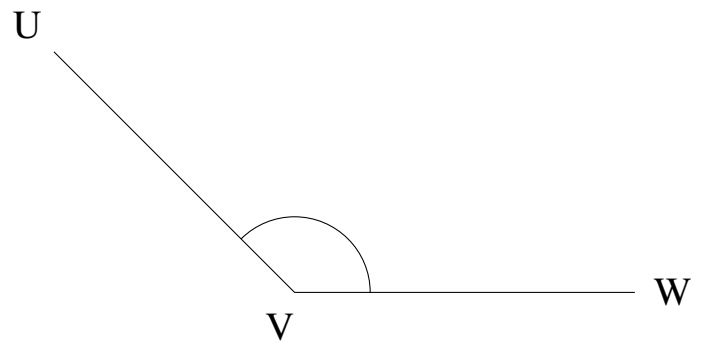
$$m\angle MNO = 30^\circ$$

3.




$$m\angle STU = 0^\circ$$

4.



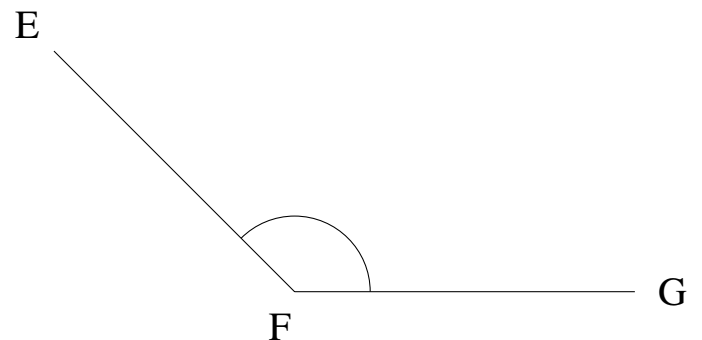
$$m\angle UVW = 135^\circ$$

5.



$$m\angle BCD = 0^\circ$$

6.



$$m\angle EFG = 135^\circ$$