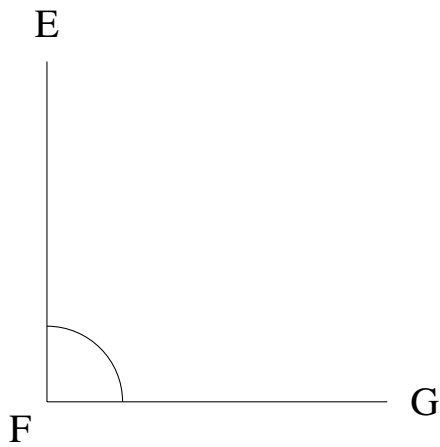


Mesure d'Angles (I)

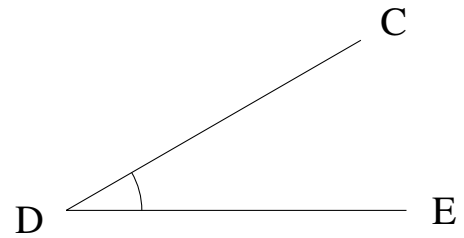
Estimez et ensuite mesurez à l'aide d'un rapporteur la valeur de chaque angle.

1.



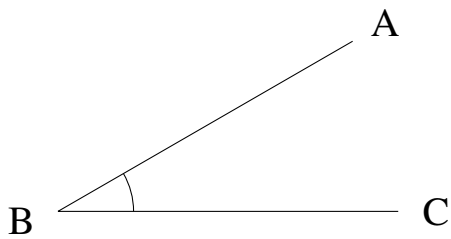
$$m\angle EFG =$$

2.



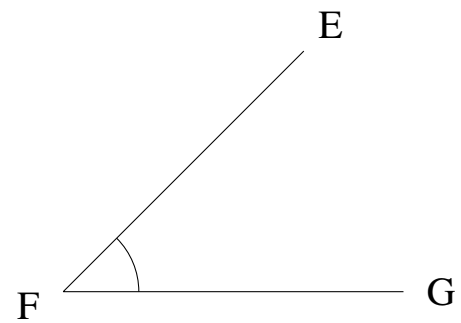
$$m\angle CDE =$$

3.



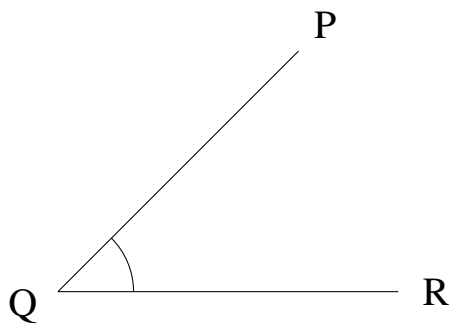
$$m\angle ABC =$$

4.



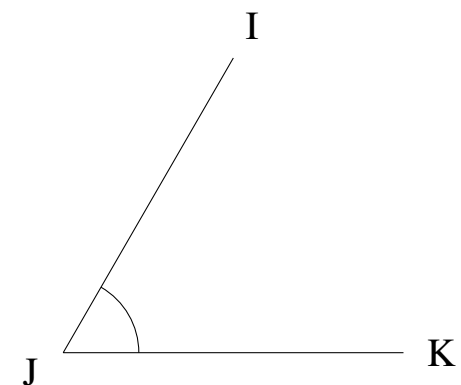
$$m\angle EFG =$$

5.



$$m\angle PQR =$$

6.

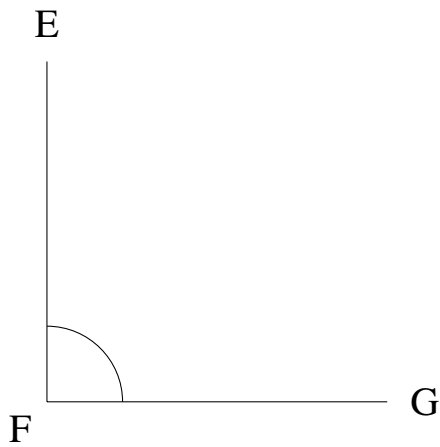


$$m\angle IJK =$$

Mesure d'Angles (I) Solutions

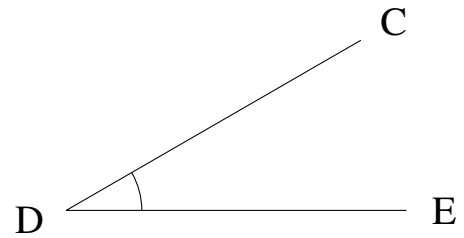
Estimez et ensuite mesurez à l'aide d'un rapporteur la valeur de chaque angle.

1.



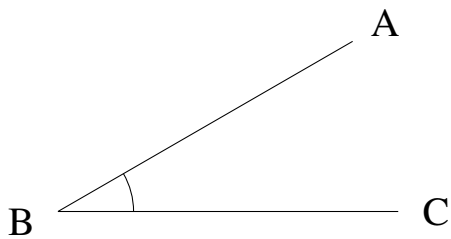
$$m\angle EFG = 90^\circ$$

2.



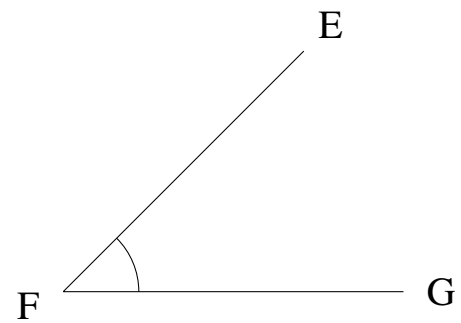
$$m\angle CDE = 30^\circ$$

3.



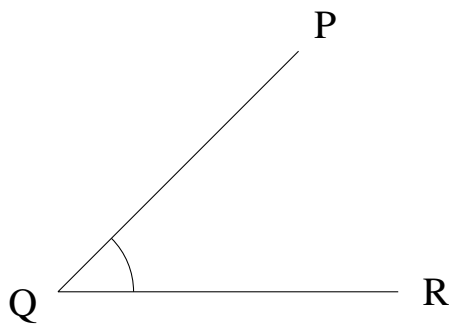
$$m\angle ABC = 30^\circ$$

4.



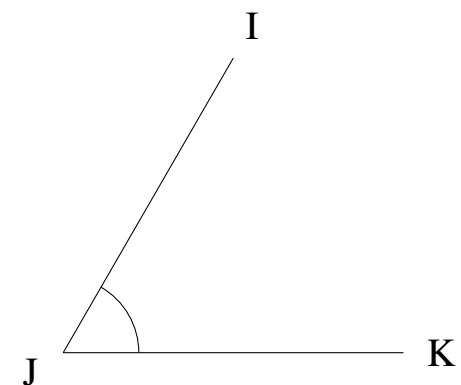
$$m\angle EFG = 45^\circ$$

5.



$$m\angle PQR = 45^\circ$$

6.



$$m\angle IJK = 60^\circ$$