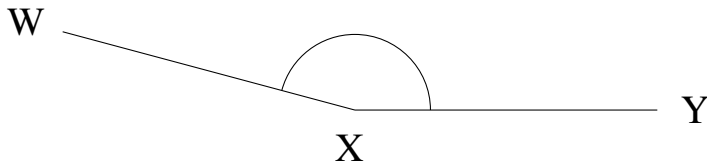


# Mesure d'Angles (H)

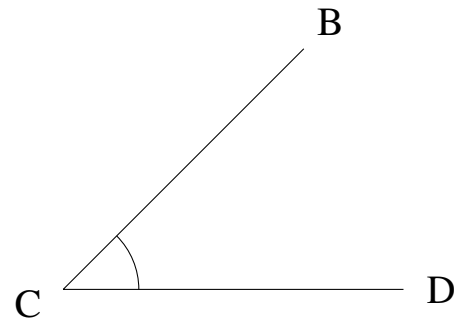
Estimez et ensuite mesurez à l'aide d'un rapporteur la valeur de chaque angle.

1.



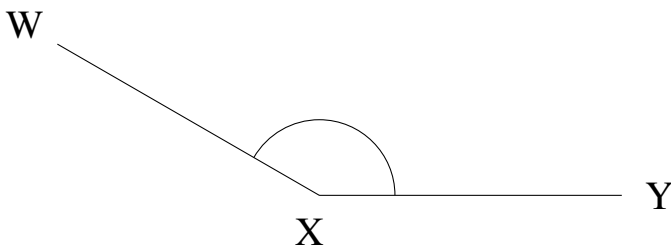
$$m\angle WXY =$$

2.



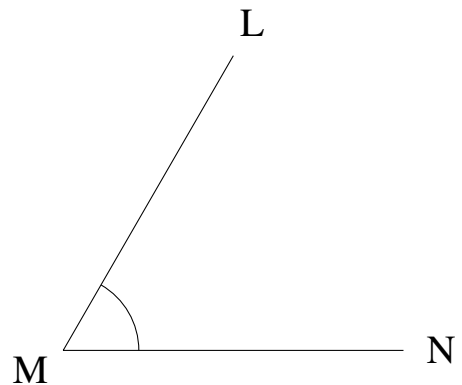
$$m\angle BCD =$$

3.



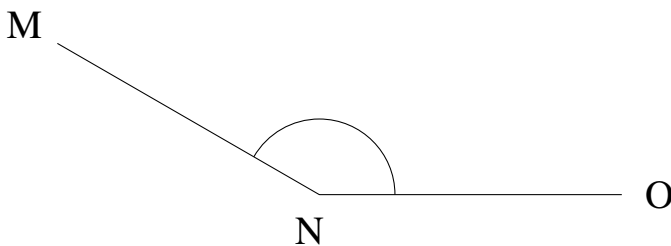
$$m\angle WXY =$$

4.



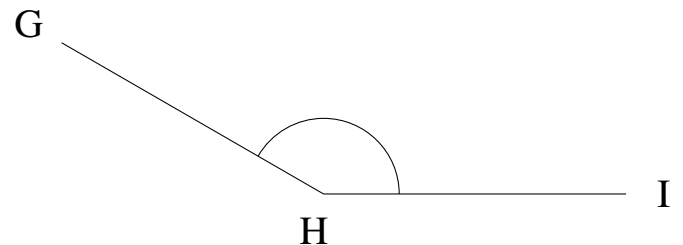
$$m\angle LMN =$$

5.



$$m\angle MNO =$$

6.

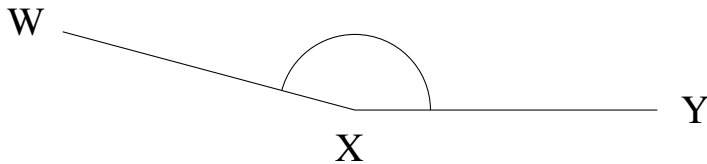


$$m\angle GHI =$$

## Mesure d'Angles (H) Solutions

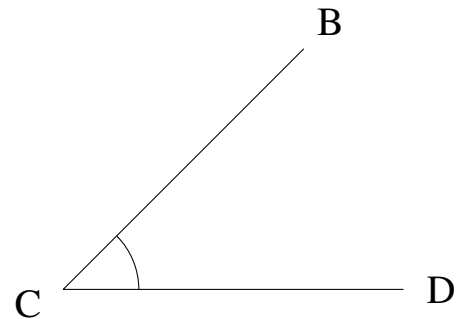
Estimez et ensuite mesurez à l'aide d'un rapporteur la valeur de chaque angle.

1.



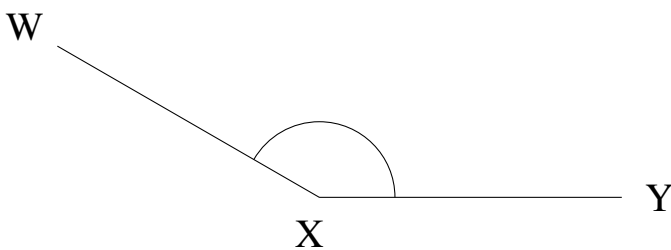
$$m\angle WXY = 165^\circ$$

2.



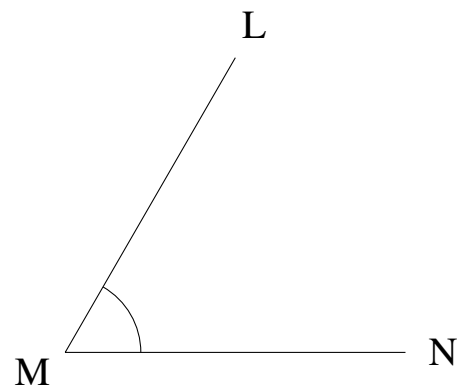
$$m\angle BCD = 45^\circ$$

3.



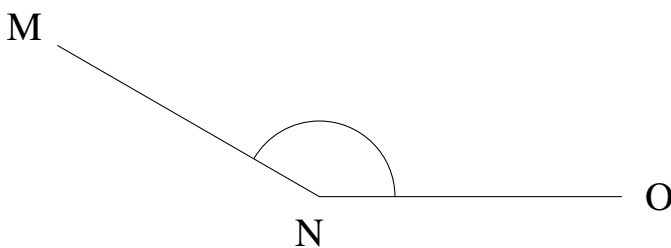
$$m\angle WXY = 150^\circ$$

4.



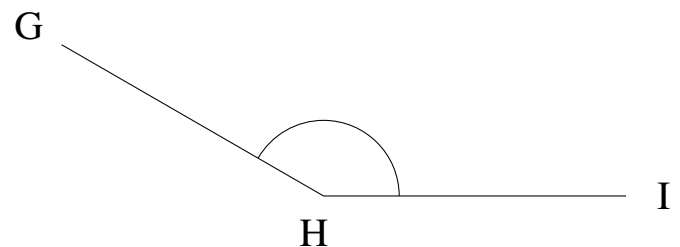
$$m\angle LMN = 60^\circ$$

5.



$$m\angle MNO = 150^\circ$$

6.



$$m\angle GHI = 150^\circ$$