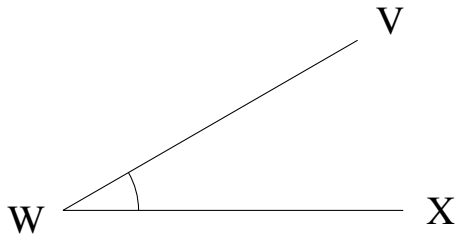


Mesure d'Angles (E)

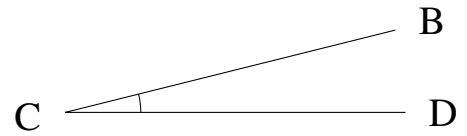
Estimez et ensuite mesurez à l'aide d'un rapporteur la valeur de chaque angle.

1.



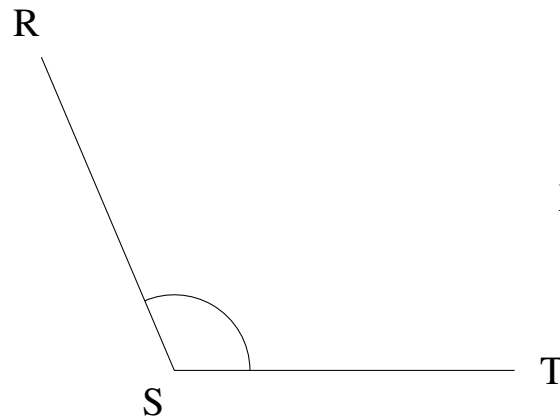
$$m\angle VWX =$$

2.



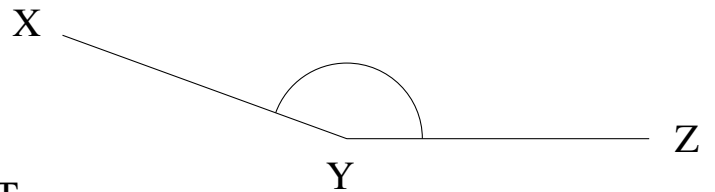
$$m\angle BCD =$$

3.



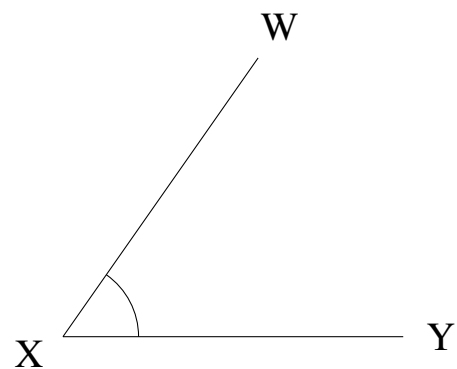
$$m\angle RST =$$

4.



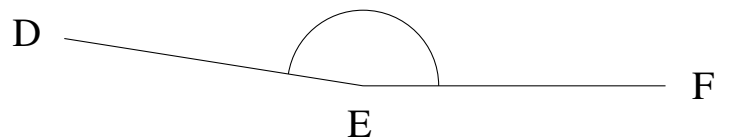
$$m\angle XYZ =$$

5.



$$m\angle WXY =$$

6.

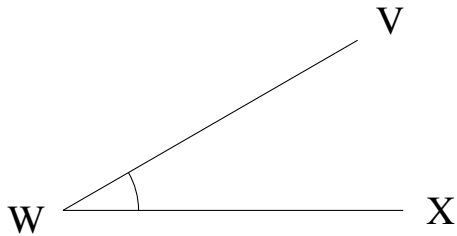


$$m\angle DEF =$$

Mesure d'Angles (E) Solutions

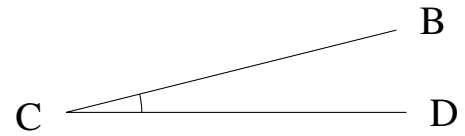
Estimez et ensuite mesurez à l'aide d'un rapporteur la valeur de chaque angle.

1.



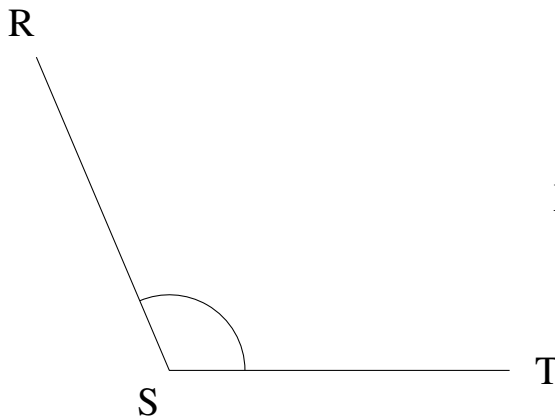
$$m\angle VWX = 30^\circ$$

2.



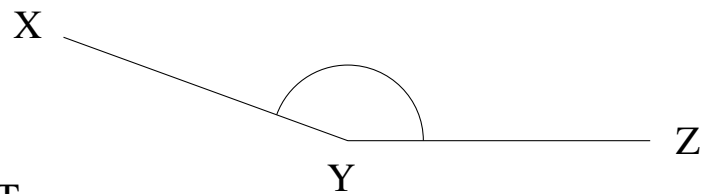
$$m\angle BCD = 14^\circ$$

3.



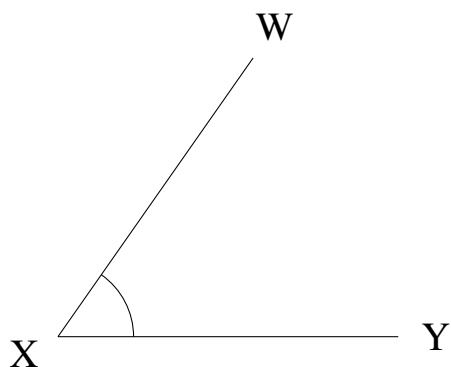
$$m\angle RST = 113^\circ$$

4.



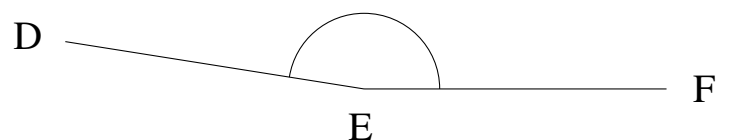
$$m\angle XYZ = 160^\circ$$

5.



$$m\angle WXY = 55^\circ$$

6.



$$m\angle DEF = 171^\circ$$