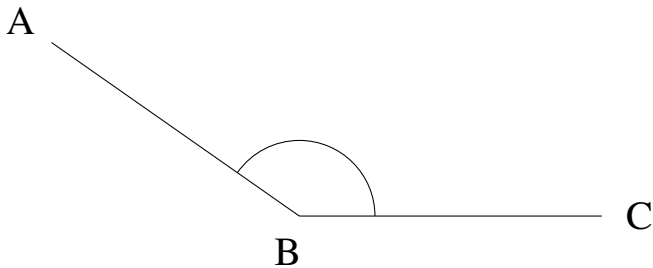


Mesure d'Angles (B)

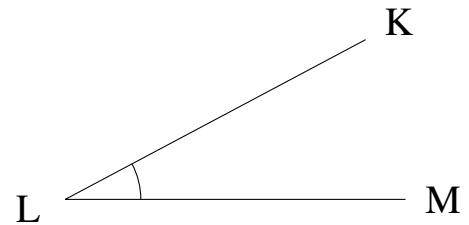
Estimez et ensuite mesurez à l'aide d'un rapporteur la valeur de chaque angle.

1.



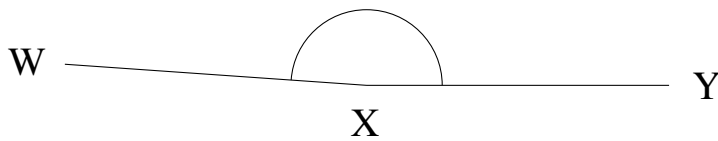
$$m\angle ABC =$$

2.



$$m\angle KLM =$$

3.



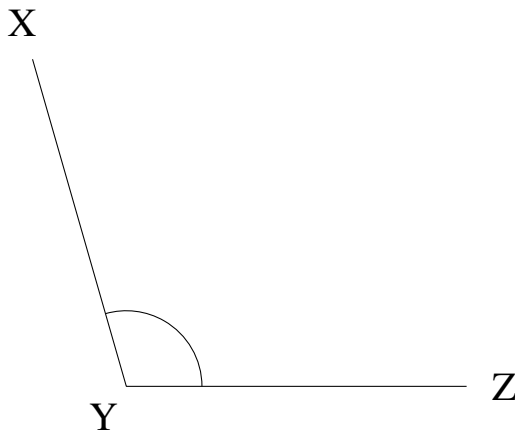
$$m\angle WXY =$$

4.



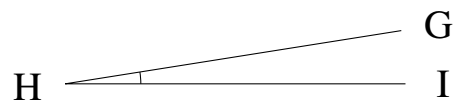
$$m\angle WXY =$$

5.



$$m\angle XYZ =$$

6.

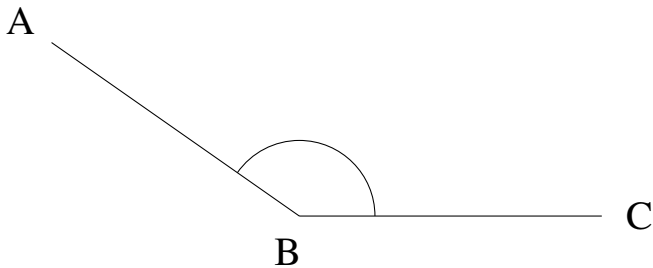


$$m\angle GHI =$$

Mesure d'Angles (B) Solutions

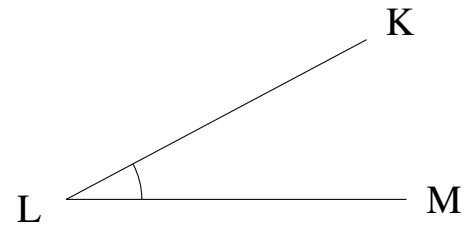
Estimez et ensuite mesurez à l'aide d'un rapporteur la valeur de chaque angle.

1.



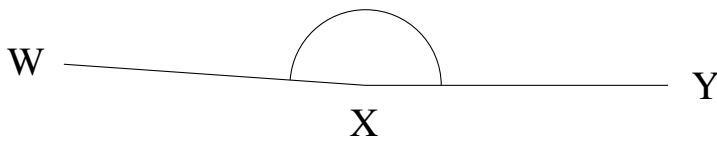
$$m\angle ABC = 145^\circ$$

2.



$$m\angle KLM = 28^\circ$$

3.



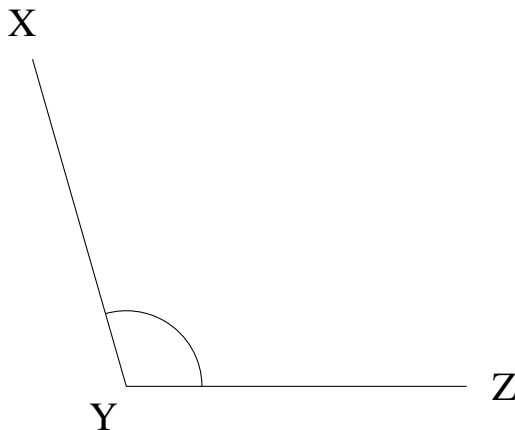
$$m\angle WXY = 176^\circ$$

4.



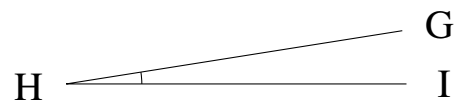
$$m\angle WXY = 3^\circ$$

5.



$$m\angle XYZ = 106^\circ$$

6.



$$m\angle GHI = 9^\circ$$