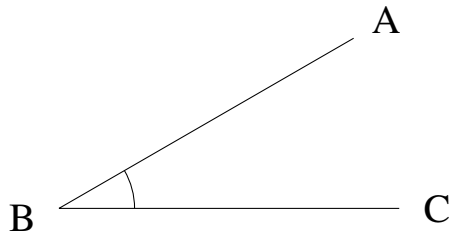


Mesure d'Angles (J)

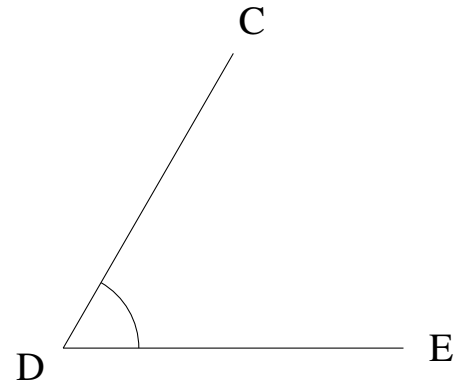
Estimez et ensuite mesurez à l'aide d'un rapporteur la valeur de chaque angle.

1.



$$m\angle ABC =$$

2.



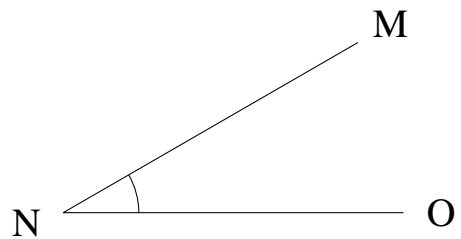
$$m\angle CDE =$$

3.



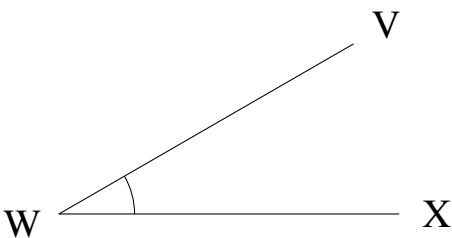
$$m\angle NOP =$$

4.



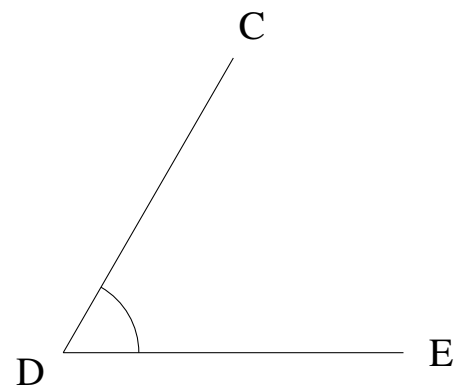
$$m\angle MNO =$$

5.



$$m\angle VWX =$$

6.



$$m\angle CDE =$$